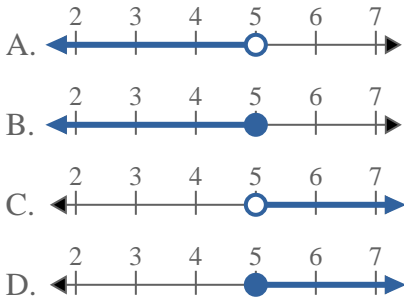


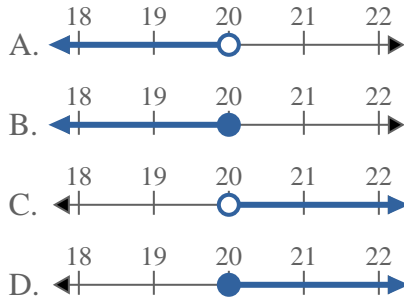


Solve each problem.

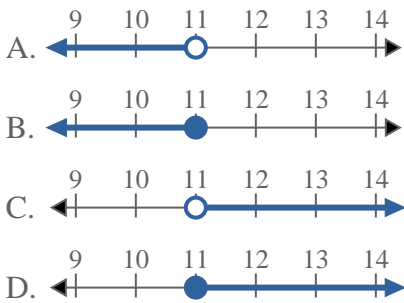
1) Which option best shows  $X < 5$



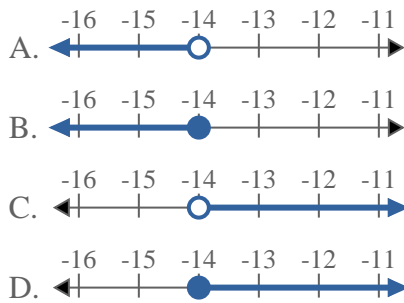
2) Which option best shows  $X < 20$



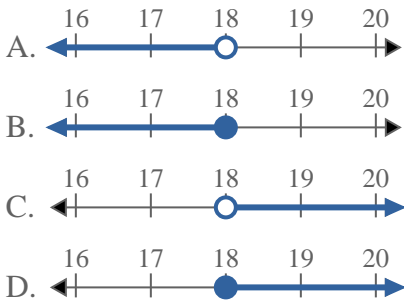
3) Which option best shows  $X < 11$



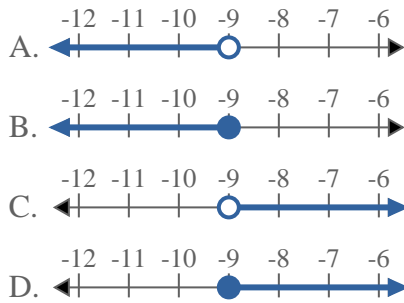
4) Which option best shows  $X \leq -14$



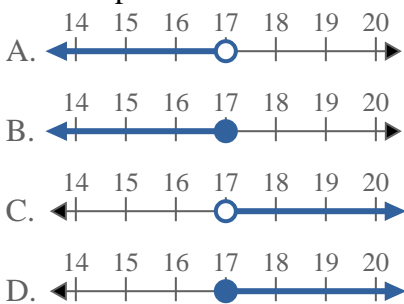
5) Which option best shows  $X \geq 18$



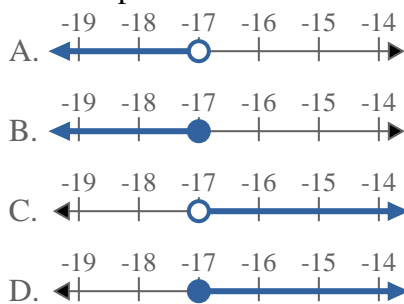
6) Which option best shows  $X > -9$



7) Which option best shows  $X < 17$



8) Which option best shows  $X < -17$



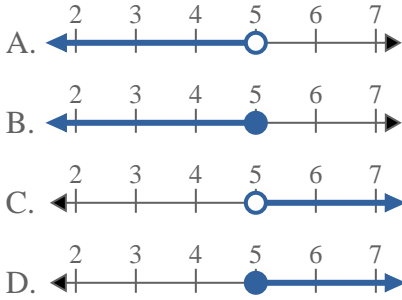
Answers

1. \_\_\_\_\_
2. \_\_\_\_\_
3. \_\_\_\_\_
4. \_\_\_\_\_
5. \_\_\_\_\_
6. \_\_\_\_\_
7. \_\_\_\_\_
8. \_\_\_\_\_

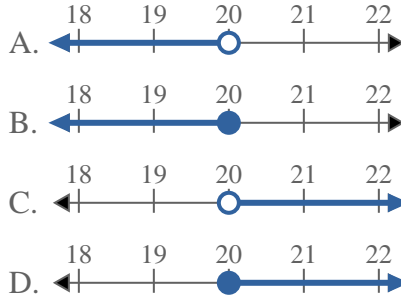


Solve each problem.

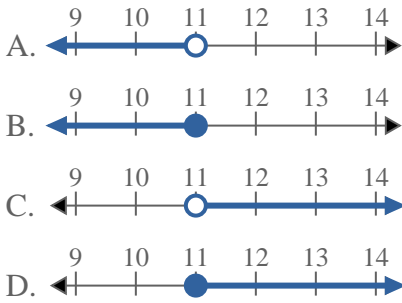
1) Which option best shows  $X < 5$



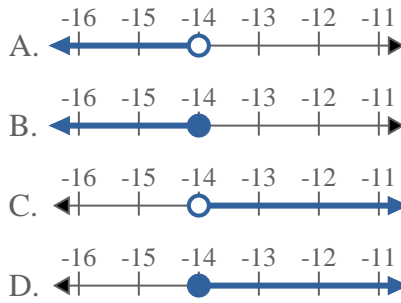
2) Which option best shows  $X < 20$



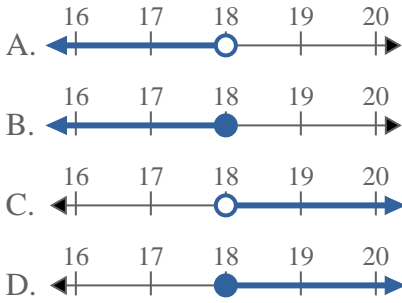
3) Which option best shows  $X < 11$



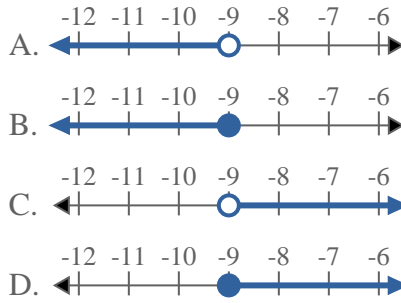
4) Which option best shows  $X \leq -14$



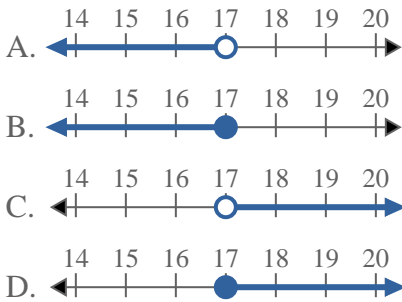
5) Which option best shows  $X \geq 18$



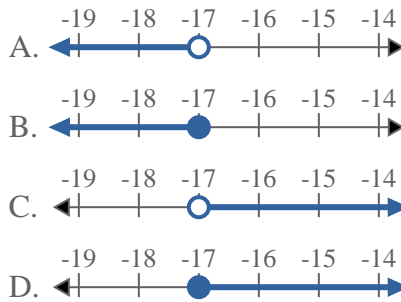
6) Which option best shows  $X > -9$



7) Which option best shows  $X < 17$



8) Which option best shows  $X < -17$



Answers

1.     **A**
2.     **A**
3.     **A**
4.     **B**
5.     **D**
6.     **C**
7.     **A**
8.     **A**