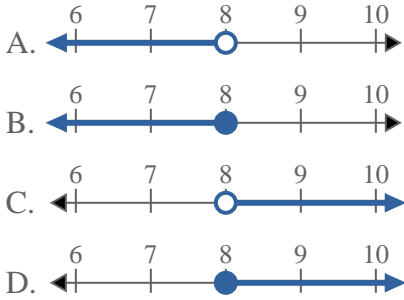


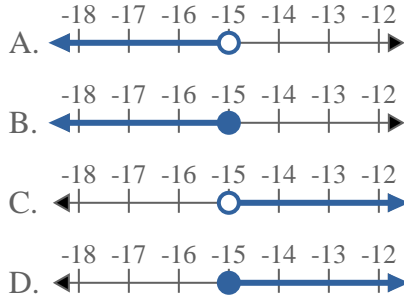


Solve each problem.

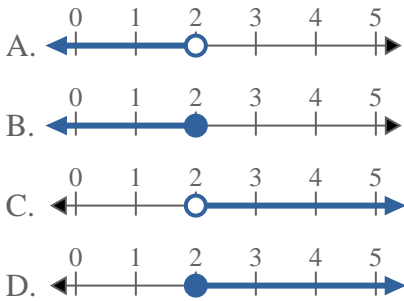
1) Which option best shows  $X \geq 8$



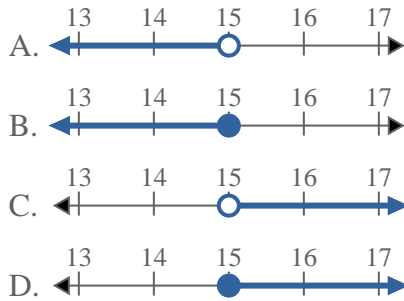
2) Which option best shows  $X > -15$



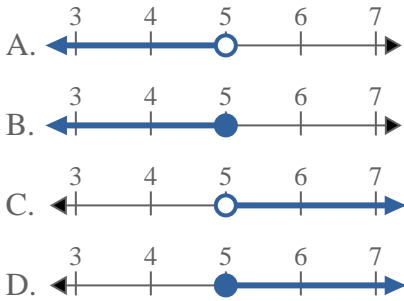
3) Which option best shows  $X \geq 2$



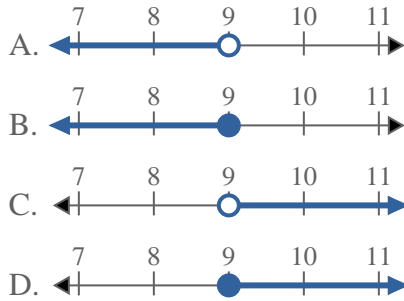
4) Which option best shows  $X \leq 15$



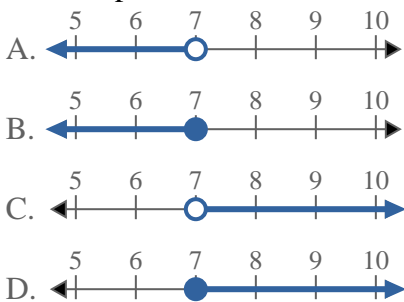
5) Which option best shows  $X \leq 5$



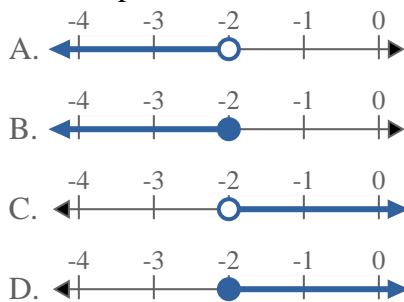
6) Which option best shows  $X \leq 9$



7) Which option best shows  $X \geq 7$



8) Which option best shows  $X \geq -2$



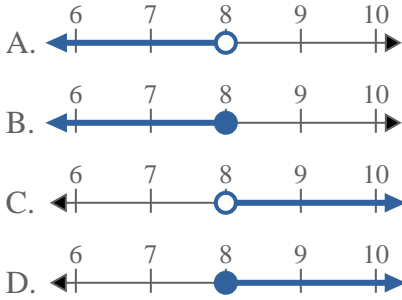
Answers

1. \_\_\_\_\_
2. \_\_\_\_\_
3. \_\_\_\_\_
4. \_\_\_\_\_
5. \_\_\_\_\_
6. \_\_\_\_\_
7. \_\_\_\_\_
8. \_\_\_\_\_

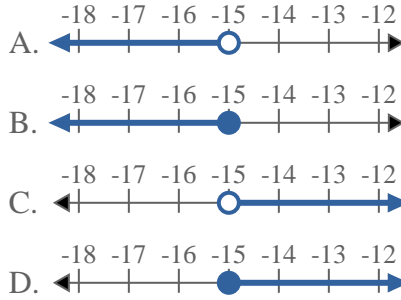


Solve each problem.

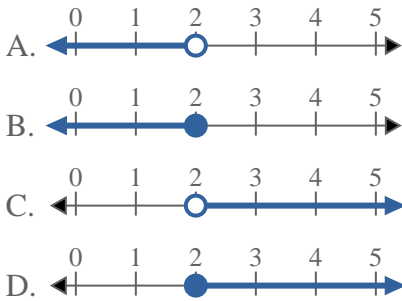
1) Which option best shows  $X \geq 8$



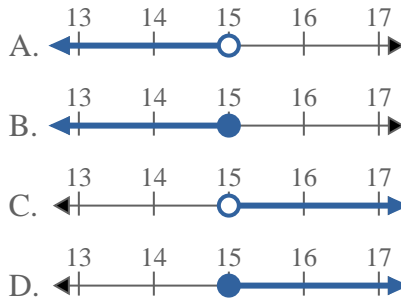
2) Which option best shows  $X > -15$



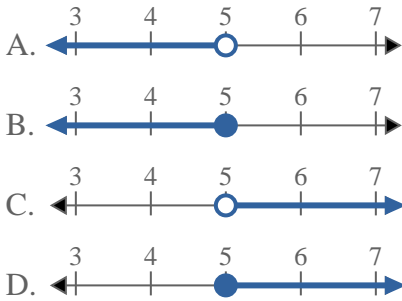
3) Which option best shows  $X \geq 2$



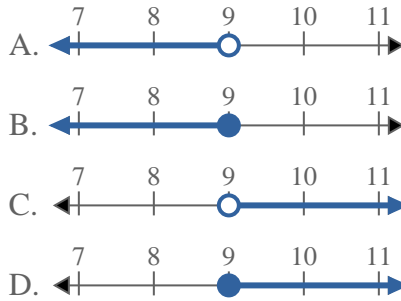
4) Which option best shows  $X \leq 15$



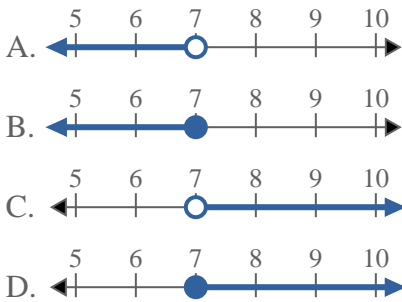
5) Which option best shows  $X \leq 5$



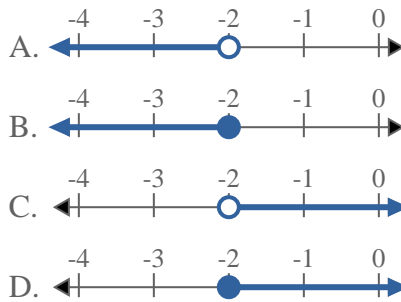
6) Which option best shows  $X \leq 9$



7) Which option best shows  $X \geq 7$



8) Which option best shows  $X \geq -2$



Answers

1.     **D**
2.     **C**
3.     **D**
4.     **B**
5.     **B**
6.     **B**
7.     **D**
8.     **D**