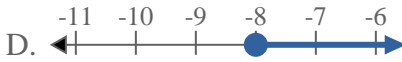
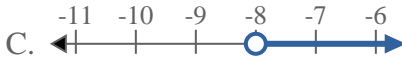


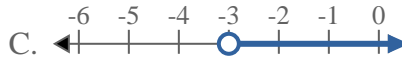
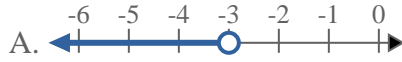


Solve each problem.

1) Which option best shows $X > -8$



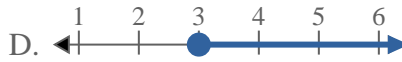
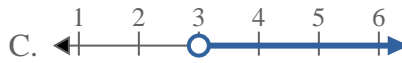
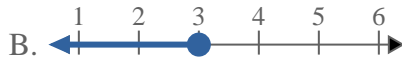
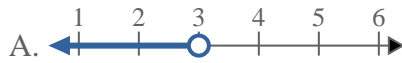
2) Which option best shows $X \leq -3$



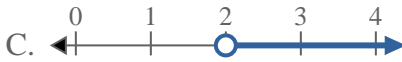
3) Which option best shows $X \leq 19$



4) Which option best shows $X < 3$



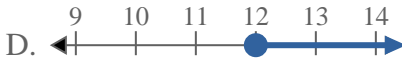
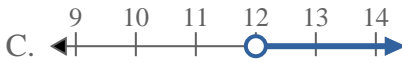
5) Which option best shows $X \leq 2$



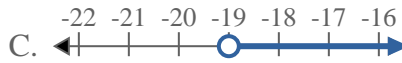
6) Which option best shows $X > 2$



7) Which option best shows $X > 12$



8) Which option best shows $X < -19$



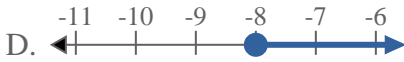
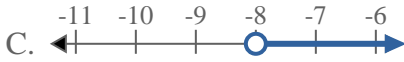
Answers

1. _____
2. _____
3. _____
4. _____
5. _____
6. _____
7. _____
8. _____

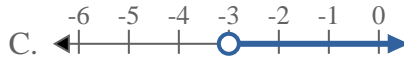


Solve each problem.

1) Which option best shows $X > -8$



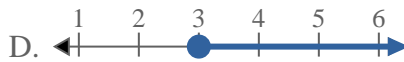
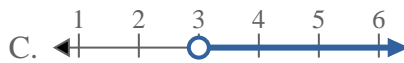
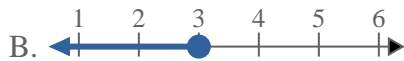
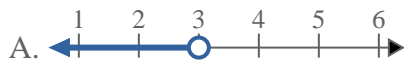
2) Which option best shows $X \leq -3$



3) Which option best shows $X \leq 19$



4) Which option best shows $X < 3$



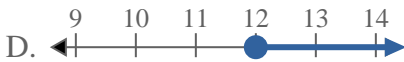
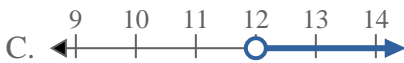
5) Which option best shows $X \leq 2$



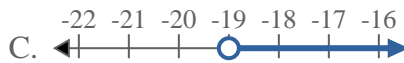
6) Which option best shows $X > 2$



7) Which option best shows $X > 12$



8) Which option best shows $X < -19$



Answers

1. C

2. B

3. B

4. A

5. B

6. C

7. C

8. A