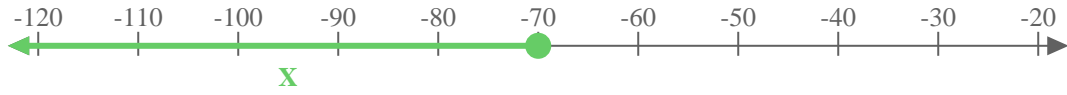




Use the numberline to express the inequality.

Ex) $X \leq -70$




1) $X < 80$



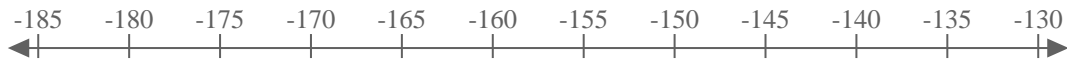
2) $X \geq 17$



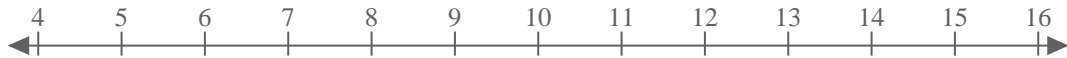
3) $X \leq -12$



4) $X \leq -160$



5) $X \leq 10$



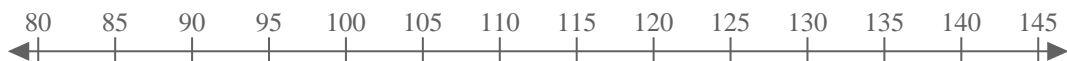
6) $X < -15$



7) $X \geq -7$



8) $X \geq 115$



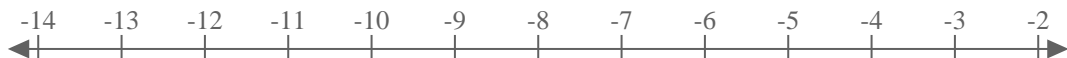
9) $X < 0$



10) $X > -6$



11) $X \geq -9$



12) $X > 45$



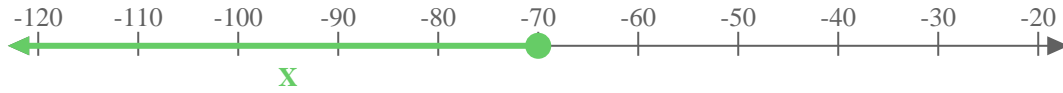
13) $X < -115$



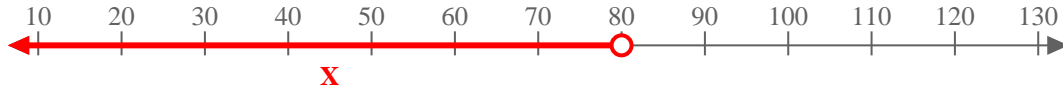


Use the numberline to express the inequality.

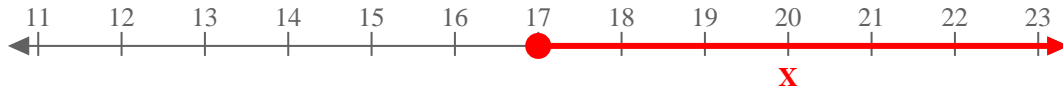
Ex) $X \leq -70$



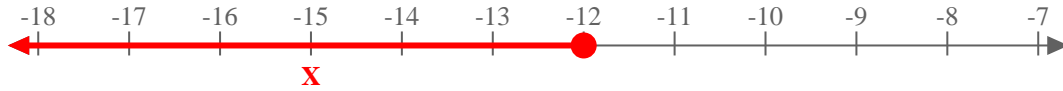
1) $X < 80$



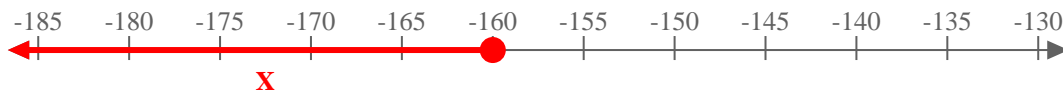
2) $X \geq 17$



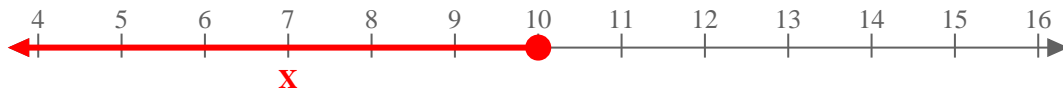
3) $X \leq -12$



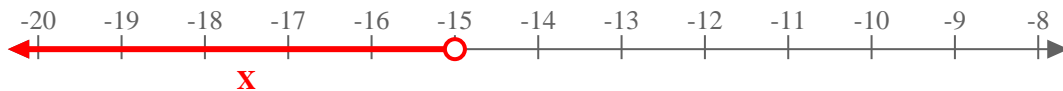
4) $X \leq -160$



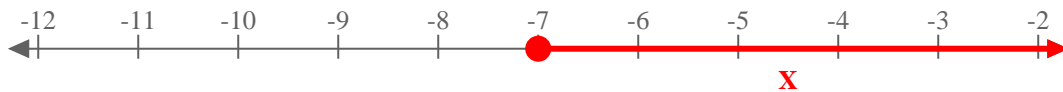
5) $X \leq 10$



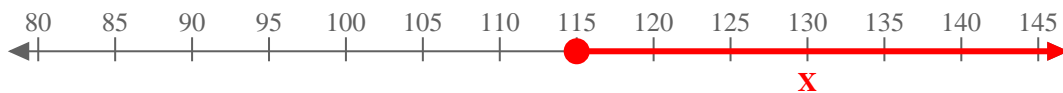
6) $X < -15$



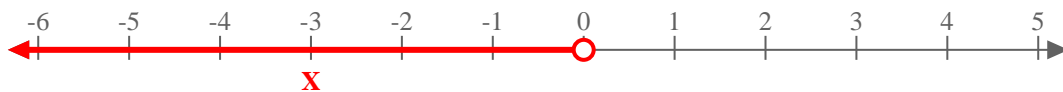
7) $X \geq -7$



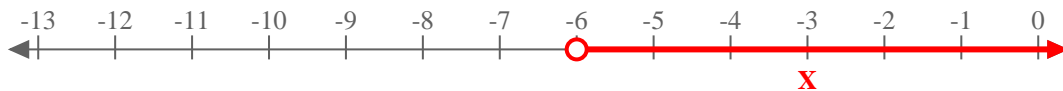
8) $X \geq 115$



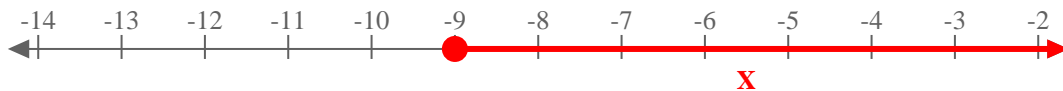
9) $X < 0$



10) $X > -6$



11) $X \geq -9$



12) $X > 45$



13) $X < -115$

