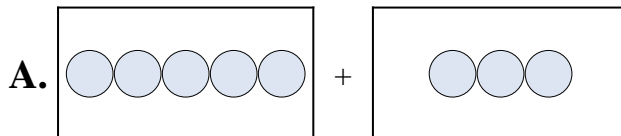


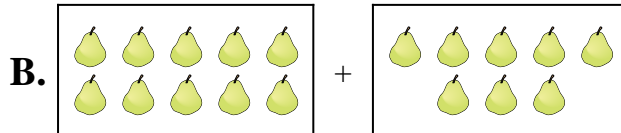


Match each addition equation to its visual equivalent.

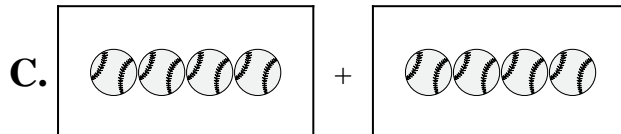
1)  $4 + 4$



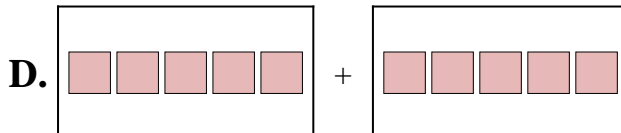
2)  $6 + 6$



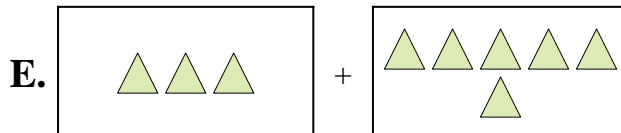
3)  $3 + 5$



4)  $3 + 6$



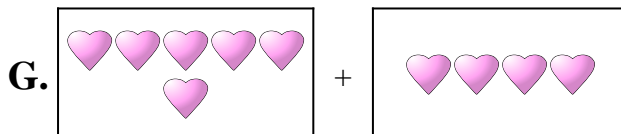
5)  $4 + 3$



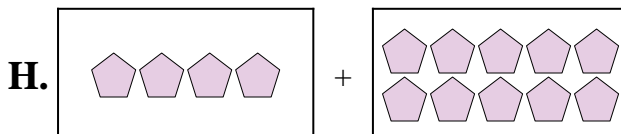
6)  $5 + 3$




7)  $5 + 5$



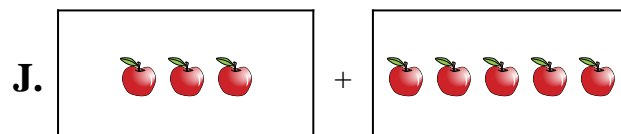
8)  $4 + 10$



9)  $6 + 4$



10)  $10 + 8$



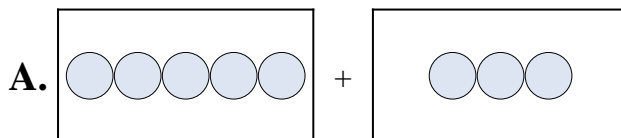
Answers

1. \_\_\_\_\_
2. \_\_\_\_\_
3. \_\_\_\_\_
4. \_\_\_\_\_
5. \_\_\_\_\_
6. \_\_\_\_\_
7. \_\_\_\_\_
8. \_\_\_\_\_
9. \_\_\_\_\_
10. \_\_\_\_\_

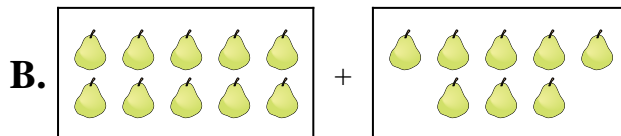


Match each addition equation to its visual equivalent.

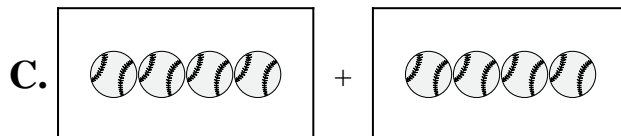
1)  $4 + 4$



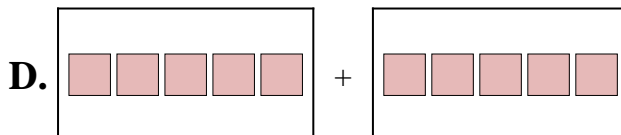
2)  $6 + 6$



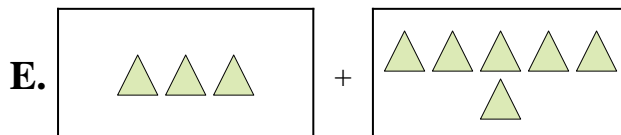
3)  $3 + 5$



4)  $3 + 6$



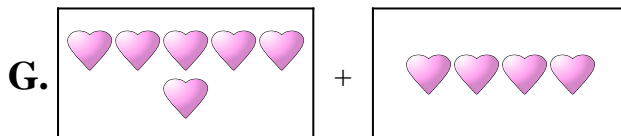
5)  $4 + 3$



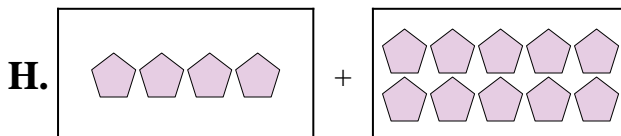
6)  $5 + 3$




7)  $5 + 5$



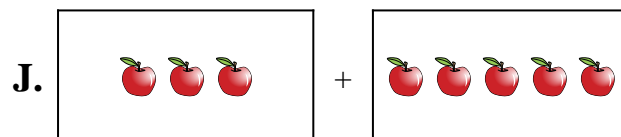
8)  $4 + 10$



9)  $6 + 4$



10)  $10 + 8$



Answers

1.     **C**    

2.     **F**    

3.     **J**    

4.     **E**    

5.     **I**    

6.     **A**    

7.     **D**    

8.     **H**    

9.     **G**    

10.     **B**