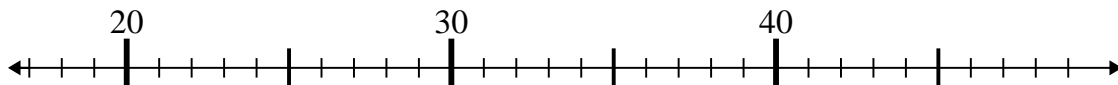




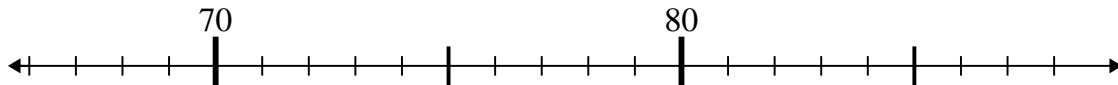
Use the numberlines to solve each problem.

Answers

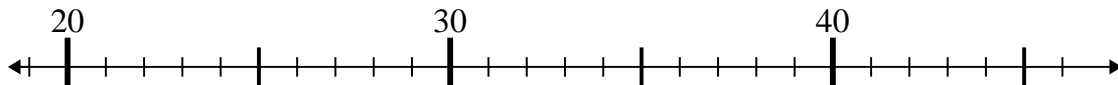
1) $26 + 3 =$



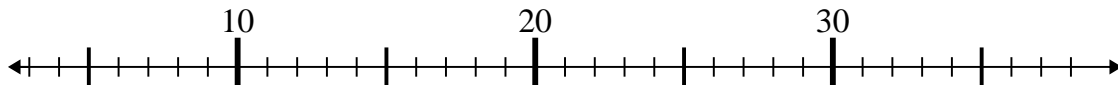
2) $75 - 5 =$



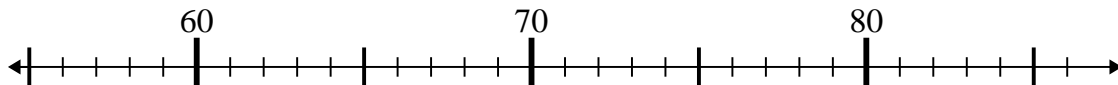
3) $37 - 17 =$



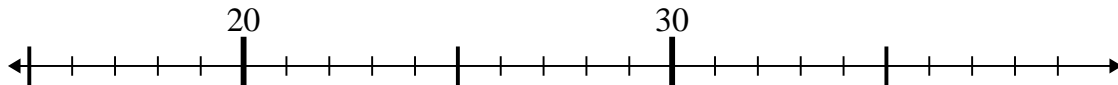
4) $14 + 17 =$



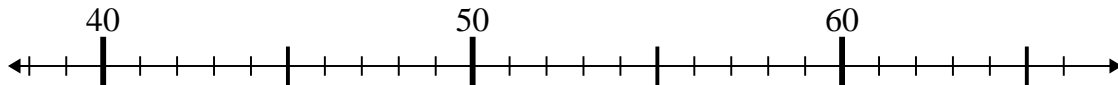
5) $58 + 6 =$



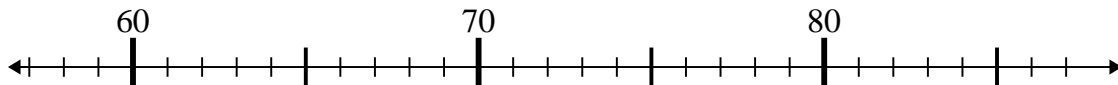
6) $22 - 3 =$



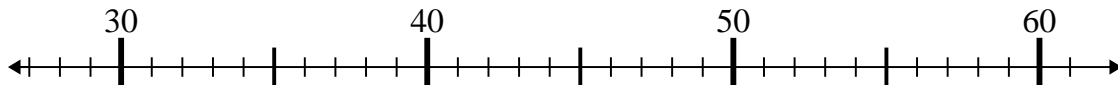
7) $59 + 7 =$



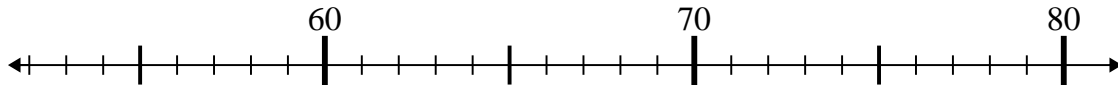
8) $76 - 7 =$



9) $34 + 0 =$



10) $69 + 6 =$

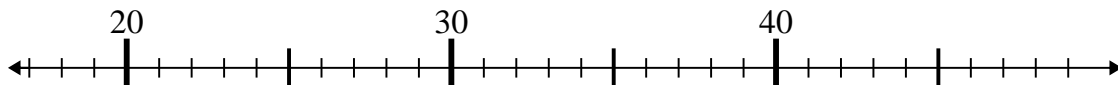


- 1. _____
- 2. _____
- 3. _____
- 4. _____
- 5. _____
- 6. _____
- 7. _____
- 8. _____
- 9. _____
- 10. _____

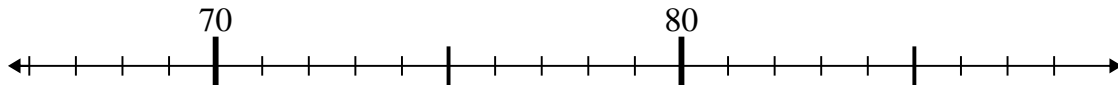


Use the numberlines to solve each problem.

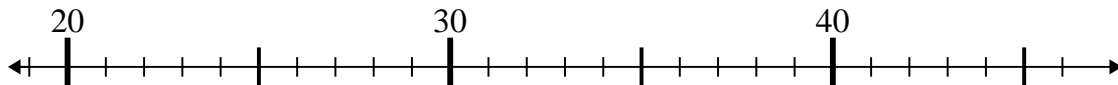
1) $26 + 3 =$



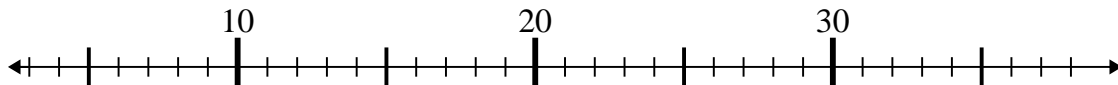
2) $75 - 5 =$



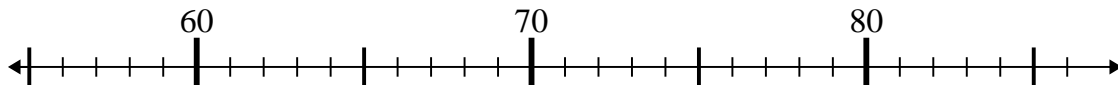
3) $37 - 17 =$



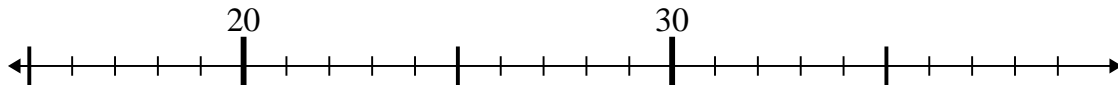
4) $14 + 17 =$



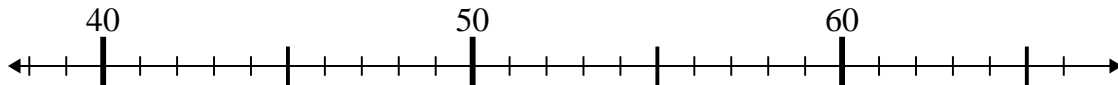
5) $58 + 6 =$



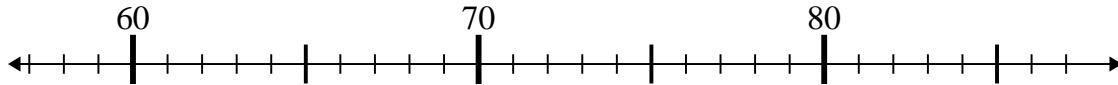
6) $22 - 3 =$



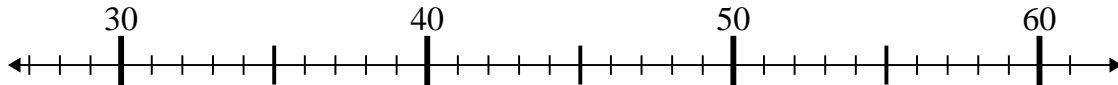
7) $59 + 7 =$



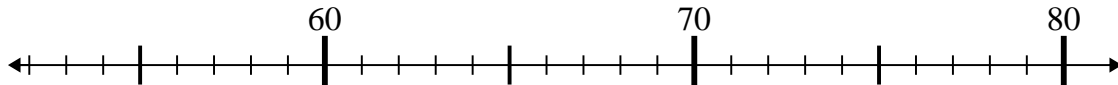
8) $76 - 7 =$



9) $34 + 0 =$



10) $69 + 6 =$



Answers

1. 29
2. 70
3. 20
4. 31
5. 64
6. 19
7. 66
8. 69
9. 34
10. 75