

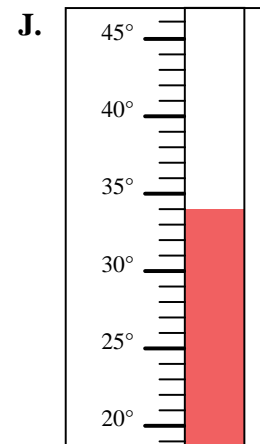
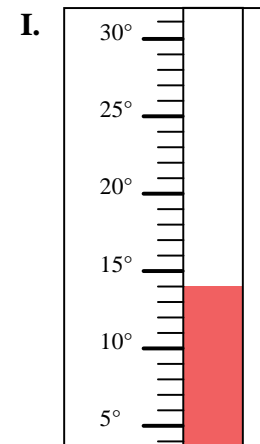
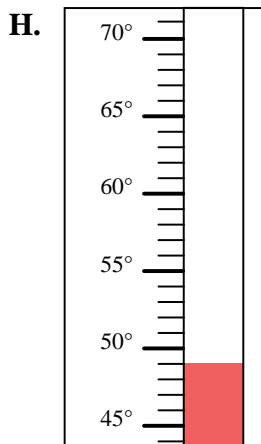
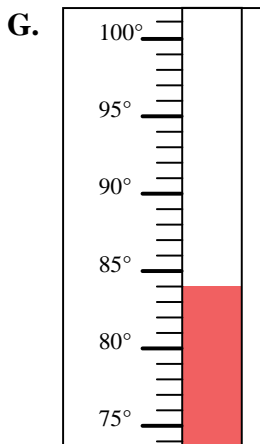
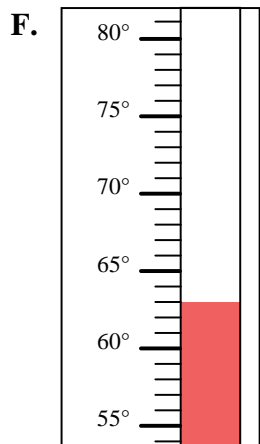
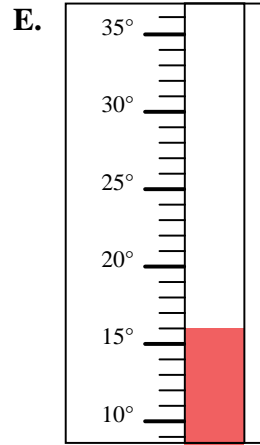
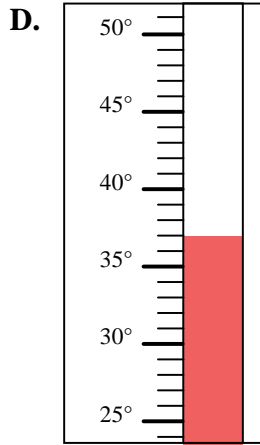
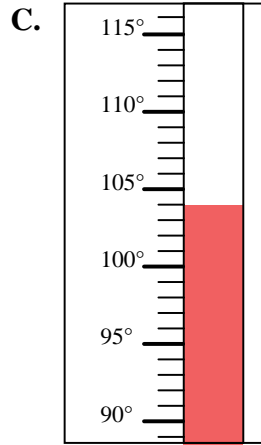
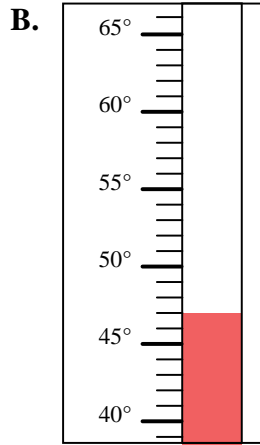
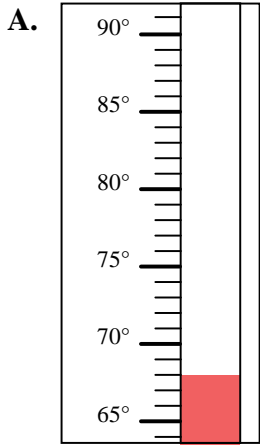


Determine which letter best answers each question.

Answers

- 1) Which thermometer best represents the temperature 63°?
- 2) Which thermometer best represents the temperature 104°?
- 3) Which thermometer best represents the temperature 14°?
- 4) Which thermometer best represents the temperature 16°?
- 5) Which thermometer best represents the temperature 68°?
- 6) Which thermometer best represents the temperature 84°?
- 7) Which thermometer best represents the temperature 49°?
- 8) Which thermometer best represents the temperature 37°?
- 9) Which thermometer best represents the temperature 47°?
- 10) Which thermometer best represents the temperature 34°?

1. _____
2. _____
3. _____
4. _____
5. _____
6. _____
7. _____
8. _____
9. _____
10. _____





Determine which letter best answers each question.

Answers

- 1) Which thermometer best represents the temperature 63° ?
- 2) Which thermometer best represents the temperature 104° ?
- 3) Which thermometer best represents the temperature 14° ?
- 4) Which thermometer best represents the temperature 16° ?
- 5) Which thermometer best represents the temperature 68° ?
- 6) Which thermometer best represents the temperature 84° ?
- 7) Which thermometer best represents the temperature 49° ?
- 8) Which thermometer best represents the temperature 37° ?
- 9) Which thermometer best represents the temperature 47° ?
- 10) Which thermometer best represents the temperature 34° ?

1. **F**
2. **C**
3. **I**
4. **E**
5. **A**
6. **G**
7. **H**
8. **D**
9. **B**
10. **J**

