



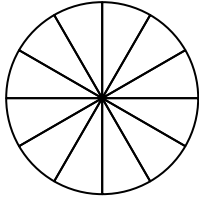
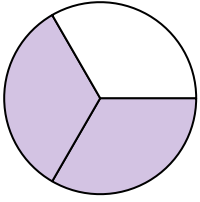
Shade in the equivalent fraction and answer with shaded fraction.

**Answers**

1)

$\frac{2}{3}$

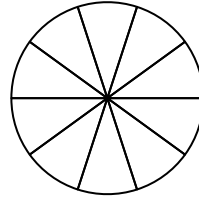
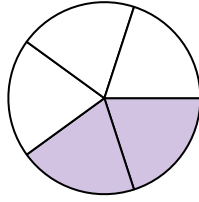
$\frac{2 \times 4}{3 \times 4}$



2)

$\frac{2}{5}$

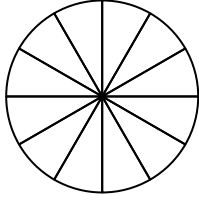
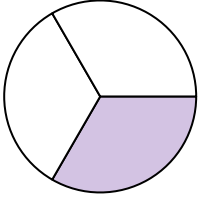
$\frac{2 \times 2}{5 \times 2}$



3)

$\frac{1}{3}$

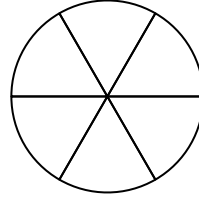
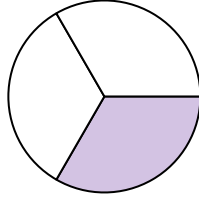
$\frac{1 \times 4}{3 \times 4}$



4)

$\frac{1}{3}$

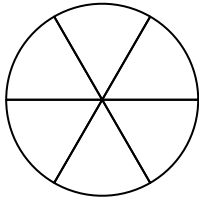
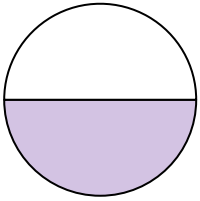
$\frac{1 \times 2}{3 \times 2}$



5)

$\frac{1}{2}$

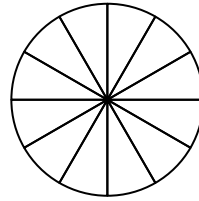
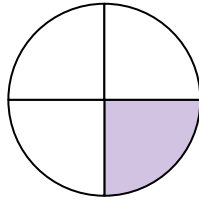
$\frac{1 \times 3}{2 \times 3}$



6)

$\frac{1}{4}$

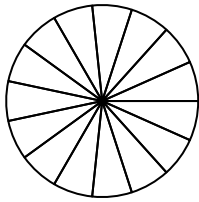
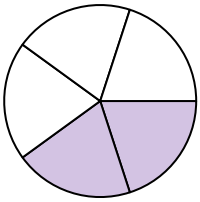
$\frac{1 \times 3}{4 \times 3}$



7)

$\frac{2}{5}$

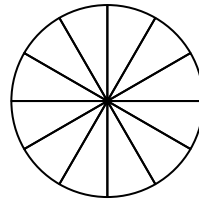
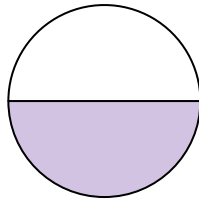
$\frac{2 \times 3}{5 \times 3}$



8)

$\frac{1}{2}$

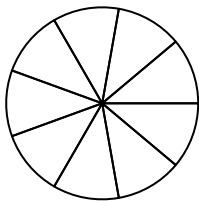
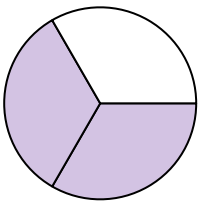
$\frac{1 \times 6}{2 \times 6}$



9)

$\frac{2}{3}$

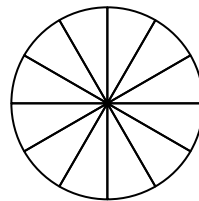
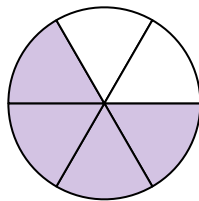
$\frac{2 \times 3}{3 \times 3}$



10)

$\frac{4}{6}$

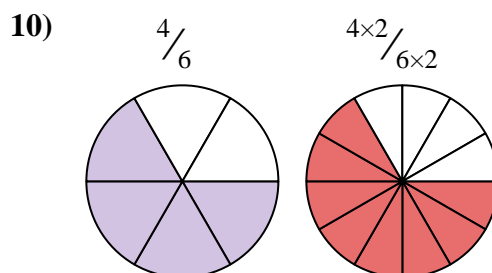
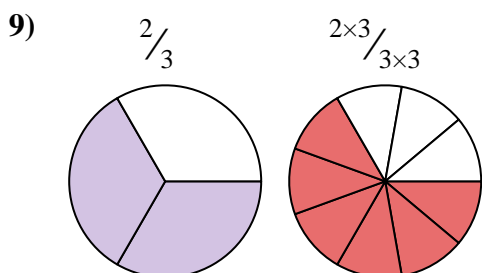
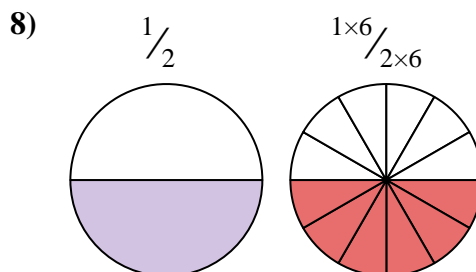
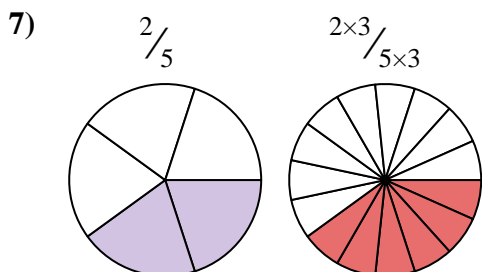
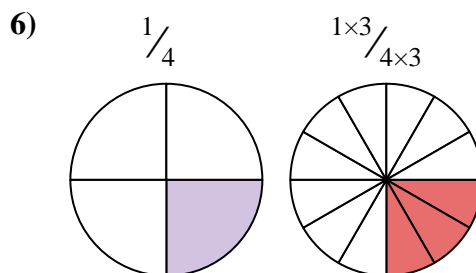
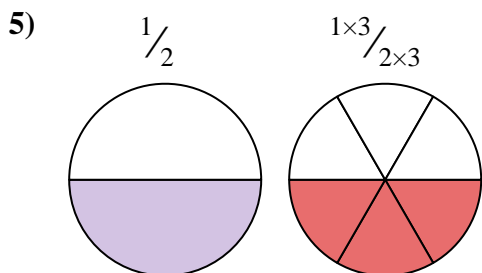
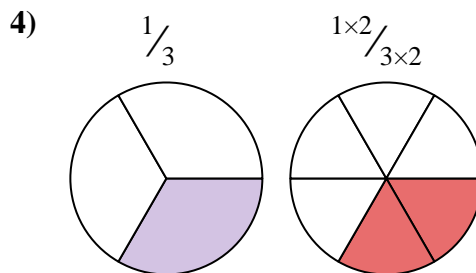
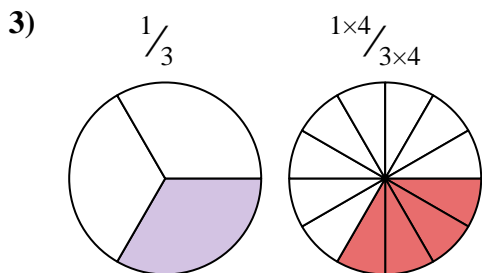
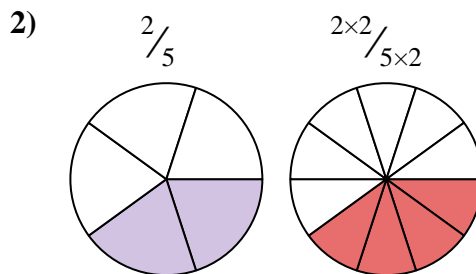
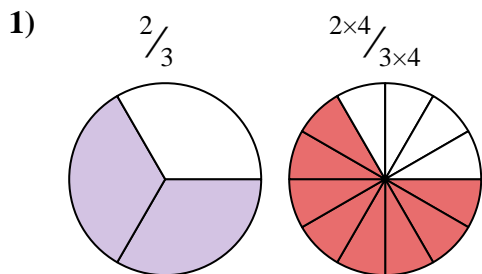
$\frac{4 \times 2}{6 \times 2}$



1. \_\_\_\_\_
2. \_\_\_\_\_
3. \_\_\_\_\_
4. \_\_\_\_\_
5. \_\_\_\_\_
6. \_\_\_\_\_
7. \_\_\_\_\_
8. \_\_\_\_\_
9. \_\_\_\_\_
10. \_\_\_\_\_



Shade in the equivalent fraction and answer with shaded fraction.



Answers

1.  $\frac{8}{12}$

2.  $\frac{4}{10}$

3.  $\frac{4}{12}$

4.  $\frac{2}{6}$

5.  $\frac{3}{6}$

6.  $\frac{3}{12}$

7.  $\frac{6}{15}$

8.  $\frac{6}{12}$

9.  $\frac{6}{9}$

10.  $\frac{8}{12}$