



Fill in the blanks to find the amounts.

Answers

Ex)

1)

2)

Ex. 4

1. _____

2. _____

3. _____

4. _____

5. _____

6. _____

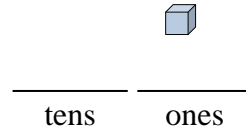
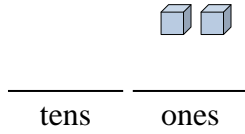
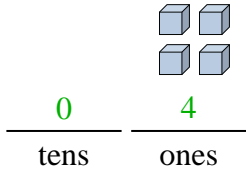
7. _____

8. _____

9. _____

10. _____

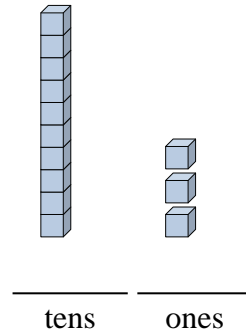
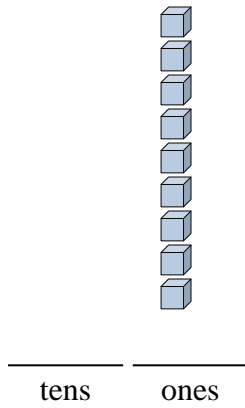
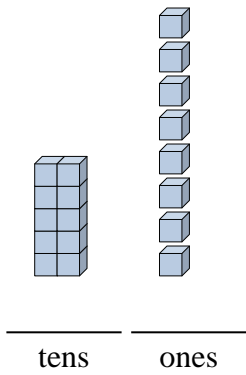
11. _____



3)

4)

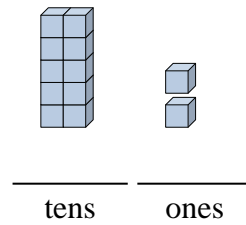
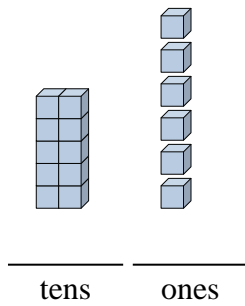
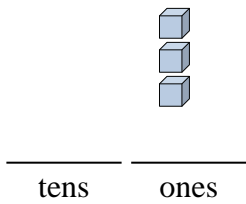
5)



6)

7)

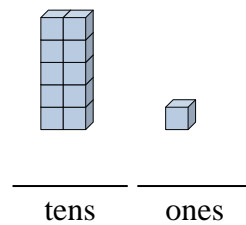
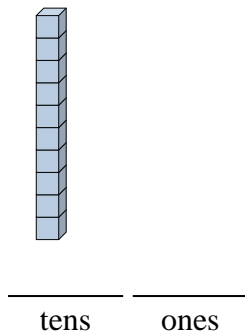
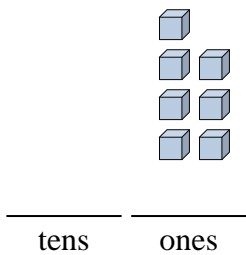
8)



9)

10)

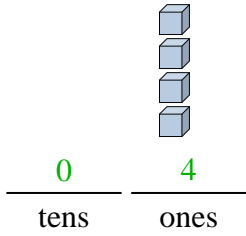
11)



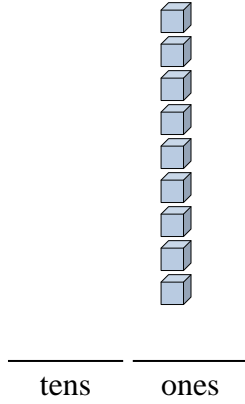


Fill in the blanks to find the amounts.

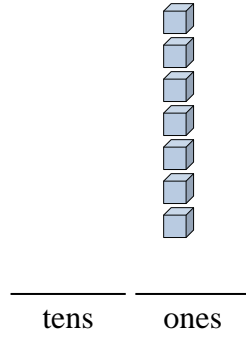
Ex)



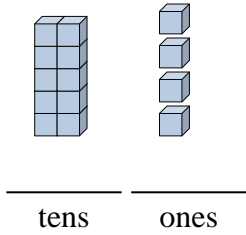
1)



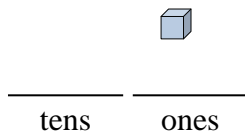
2)



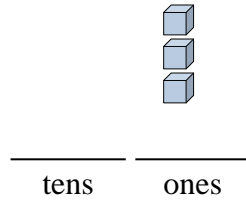
3)



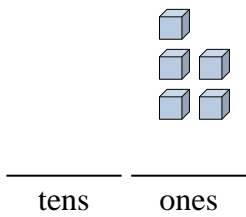
4)



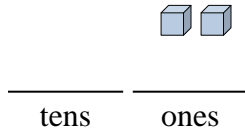
5)



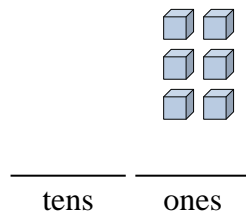
6)



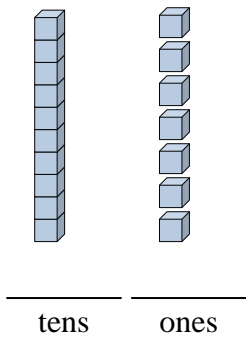
7)



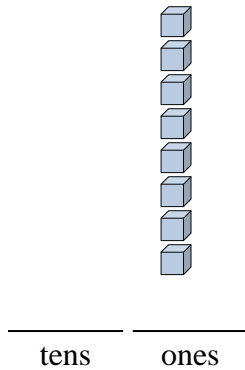
8)



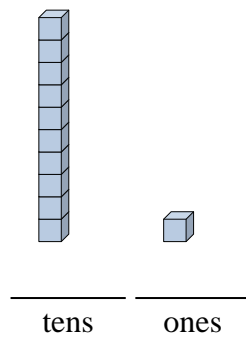
9)



10)



11)



Answers

Ex. 4

1. _____

2. _____

3. _____

4. _____

5. _____

6. _____

7. _____

8. _____

9. _____

10. _____

11. _____

