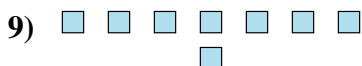
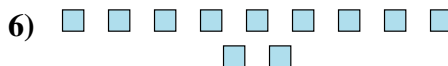
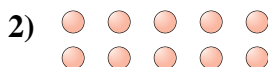





Determine if the number of shapes is even or odd.



Answers

- 1. _____
- 2. _____
- 3. _____
- 4. _____
- 5. _____
- 6. _____
- 7. _____
- 8. _____
- 9. _____
- 10. _____



Determine if the number of shapes is even or odd.

1) 18

2) 10

3) 6

4) 13

5) 6

6) 11

7) 12

8) 15

9) 8

10) 16

Answers

1. even

2. even

3. even

4. odd

5. even

6. odd

7. even

8. odd

9. even

10. even