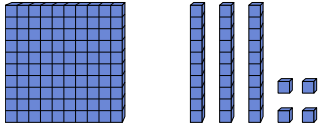




Find the value each set of blocks represents.

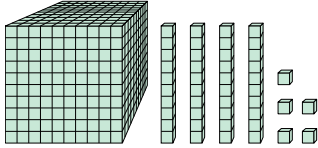
Answers

1)



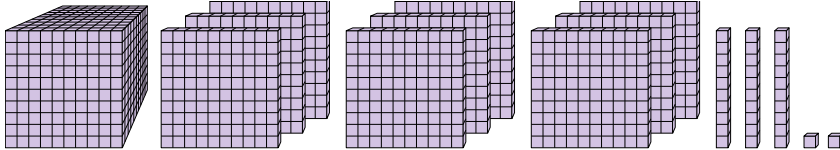
1. \_\_\_\_\_

2)



2. \_\_\_\_\_

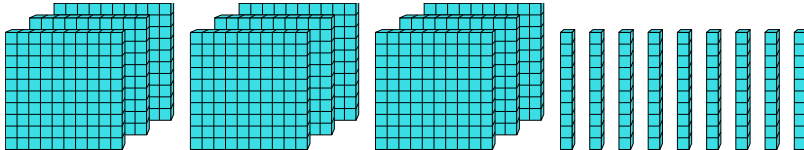
3)



3. \_\_\_\_\_

4. \_\_\_\_\_

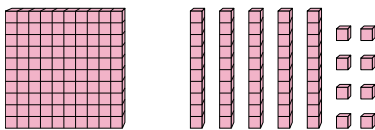
4)



5. \_\_\_\_\_

6. \_\_\_\_\_

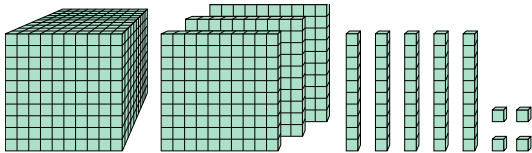
5)



7. \_\_\_\_\_

8. \_\_\_\_\_

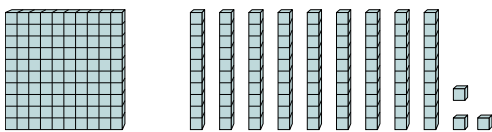
6)



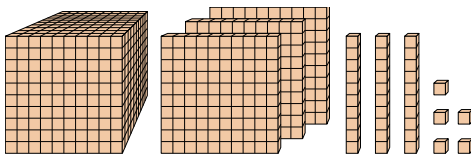
9. \_\_\_\_\_

10. \_\_\_\_\_

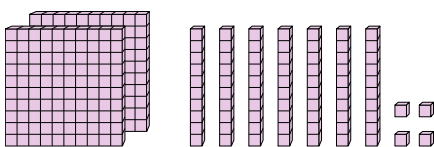
7)



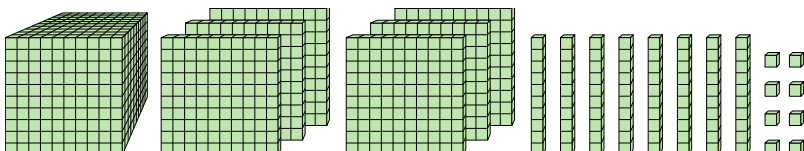
8)



9)



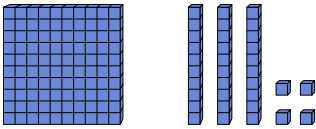
10)





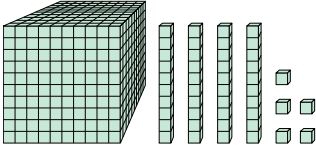
Find the value each set of blocks represents.

1)



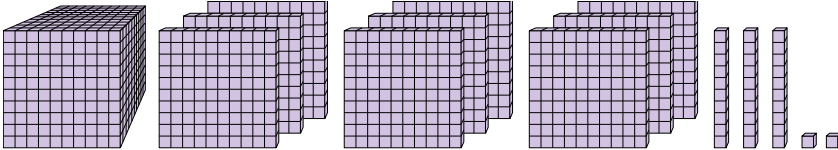
1. 134

2)



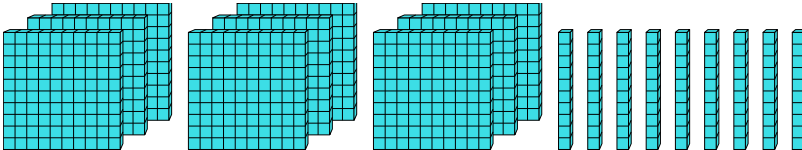
2. 1,045

3)



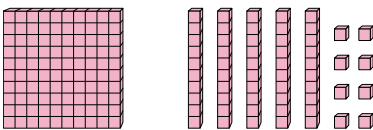
3. 1,932

4)



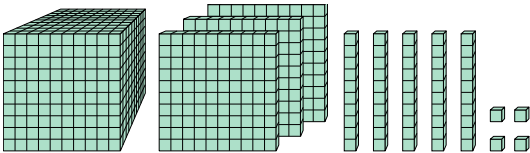
4. 990

5)



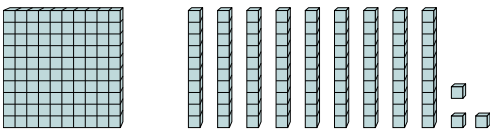
5. 158

6)



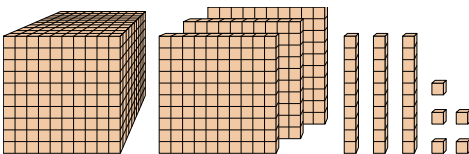
6. 1,354

7)



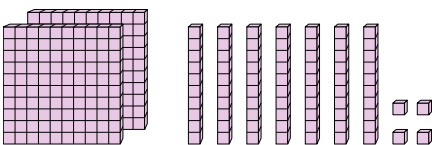
7. 193

8)



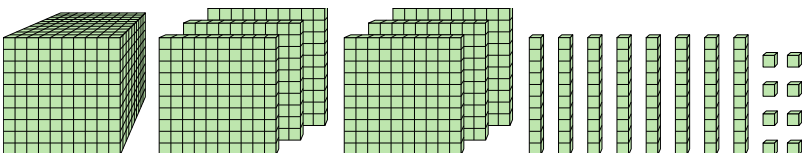
8. 1,335

9)



9. 274

10)



10. 1,688

Answers

1. 134

2. 1,045

3. 1,932

4. 990

5. 158

6. 1,354

7. 193

8. 1,335

9. 274

10. 1,688