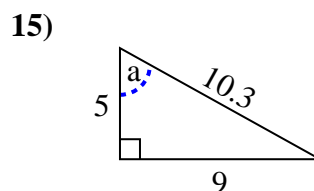
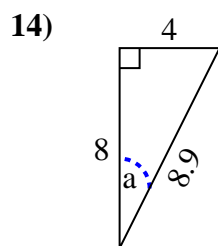
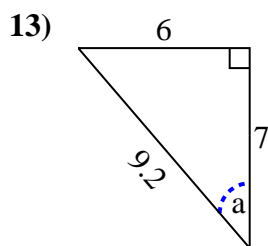
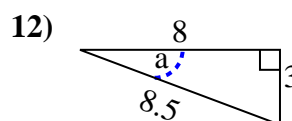
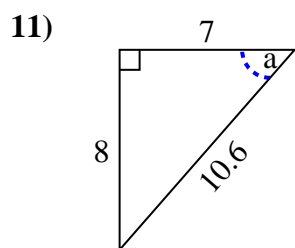
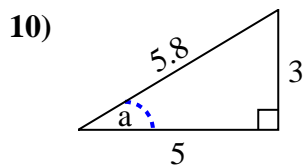
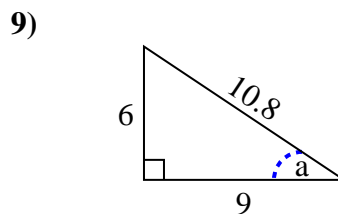
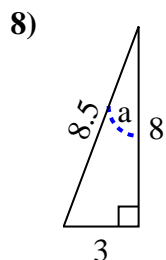
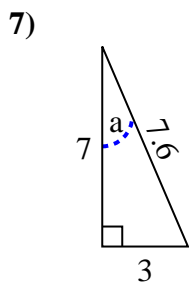
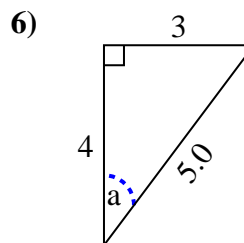
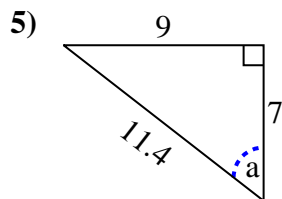
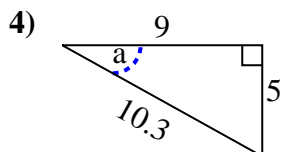
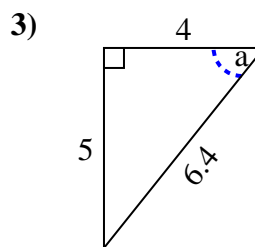
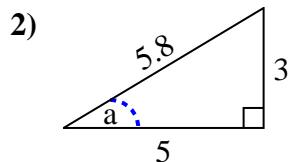
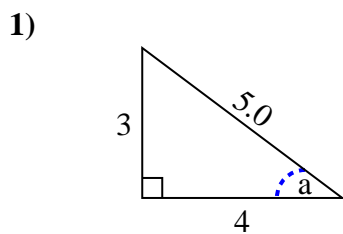


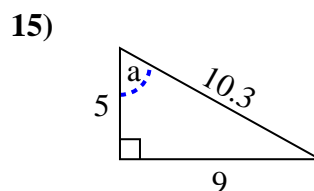
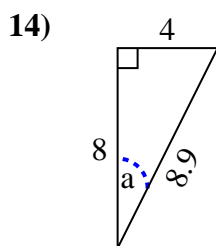
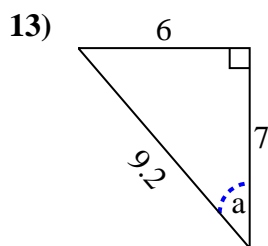
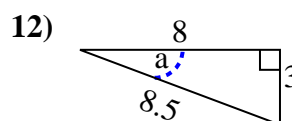
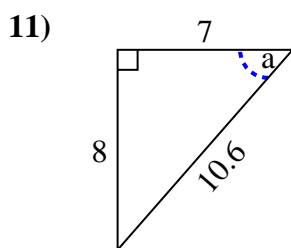
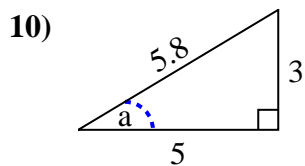
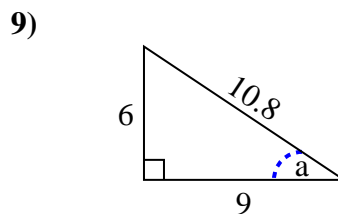
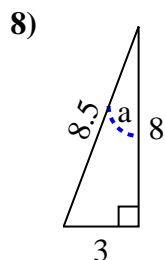
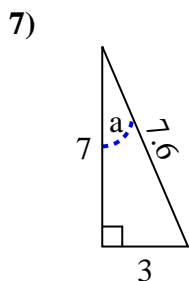
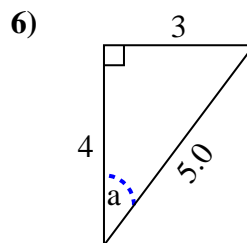
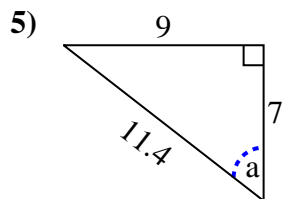
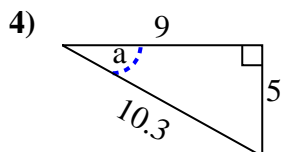
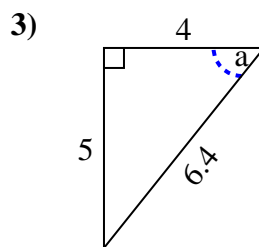
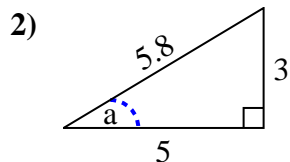
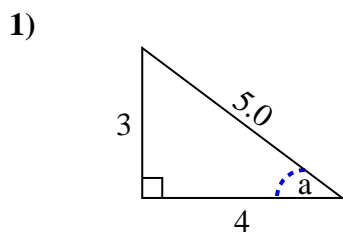


Identify the Opposite, Adjacent and Hypotenuse of Angle a.

Answers



1. _____
2. _____
3. _____
4. _____
5. _____
6. _____
7. _____
8. _____
9. _____
10. _____
11. _____
12. _____
13. _____
14. _____
15. _____

Identify the Opposite, Adjacent and Hypotenuse of Angle a .**Answers**

1. 3, 4, 5.0
2. 3, 5, 5.8
3. 5, 4, 6.4
4. 5, 9, 10.3
5. 9, 7, 11.4
6. 3, 4, 5.0
7. 3, 7, 7.6
8. 3, 8, 8.5
9. 6, 9, 10.8
10. 3, 5, 5.8
11. 8, 7, 10.6
12. 3, 8, 8.5
13. 6, 7, 9.2
14. 4, 8, 8.9
15. 9, 5, 10.3