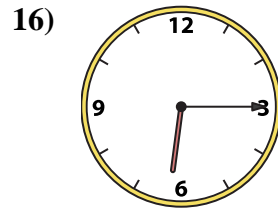
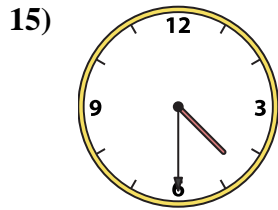
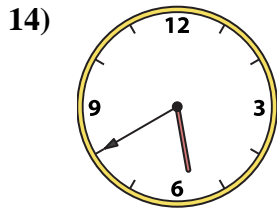
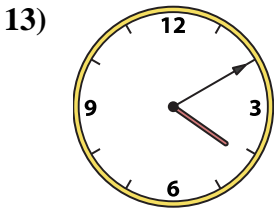
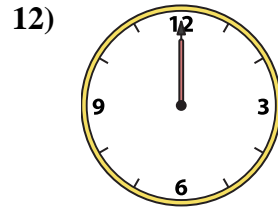
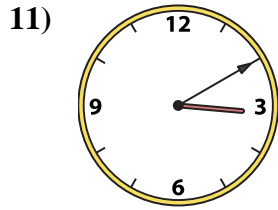
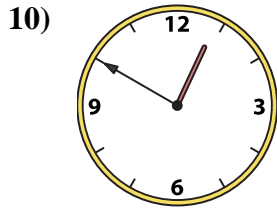
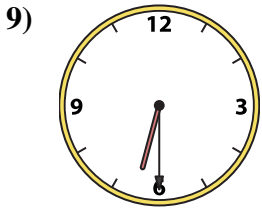
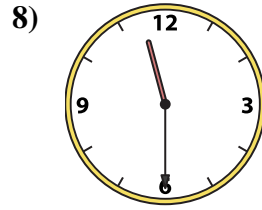
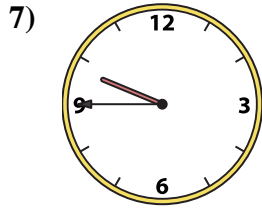

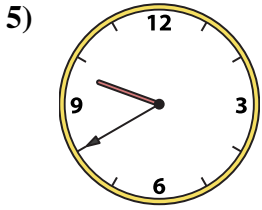
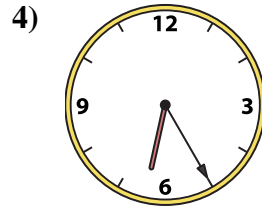

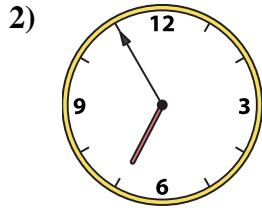
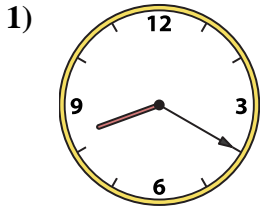




Match the analog clock to the digital clock.

Answers



1. _____
2. _____
3. _____
4. _____
5. _____
6. _____
7. _____
8. _____
9. _____
10. _____
11. _____
12. _____
13. _____
14. _____
15. _____
16. _____

A. 6:25

B. 3:10

C. 4:10

D. 8:55

E. 9:40

F. 5:40

G. 6:30

H. 8:20

I. 4:30

J. 9:45

K. 12:00

L. 11:30

M. 6:55

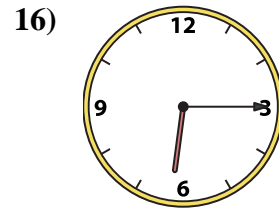
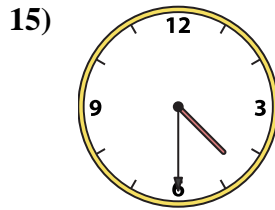
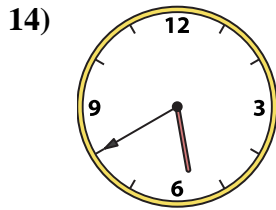
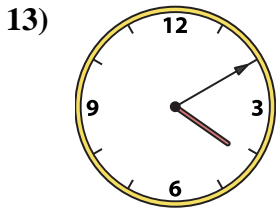
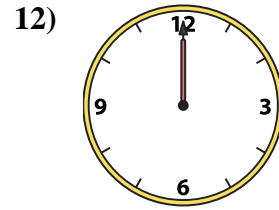
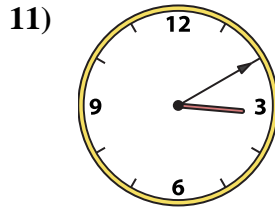
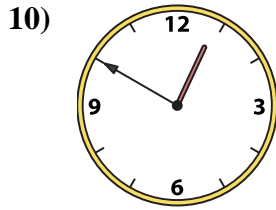
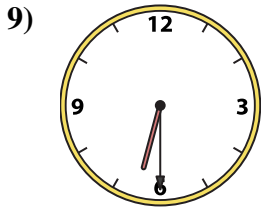
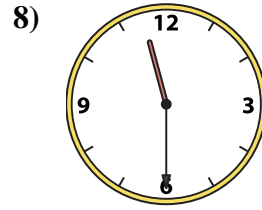
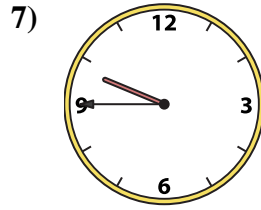
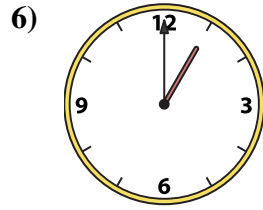
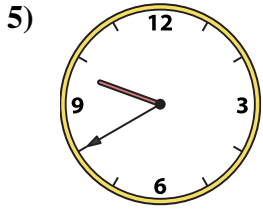
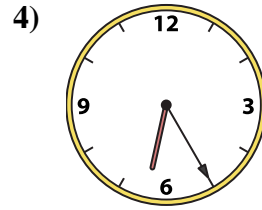
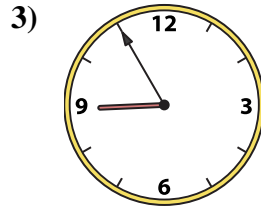
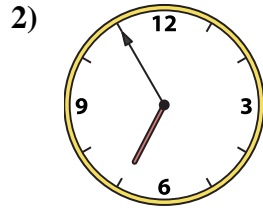
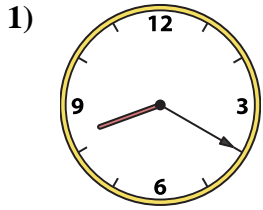
N. 6:15

O. 12:50

P. 1:00



Match the analog clock to the digital clock.



A. **6:25**

B. **3:10**

C. **4:10**

D. **8:55**

E. **9:40**

F. **5:40**

G. **6:30**

H. **8:20**

I. **4:30**

J. **9:45**

K. **12:00**

L. **11:30**

M. **6:55**

N. **6:15**

O. **12:50**

P. **1:00**

Answers

1. **H**

2. **M**

3. **D**

4. **A**

5. **E**

6. **P**

7. **J**

8. **L**

9. **G**

10. **O**

11. **B**

12. **K**

13. **C**

14. **F**

15. **I**

16. **N**