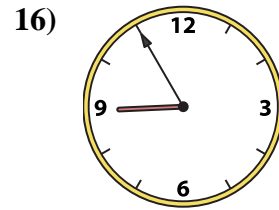
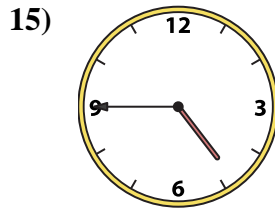
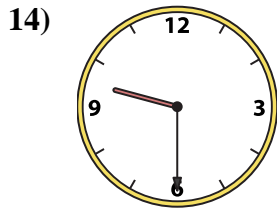
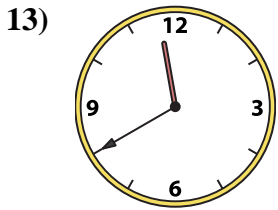
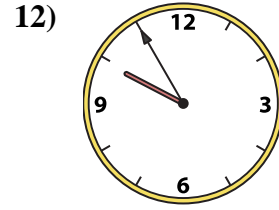
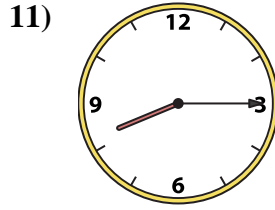
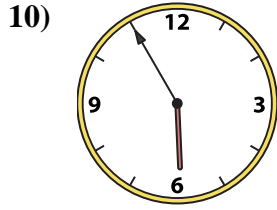
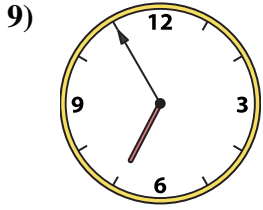
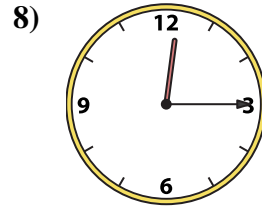
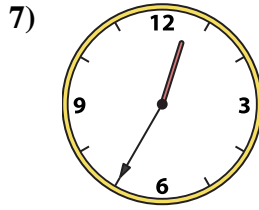
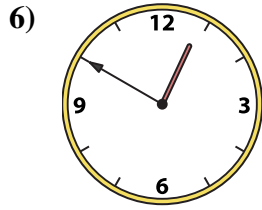
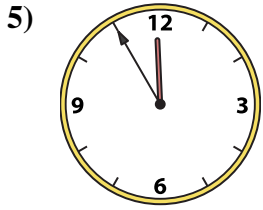
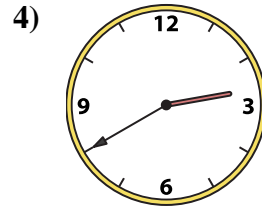
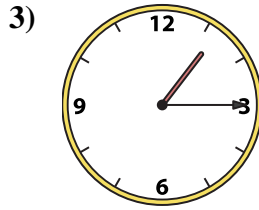

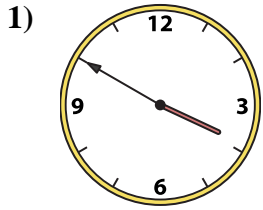




Match the analog clock to the digital clock.



A. 9:55

B. 5:55

C. 4:45

D. 11:40

E. 3:50

F. 1:55

G. 8:15

H. 1:15

I. 6:55

J. 8:55

K. 9:30

L. 12:50

M. 11:55

N. 12:15

O. 12:35

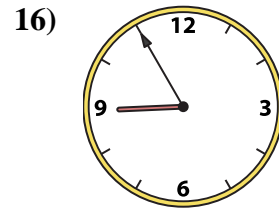
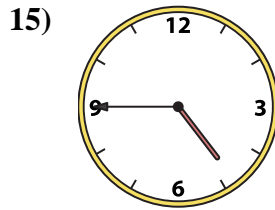
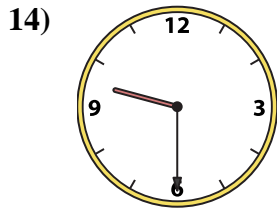
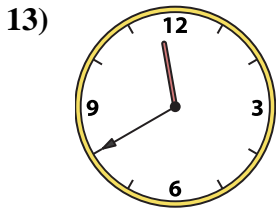
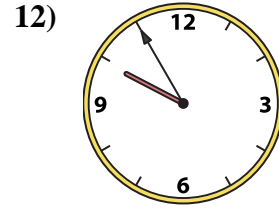
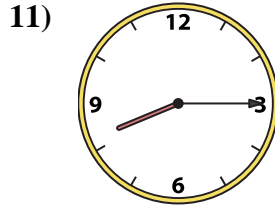
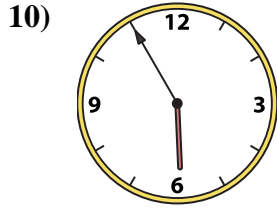
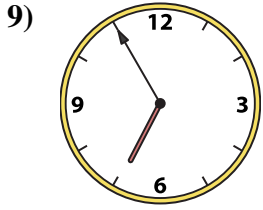
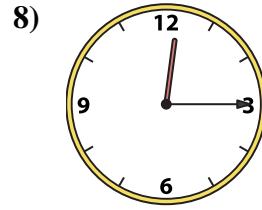
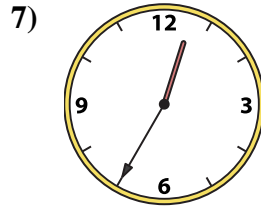
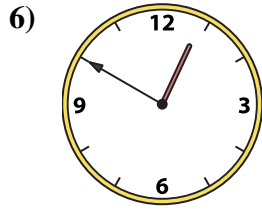
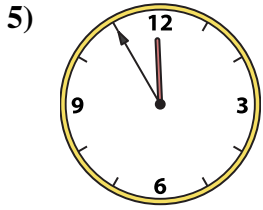
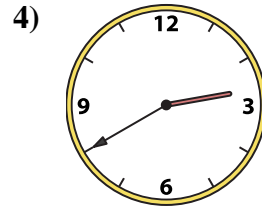
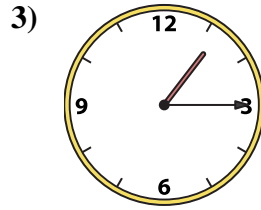

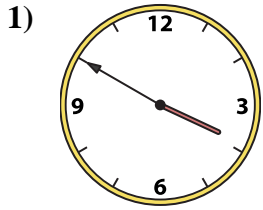
P. 2:40

Answers

1. \_\_\_\_\_
2. \_\_\_\_\_
3. \_\_\_\_\_
4. \_\_\_\_\_
5. \_\_\_\_\_
6. \_\_\_\_\_
7. \_\_\_\_\_
8. \_\_\_\_\_
9. \_\_\_\_\_
10. \_\_\_\_\_
11. \_\_\_\_\_
12. \_\_\_\_\_
13. \_\_\_\_\_
14. \_\_\_\_\_
15. \_\_\_\_\_
16. \_\_\_\_\_



Match the analog clock to the digital clock.



A. **9:55**

B. **5:55**

C. **4:45**

D. **11:40**

E. **3:50**

F. **1:55**

G. **8:15**

H. **1:15**

I. **6:55**

J. **8:55**

K. **9:30**

L. **12:50**

M. **11:55**

N. **12:15**

O. **12:35**

P. **2:40**

**Answers**

1. **E**

2. **F**

3. **H**

4. **P**

5. **M**

6. **L**

7. **O**

8. **N**

9. **I**

10. **B**

11. **G**

12. **A**

13. **D**

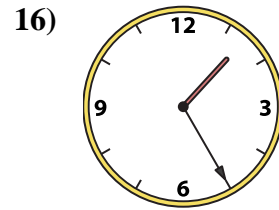
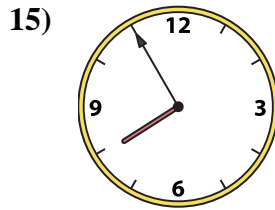
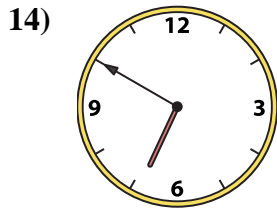
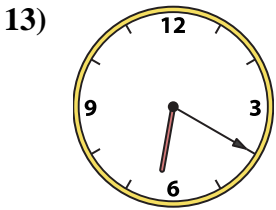
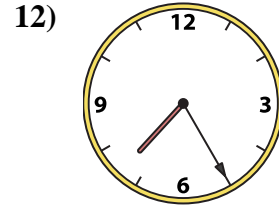
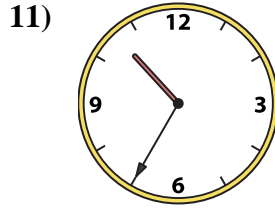
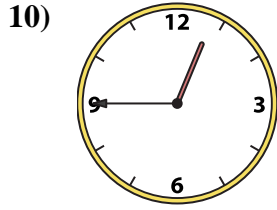
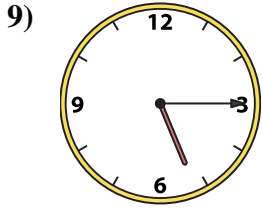
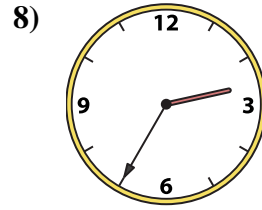
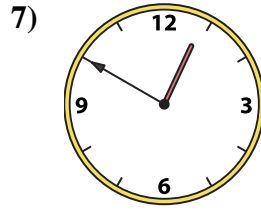
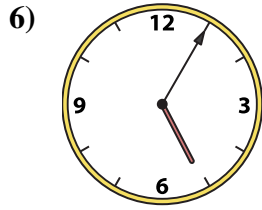
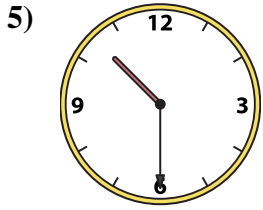
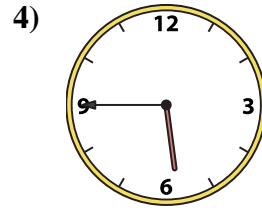
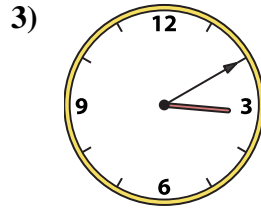


14. **K**

15. **C**

16. **J**



Match the analog clock to the digital clock.



A. 2:55

B. 10:30

C. 7:55

D. 6:20

E. 3:10

F. 5:45

G. 2:35

H. 1:25

I. 5:05

J. 10:35

K. 7:25

L. 12:50

M. 5:15

N. 12:45

O. 11:00

P. 6:50

Answers

1. \_\_\_\_\_

2. \_\_\_\_\_

3. \_\_\_\_\_

4. \_\_\_\_\_

5. \_\_\_\_\_

6. \_\_\_\_\_

7. \_\_\_\_\_

8. \_\_\_\_\_

9. \_\_\_\_\_

10. \_\_\_\_\_

11. \_\_\_\_\_

12. \_\_\_\_\_

13. \_\_\_\_\_

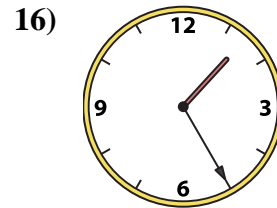
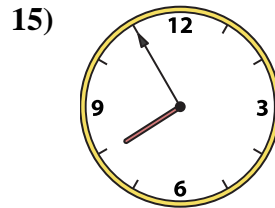
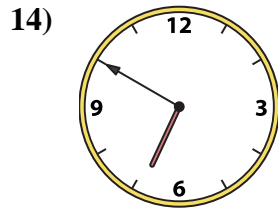
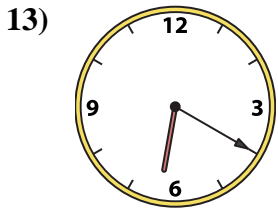
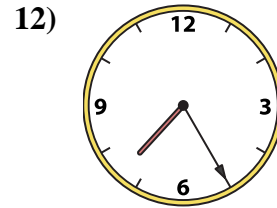
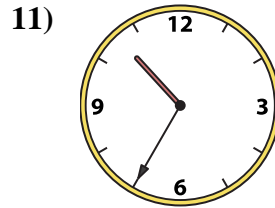
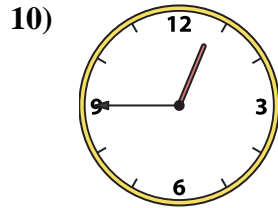
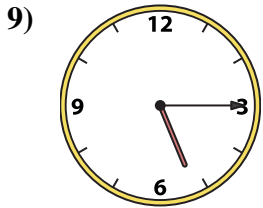
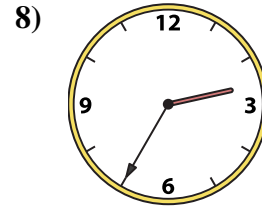
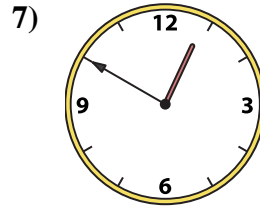
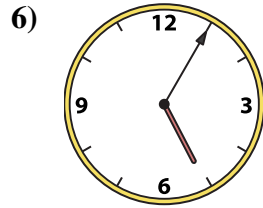
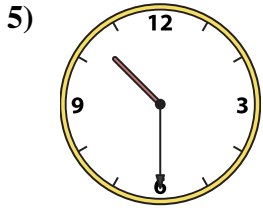
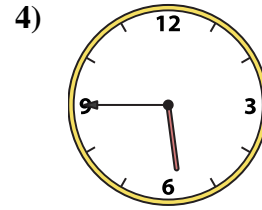
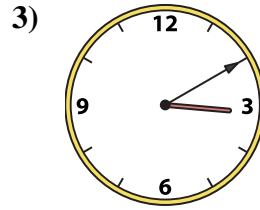
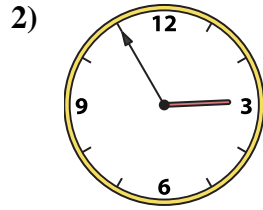

14. \_\_\_\_\_

15. \_\_\_\_\_

16. \_\_\_\_\_



Match the analog clock to the digital clock.



A. **2:55**

B. **10:30**

C. **7:55**

D. **6:20**

E. **3:10**

F. **5:45**

G. **2:35**

H. **1:25**

I. **5:05**

J. **10:35**

K. **7:25**

L. **12:50**

M. **5:15**

N. **12:45**

O. **11:00**

P. **6:50**

**Answers**

1. **O**

2. **A**

3. **E**

4. **F**

5. **B**

6. **I**

7. **L**

8. **G**

9. **M**

10. **N**

11. **J**

12. **K**

13. **D**

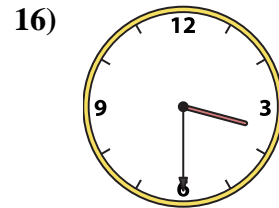
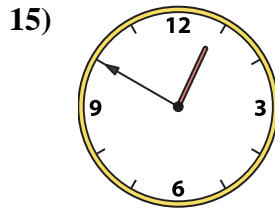
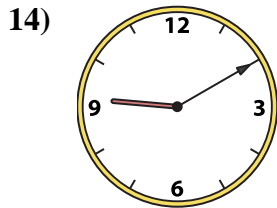
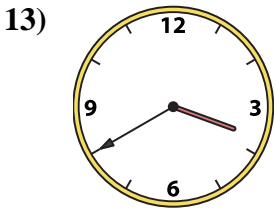
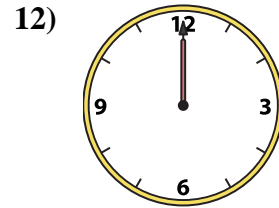
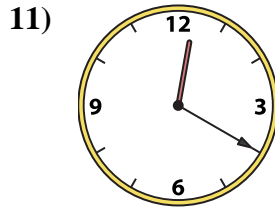
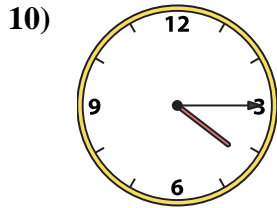
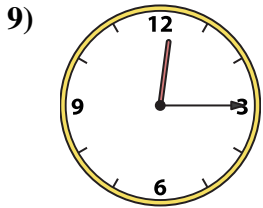
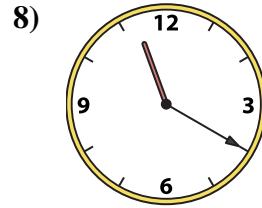
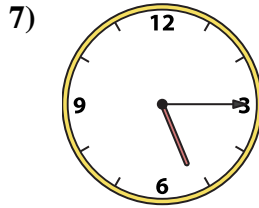
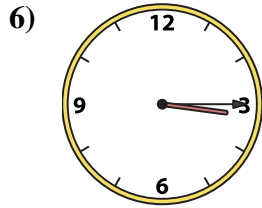
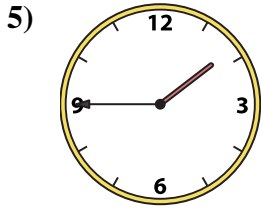
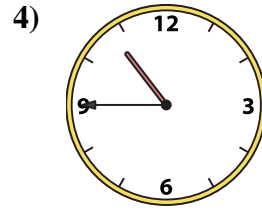
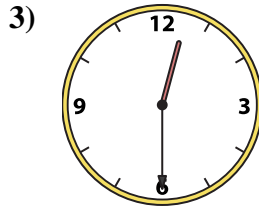
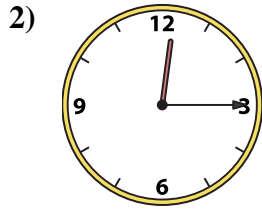
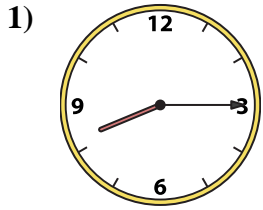
14. **P**

15. **C**

16. **H**



Match the analog clock to the digital clock.



A. 3:40

B. 9:10

C. 12:20

D. 12:15

E. 12:00

F. 12:15

G. 10:45

H. 12:50

I. 8:15

J. 11:20

K. 5:15

L. 1:45

M. 12:30

N. 4:15

O. 3:30

P. 3:15

**Answers**

1. \_\_\_\_\_

2. \_\_\_\_\_

3. \_\_\_\_\_

4. \_\_\_\_\_

5. \_\_\_\_\_

6. \_\_\_\_\_

7. \_\_\_\_\_

8. \_\_\_\_\_

9. \_\_\_\_\_

10. \_\_\_\_\_

11. \_\_\_\_\_

12. \_\_\_\_\_

13. \_\_\_\_\_

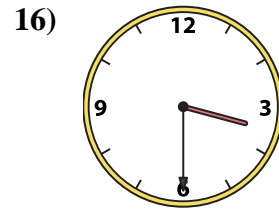
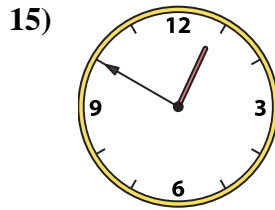
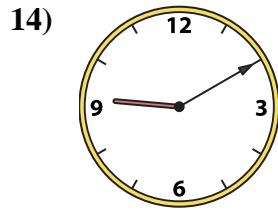
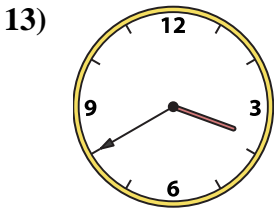
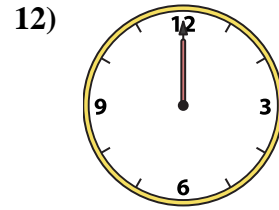
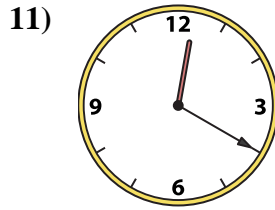
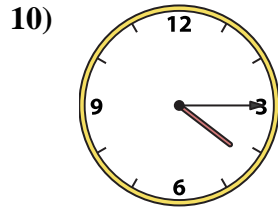
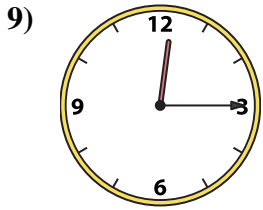
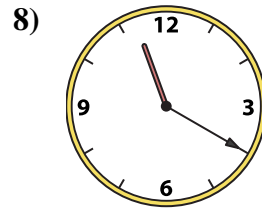
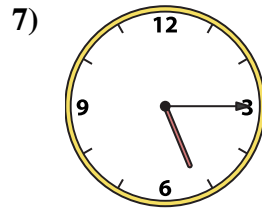
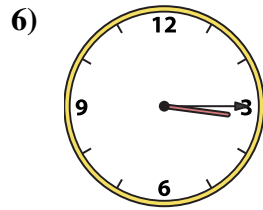
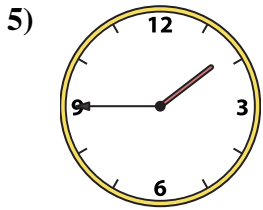
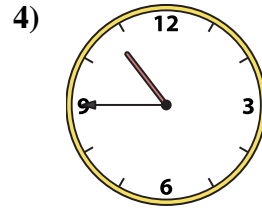
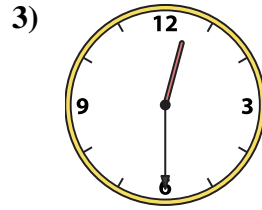
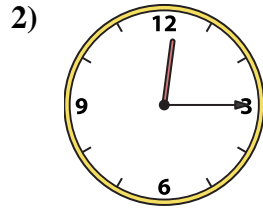
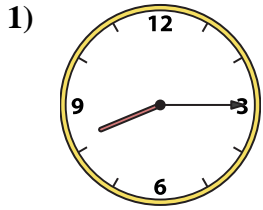
14. \_\_\_\_\_

15. \_\_\_\_\_

16. \_\_\_\_\_



Match the analog clock to the digital clock.



A. **3:40**

B. **9:10**

C. **12:20**

D. **12:15**

E. **12:00**

F. **12:15**

G. **10:45**

H. **12:50**

I. **8:15**

J. **11:20**

K. **5:15**

L. **1:45**

M. **12:30**

N. **4:15**

O. **3:30**

P. **3:15**

**Answers**

1. **I**

2. **D**

3. **M**

4. **G**

5. **L**

6. **P**

7. **K**

8. **J**

9. **F**

10. **N**

11. **C**

12. **E**

13. **A**

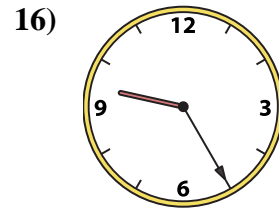
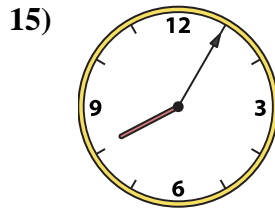
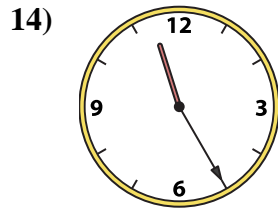
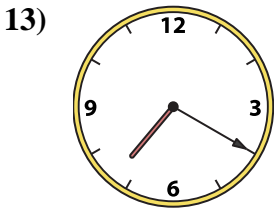
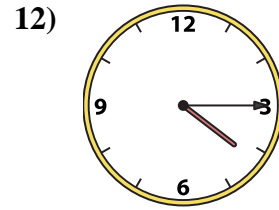
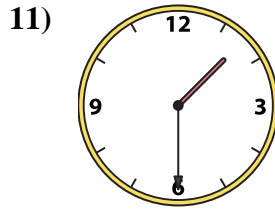
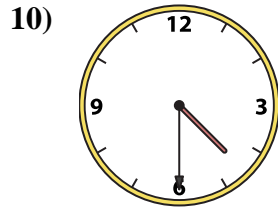
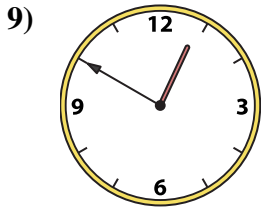
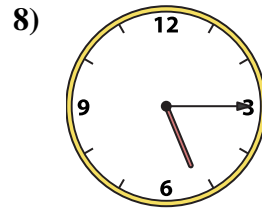
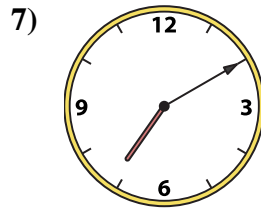
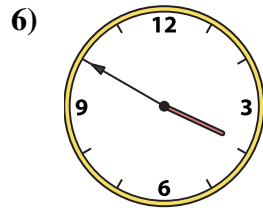
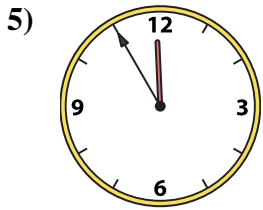
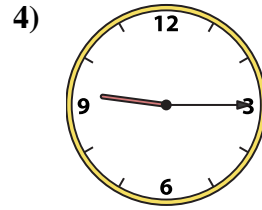
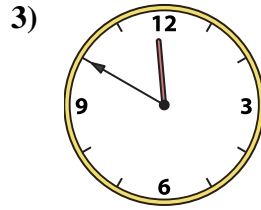
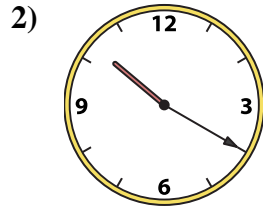
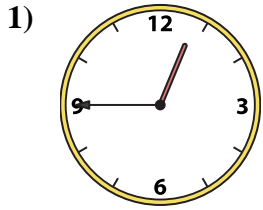
14. **B**

15. **H**

16. **O**



Match the analog clock to the digital clock.



**Answers**

1. \_\_\_\_\_
2. \_\_\_\_\_
3. \_\_\_\_\_
4. \_\_\_\_\_
5. \_\_\_\_\_
6. \_\_\_\_\_
7. \_\_\_\_\_
8. \_\_\_\_\_
9. \_\_\_\_\_
10. \_\_\_\_\_
11. \_\_\_\_\_
12. \_\_\_\_\_
13. \_\_\_\_\_
14. \_\_\_\_\_
15. \_\_\_\_\_
16. \_\_\_\_\_

A. **11:55**

B. **9:25**

C. **11:50**

D. **3:50**

E. **12:45**

F. **1:30**

G. **11:25**

H. **7:10**

I. **4:30**

J. **5:15**

K. **7:20**

L. **10:20**

M. **9:15**

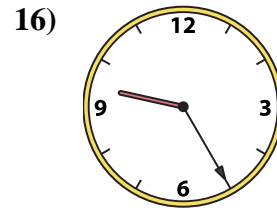
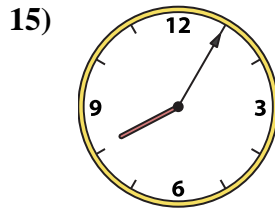
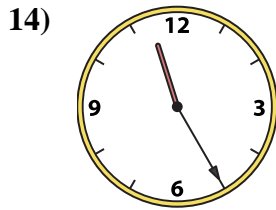
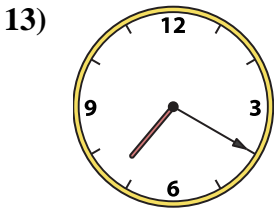
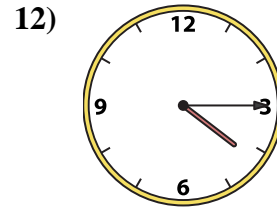
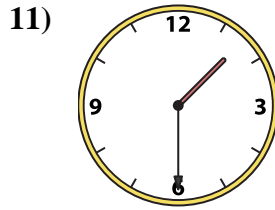
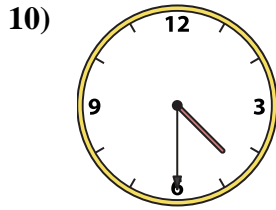
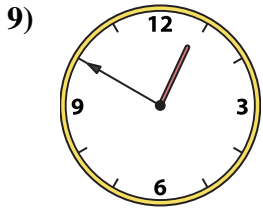
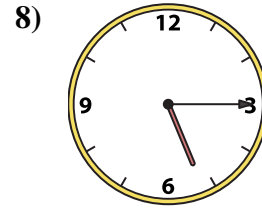
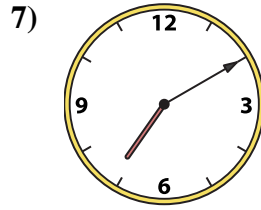
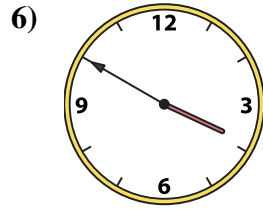
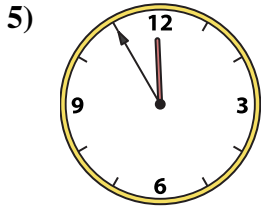
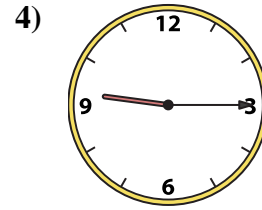
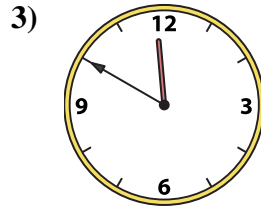
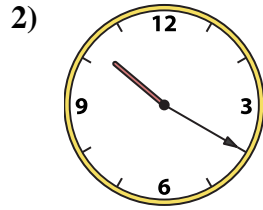
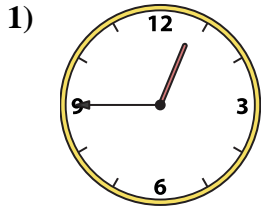
N. **12:50**

O. **4:15**

P. **8:05**



Match the analog clock to the digital clock.



A. 11:55

B. 9:25

C. 11:50

D. 3:50

E. 12:45

F. 1:30

G. 11:25

H. 7:10

I. 4:30

J. 5:15

K. 7:20

L. 10:20

M. 9:15

N. 12:50

O. 4:15

P. 8:05

**Answers**

1. **E**

2. **L**

3. **C**

4. **M**

5. **A**

6. **D**

7. **H**

8. **J**

9. **N**

10. **I**

11. **F**

12. **O**

13. **K**

14. **G**

15. **P**

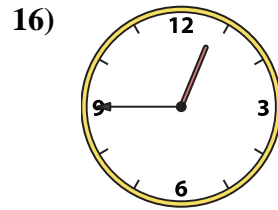
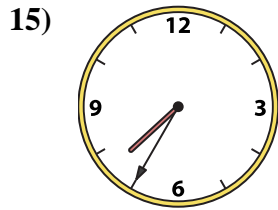
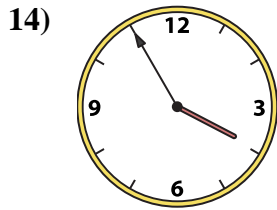
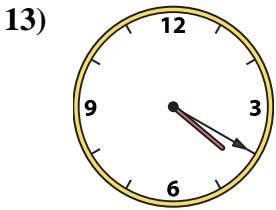
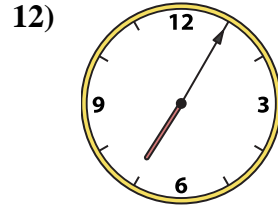
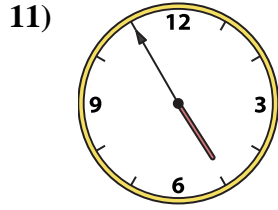
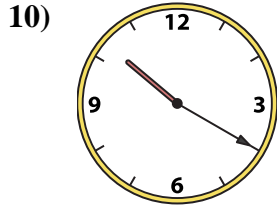
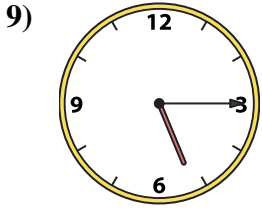
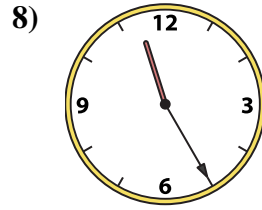

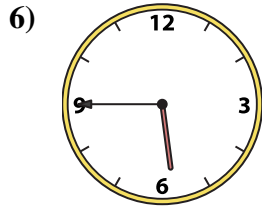
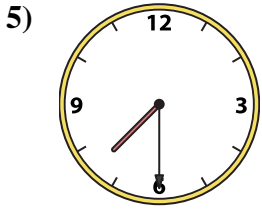
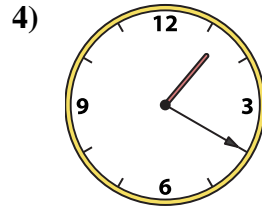
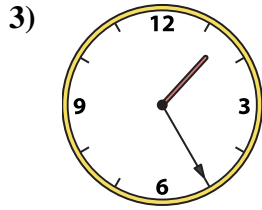
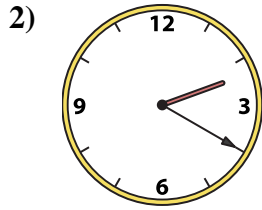

16. **B**





Match the analog clock to the digital clock.

**Answers**



A. 11:00

B. 1:20

C. 11:25

D. 5:15

E. 4:55

F. 4:20

G. 3:55

H. 5:45

I. 7:30

J. 1:00

K. 1:25

L. 12:45

M. 7:35

N. 2:20

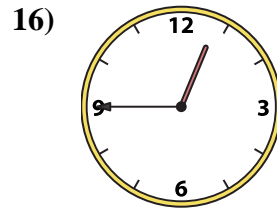
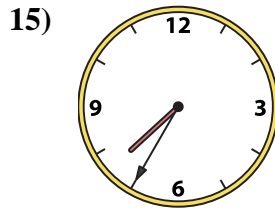
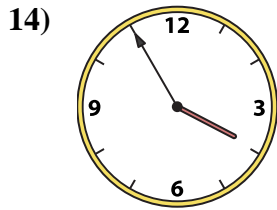
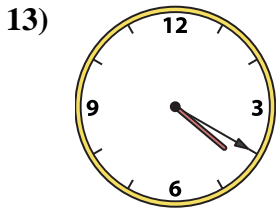
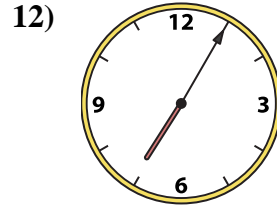
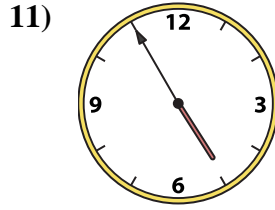
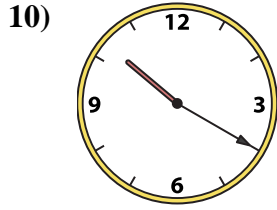
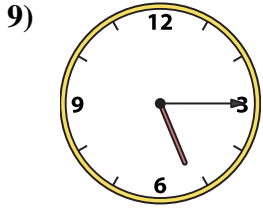
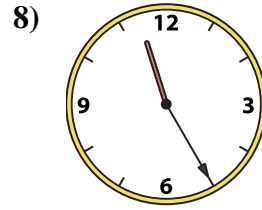
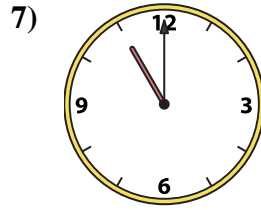
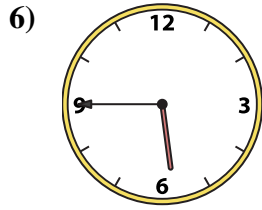
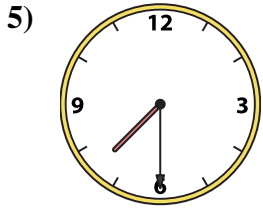
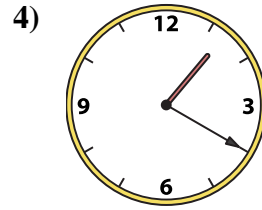
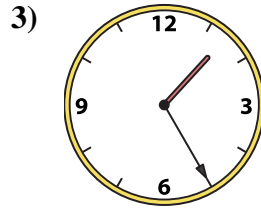
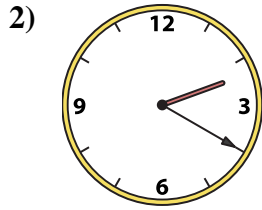

O. 10:20

P. 7:05

1. \_\_\_\_\_
2. \_\_\_\_\_
3. \_\_\_\_\_
4. \_\_\_\_\_
5. \_\_\_\_\_
6. \_\_\_\_\_
7. \_\_\_\_\_
8. \_\_\_\_\_
9. \_\_\_\_\_
10. \_\_\_\_\_
11. \_\_\_\_\_
12. \_\_\_\_\_
13. \_\_\_\_\_
14. \_\_\_\_\_
15. \_\_\_\_\_
16. \_\_\_\_\_



Match the analog clock to the digital clock.



A. 11:00

B. 1:20

C. 11:25

D. 5:15

E. 4:55

F. 4:20

G. 3:55

H. 5:45

I. 7:30

J. 1:00

K. 1:25

L. 12:45

M. 7:35

N. 2:20

O. 10:20

P. 7:05

**Answers**

1. **J**

2. **N**

3. **K**

4. **B**

5. **I**

6. **H**

7. **A**

8. **C**

9. **D**

10. **O**

11. **E**

12. **P**

13. **F**

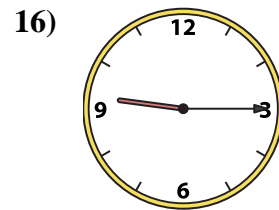
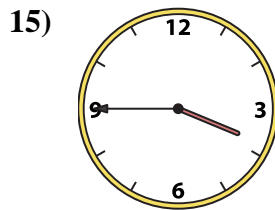
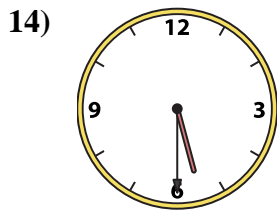
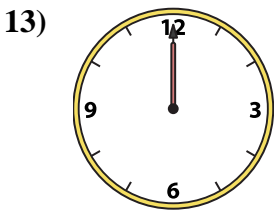
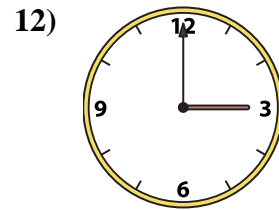
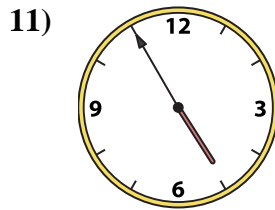
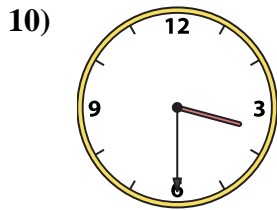
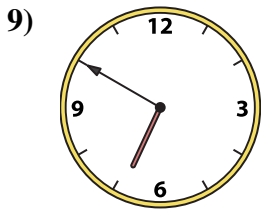
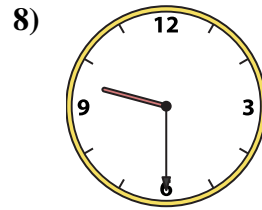
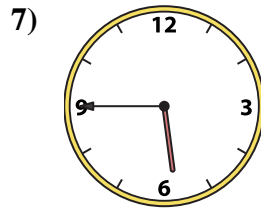
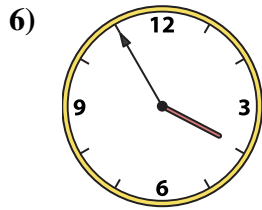
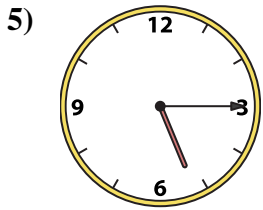
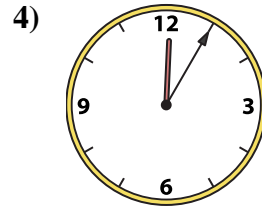
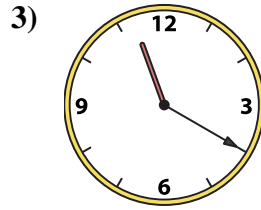
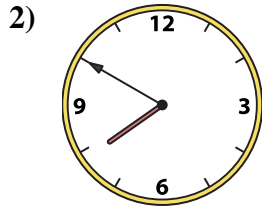

14. **G**

15. **M**

16. **L**



Match the analog clock to the digital clock.



A. 5:45

B. 3:00

C. 3:45

D. 12:05

E. 3:30

F. 6:50

G. 7:50

H. 12:00

I. 9:30

J. 3:55

K. 4:55

L. 8:55

M. 5:15

N. 9:15

O. 11:20

P. 5:30

Answers

1. \_\_\_\_\_

2. \_\_\_\_\_

3. \_\_\_\_\_

4. \_\_\_\_\_

5. \_\_\_\_\_

6. \_\_\_\_\_

7. \_\_\_\_\_

8. \_\_\_\_\_

9. \_\_\_\_\_

10. \_\_\_\_\_

11. \_\_\_\_\_

12. \_\_\_\_\_

13. \_\_\_\_\_

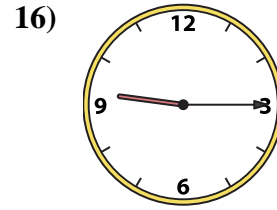
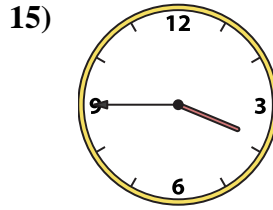
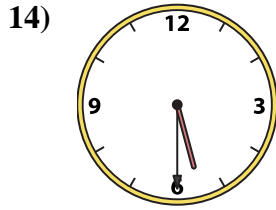
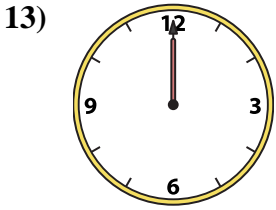
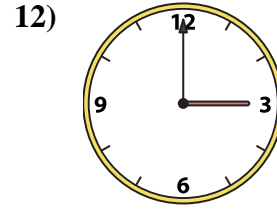
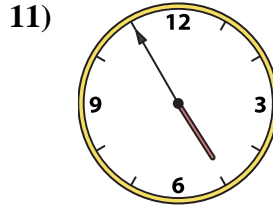
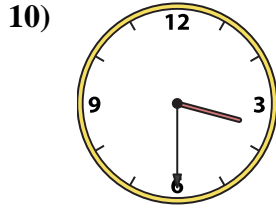
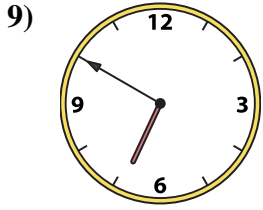
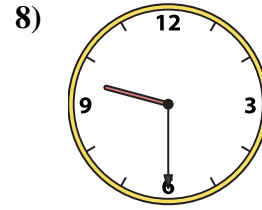
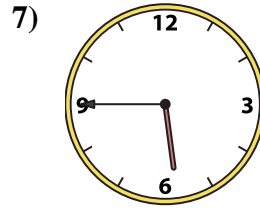
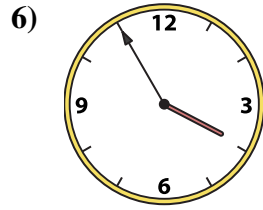
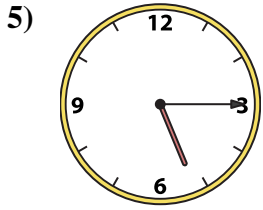
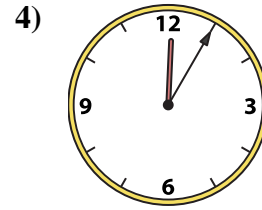
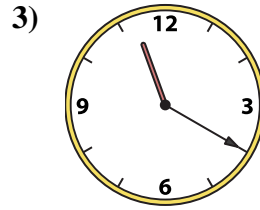
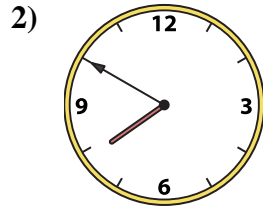

14. \_\_\_\_\_

15. \_\_\_\_\_

16. \_\_\_\_\_



Match the analog clock to the digital clock.



A. 5:45

B. 3:00

C. 3:45

D. 12:05

E. 3:30

F. 6:50

G. 7:50

H. 12:00

I. 9:30

J. 3:55

K. 4:55

L. 8:55

M. 5:15

N. 9:15

O. 11:20

P. 5:30

**Answers**

1. **L**

2. **G**

3. **O**

4. **D**

5. **M**

6. **J**

7. **A**

8. **I**

9. **F**

10. **E**

11. **K**

12. **B**

13. **H**

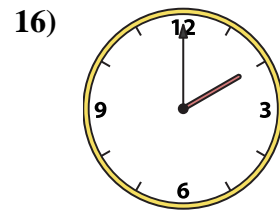
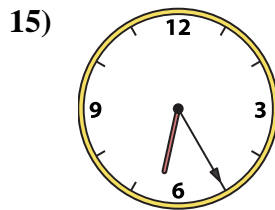
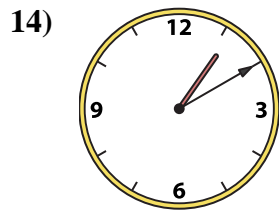
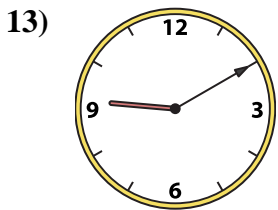
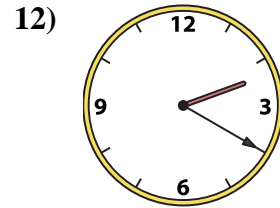
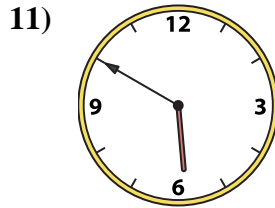
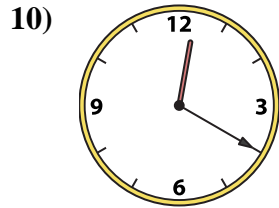
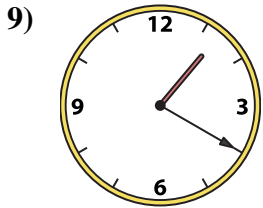
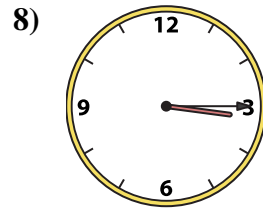
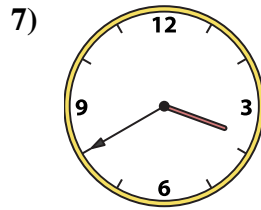
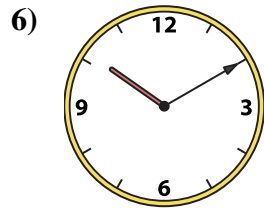
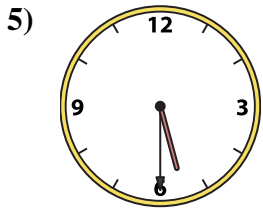
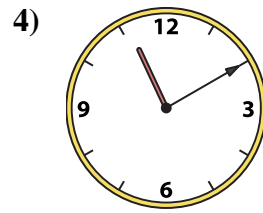
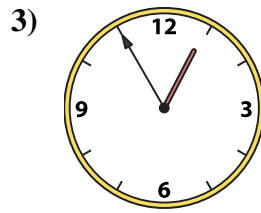
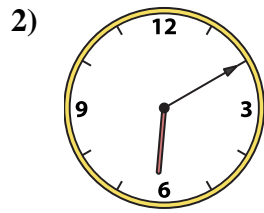
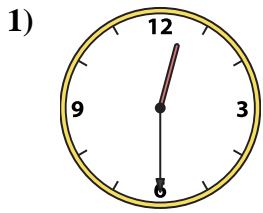
14. **P**

15. **C**

16. **N**



Match the analog clock to the digital clock.



A. 10:10

B. 3:40

C. 1:20

D. 12:30

E. 12:20

F. 3:15

G. 1:10

H. 6:10

I. 5:50

J. 2:00

K. 5:30

L. 6:25

M. 12:55

N. 11:10

O. 9:10

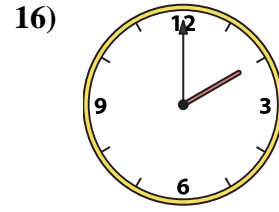
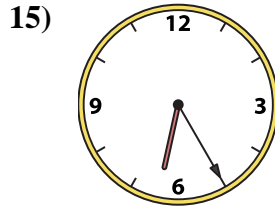
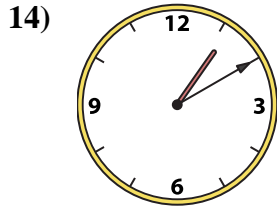
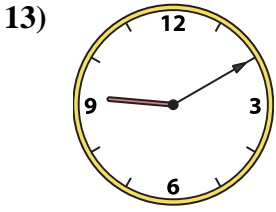
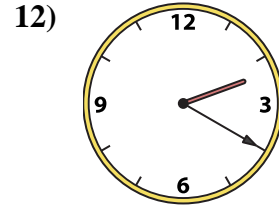
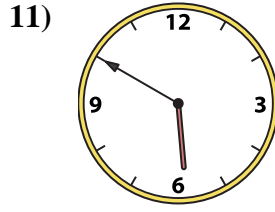
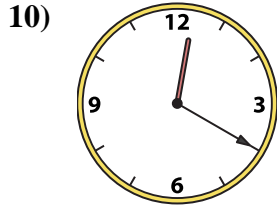
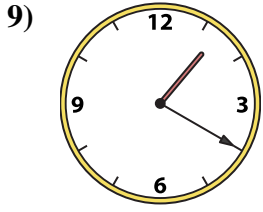
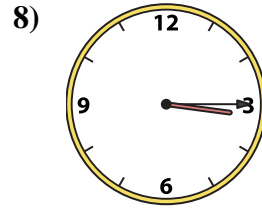
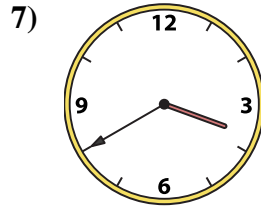
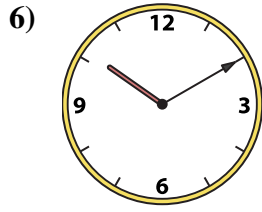
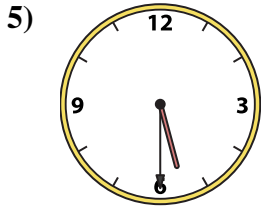
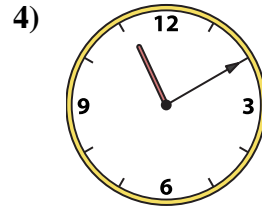
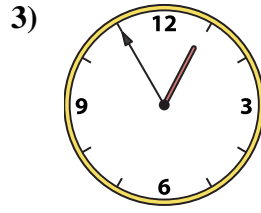
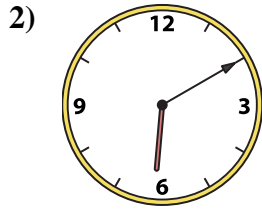
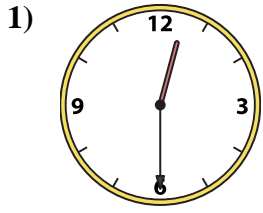
P. 2:20

Answers

1. \_\_\_\_\_
2. \_\_\_\_\_
3. \_\_\_\_\_
4. \_\_\_\_\_
5. \_\_\_\_\_
6. \_\_\_\_\_
7. \_\_\_\_\_
8. \_\_\_\_\_
9. \_\_\_\_\_
10. \_\_\_\_\_
11. \_\_\_\_\_
12. \_\_\_\_\_
13. \_\_\_\_\_
14. \_\_\_\_\_
15. \_\_\_\_\_
16. \_\_\_\_\_



Match the analog clock to the digital clock.



A. **10:10**

B. **3:40**

C. **1:20**

D. **12:30**

E. **12:20**

F. **3:15**

G. **1:10**

H. **6:10**

I. **5:50**

J. **2:00**

K. **5:30**

L. **6:25**

M. **12:55**

N. **11:10**

O. **9:10**

P. **2:20**

**Answers**

1. **D**

2. **H**

3. **M**

4. **N**

5. **K**

6. **A**

7. **B**

8. **F**

9. **C**

10. **E**

11. **I**

12. **P**

13. **O**

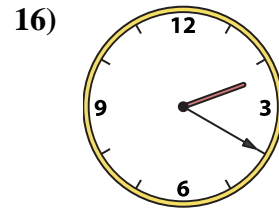
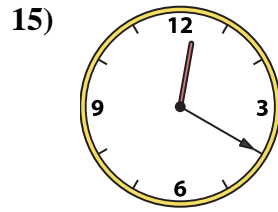
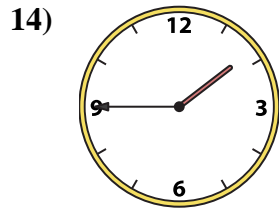
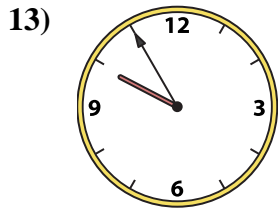
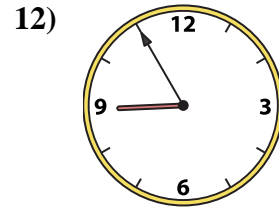
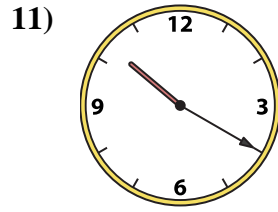
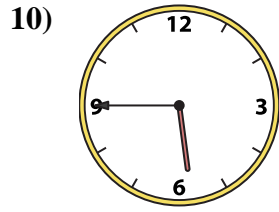
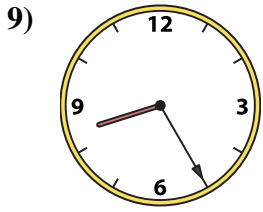
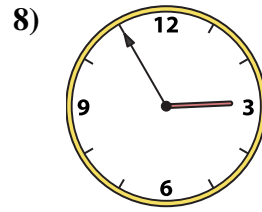
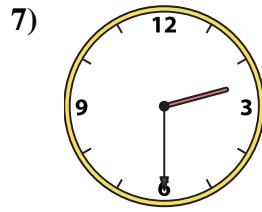
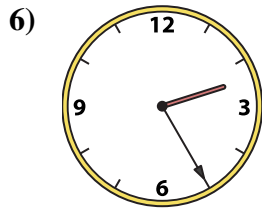
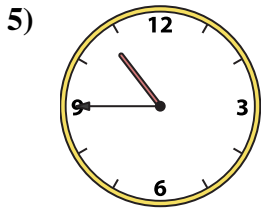
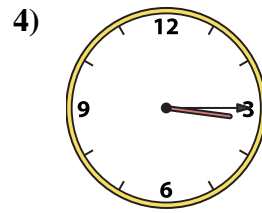
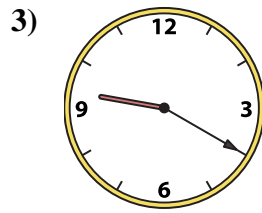
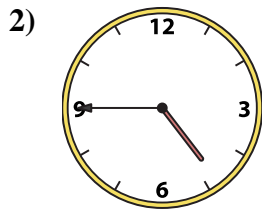
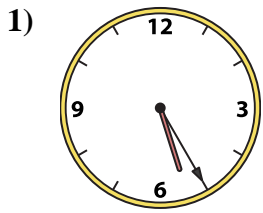
14. **G**

15. **L**

16. **J**



Match the analog clock to the digital clock.



**Answers**

1. \_\_\_\_\_
2. \_\_\_\_\_
3. \_\_\_\_\_
4. \_\_\_\_\_
5. \_\_\_\_\_
6. \_\_\_\_\_
7. \_\_\_\_\_
8. \_\_\_\_\_
9. \_\_\_\_\_
10. \_\_\_\_\_
11. \_\_\_\_\_
12. \_\_\_\_\_
13. \_\_\_\_\_
14. \_\_\_\_\_
15. \_\_\_\_\_
16. \_\_\_\_\_

A. 12:20

B. 8:25

C. 1:45

D. 3:15

E. 2:55

F. 4:45

G. 2:20

H. 2:25

I. 10:45

J. 9:20

K. 10:20

L. 5:45

M. 2:30

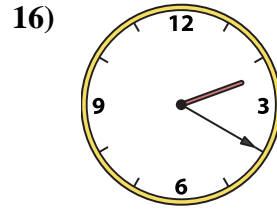
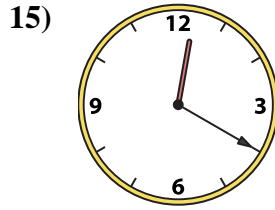
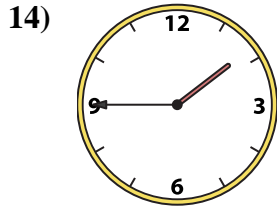
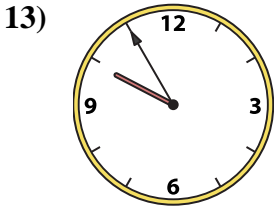

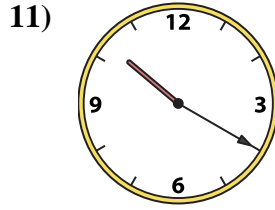
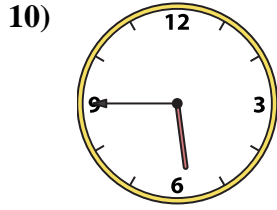
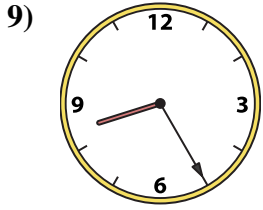
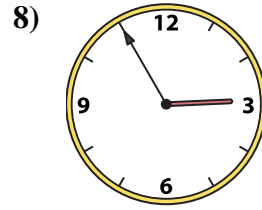
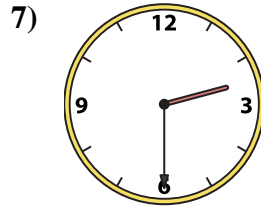
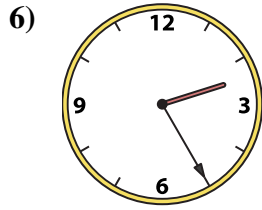
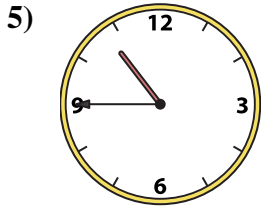
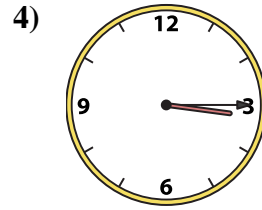
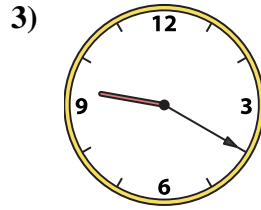
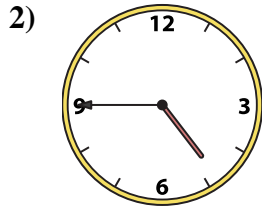
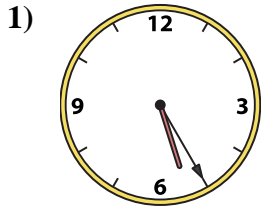
N. 9:55

O. 8:55

P. 5:25



Match the analog clock to the digital clock.



A. **12:20**

B. **8:25**

C. **1:45**

D. **3:15**

E. **2:55**

F. **4:45**

G. **2:20**

H. **2:25**

I. **10:45**

J. **9:20**

K. **10:20**

L. **5:45**

M. **2:30**

N. **9:55**

O. **8:55**

P. **5:25**

**Answers**

1. **P**

2. **F**

3. **J**

4. **D**

5. **I**

6. **H**

7. **M**

8. **E**

9. **B**

10. **L**

11. **K**

12. **O**

13. **N**

14. **C**

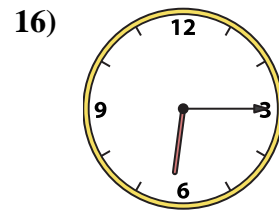
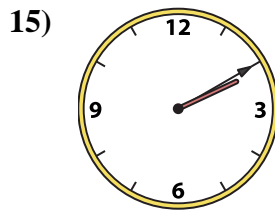
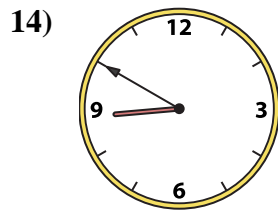
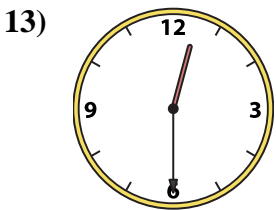
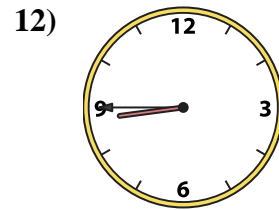
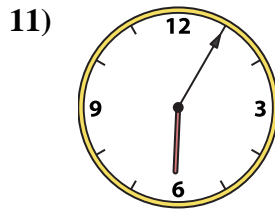
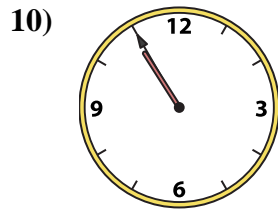
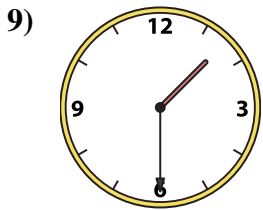
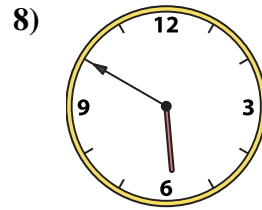
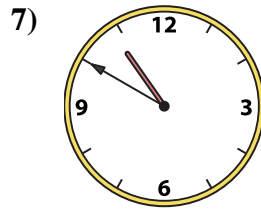
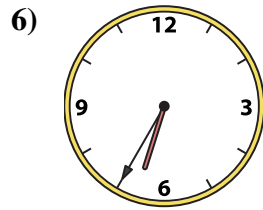
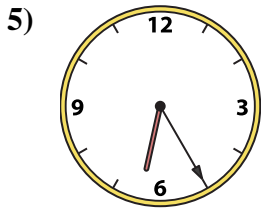
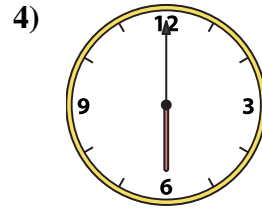
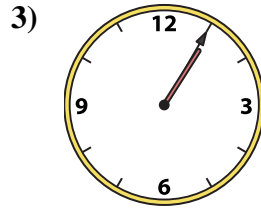
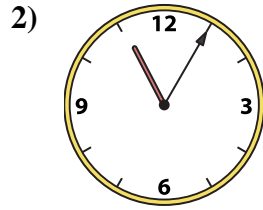
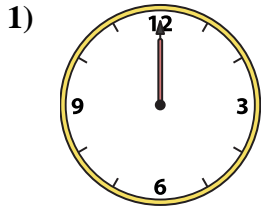
15. **A**

16. **G**





Match the analog clock to the digital clock.



**Answers**

1. \_\_\_\_\_
2. \_\_\_\_\_
3. \_\_\_\_\_
4. \_\_\_\_\_
5. \_\_\_\_\_
6. \_\_\_\_\_
7. \_\_\_\_\_
8. \_\_\_\_\_
9. \_\_\_\_\_
10. \_\_\_\_\_
11. \_\_\_\_\_
12. \_\_\_\_\_
13. \_\_\_\_\_
14. \_\_\_\_\_
15. \_\_\_\_\_
16. \_\_\_\_\_

A. 6:05

B. 1:30

C. 6:00

D. 6:35

E. 12:00

F. 2:10

G. 12:30

H. 10:50

I. 1:05

J. 8:45

K. 8:50

L. 5:50

M. 6:25

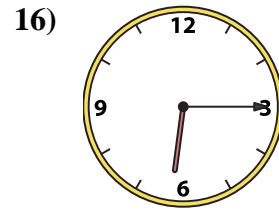
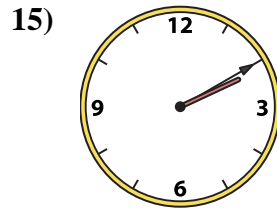
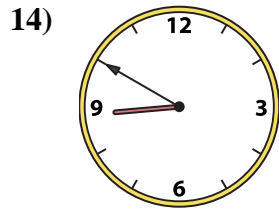
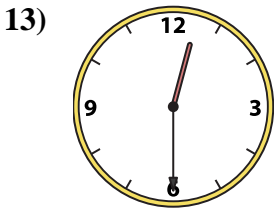
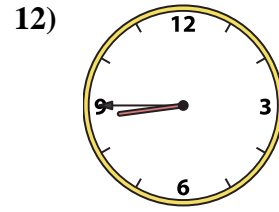
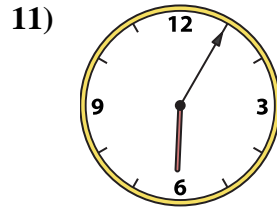
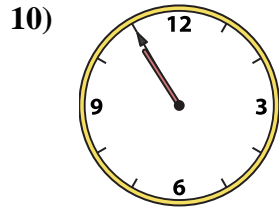
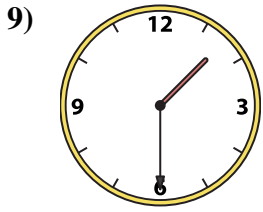
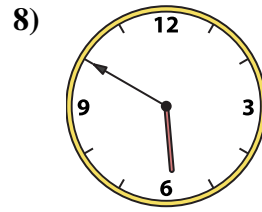
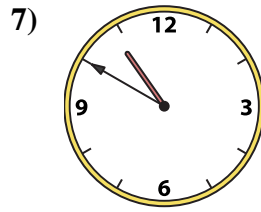
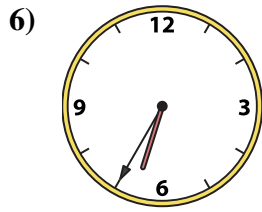
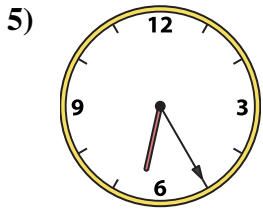
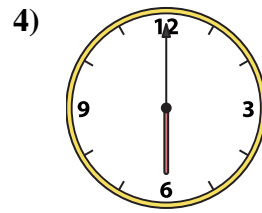
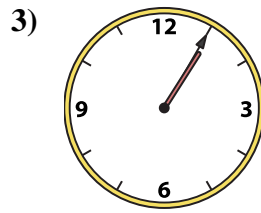
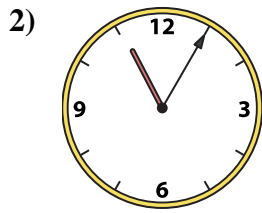
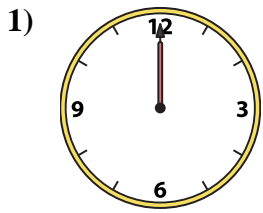
N. 10:55

O. 11:05

P. 6:15



Match the analog clock to the digital clock.



A. **6:05**

B. **1:30**

C. **6:00**

D. **6:35**

E. **12:00**

F. **2:10**

G. **12:30**

H. **10:50**

I. **1:05**

J. **8:45**

K. **8:50**

L. **5:50**

M. **6:25**

N. **10:55**

O. **11:05**

P. **6:15**

**Answers**

1. **E**

2. **O**

3. **I**

4. **C**

5. **M**

6. **D**

7. **H**

8. **L**

9. **B**

10. **N**

11. **A**

12. **J**

13. **G**

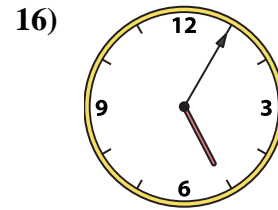
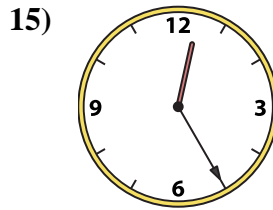
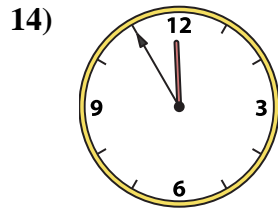
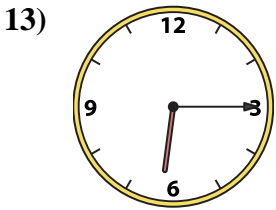
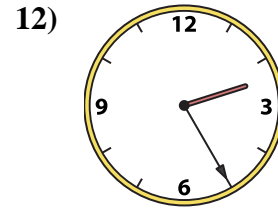
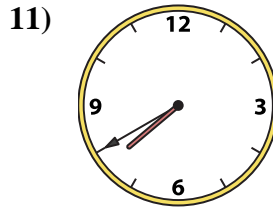
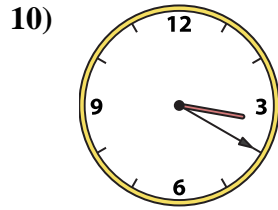
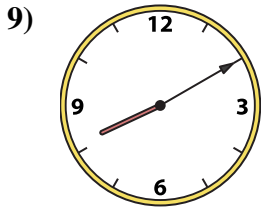
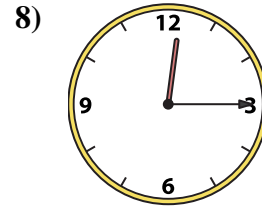
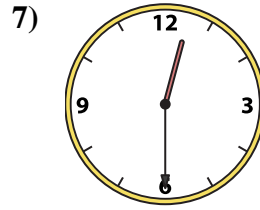
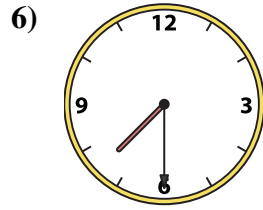
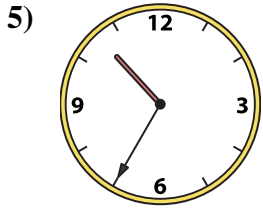
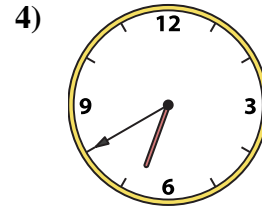
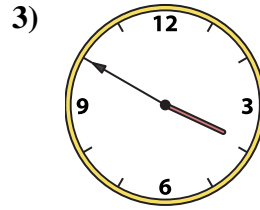
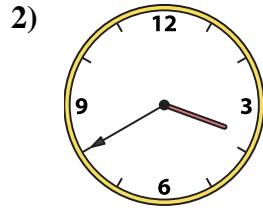
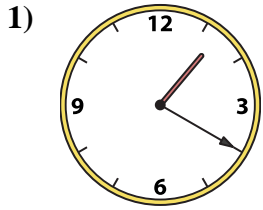
14. **K**

15. **F**

16. **P**



Match the analog clock to the digital clock.



A. 10:35

B. 2:25

C. 7:40

D. 12:30

E. 6:40

F. 1:20

G. 12:25

H. 6:15

I. 3:50

J. 3:20

K. 11:55

L. 5:05

M. 7:30

N. 3:40

O. 8:10

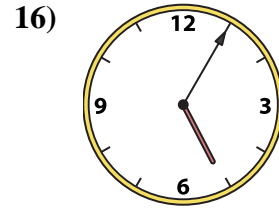
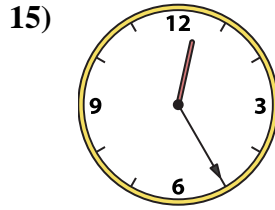
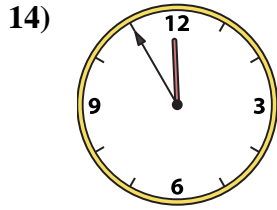
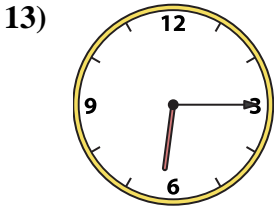
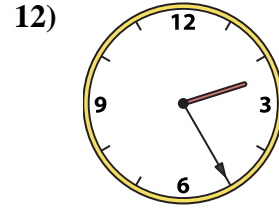
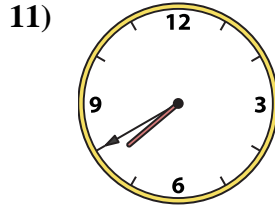
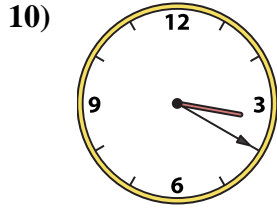
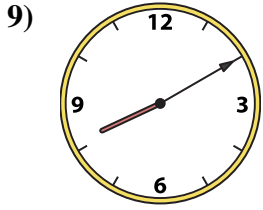
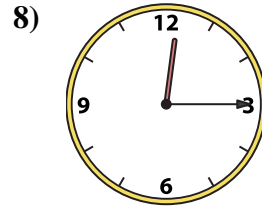
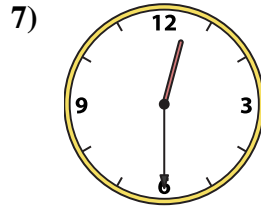
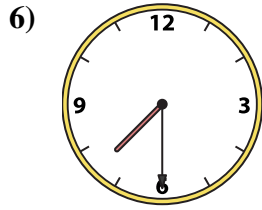
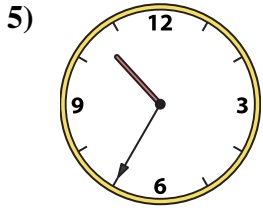
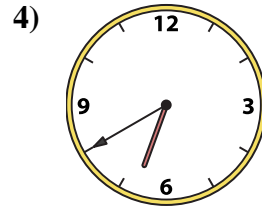
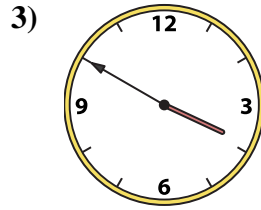
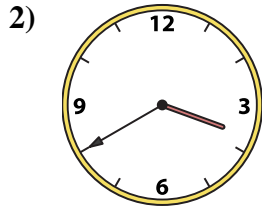
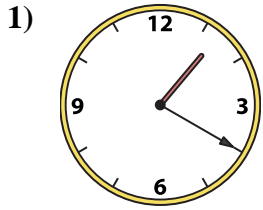
P. 12:15

Answers

1. \_\_\_\_\_
2. \_\_\_\_\_
3. \_\_\_\_\_
4. \_\_\_\_\_
5. \_\_\_\_\_
6. \_\_\_\_\_
7. \_\_\_\_\_
8. \_\_\_\_\_
9. \_\_\_\_\_
10. \_\_\_\_\_
11. \_\_\_\_\_
12. \_\_\_\_\_
13. \_\_\_\_\_
14. \_\_\_\_\_
15. \_\_\_\_\_
16. \_\_\_\_\_



Match the analog clock to the digital clock.



A. 10:35

B. 2:25

C. 7:40

D. 12:30

E. 6:40

F. 1:20

G. 12:25

H. 6:15

I. 3:50

J. 3:20

K. 11:55

L. 5:05

M. 7:30

N. 3:40

O. 8:10

P. 12:15

**Answers**

1. **F**

2. **N**

3. **I**

4. **E**

5. **A**

6. **M**

7. **D**

8. **P**

9. **O**

10. **J**

11. **C**

12. **B**

13. **H**

14. **K**

15. **G**

16. **L**