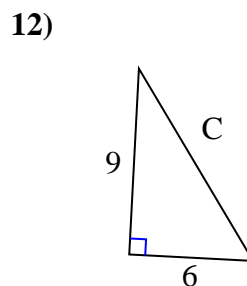
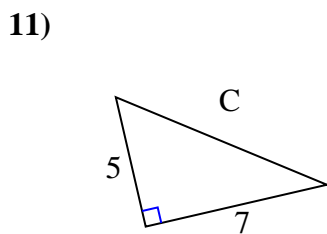
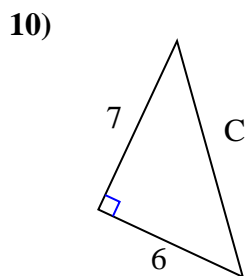
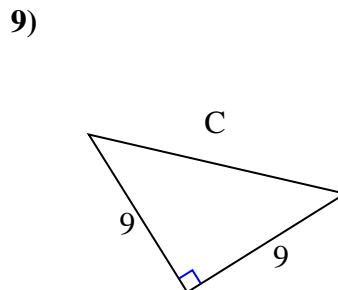
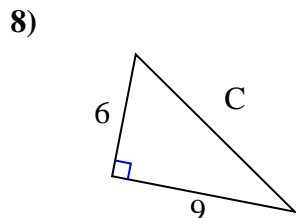
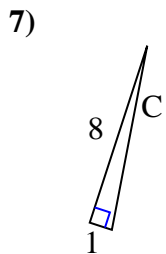
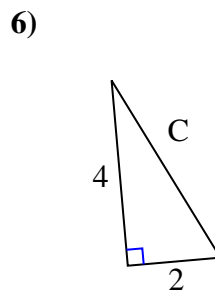
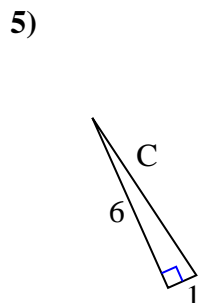
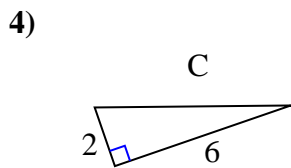
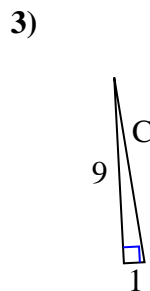
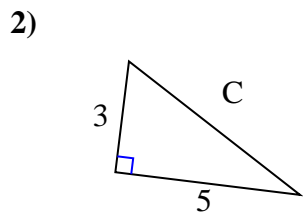
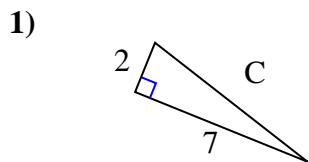




Find the value of 'C' round your answer to the nearest hundredth.

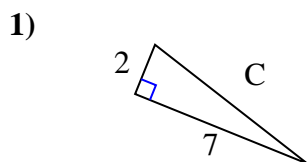
Answers



1. _____
2. _____
3. _____
4. _____
5. _____
6. _____
7. _____
8. _____
9. _____
10. _____
11. _____
12. _____

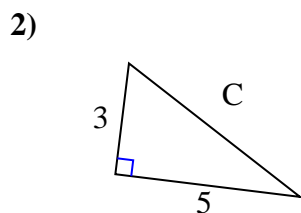


Find the value of 'C' round your answer to the nearest hundredth.

Answers

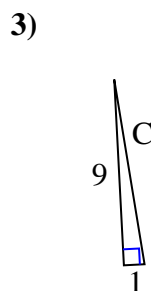
$$4 + 49 = 53$$

$$\sqrt{53} = 7.28$$



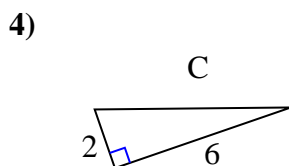
$$9 + 25 = 34$$

$$\sqrt{34} = 5.83$$



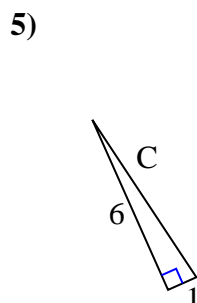
$$81 + 1 = 82$$

$$\sqrt{82} = 9.06$$



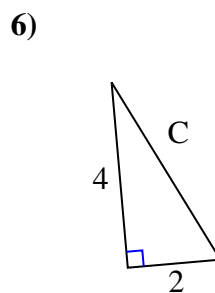
$$4 + 36 = 40$$

$$\sqrt{40} = 6.32$$



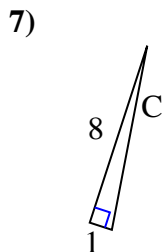
$$36 + 1 = 37$$

$$\sqrt{37} = 6.08$$



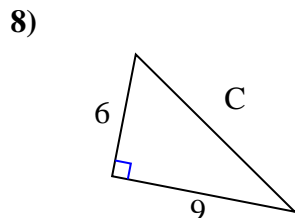
$$16 + 4 = 20$$

$$\sqrt{20} = 4.47$$



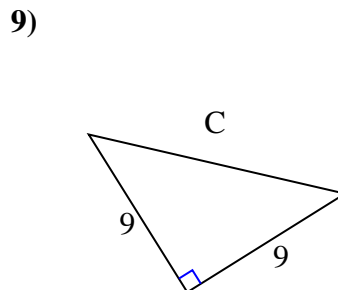
$$64 + 1 = 65$$

$$\sqrt{65} = 8.06$$



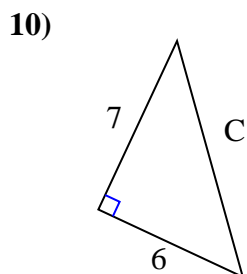
$$36 + 81 = 117$$

$$\sqrt{117} = 10.82$$



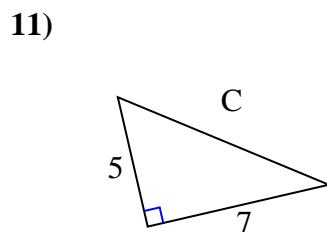
$$81 + 81 = 162$$

$$\sqrt{162} = 12.73$$



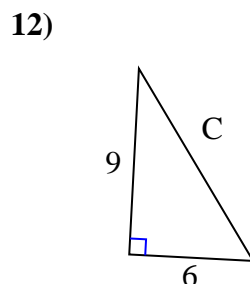
$$49 + 36 = 85$$

$$\sqrt{85} = 9.22$$



$$25 + 49 = 74$$

$$\sqrt{74} = 8.6$$



$$81 + 36 = 117$$

$$\sqrt{117} = 10.82$$

1. 7.28
2. 5.83
3. 9.06
4. 6.32
5. 6.08
6. 4.47
7. 8.06
8. 10.82
9. 12.73
10. 9.22
11. 8.6
12. 10.82