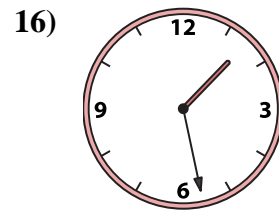
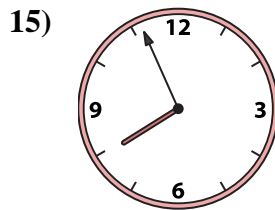
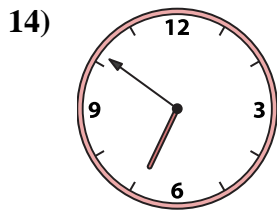
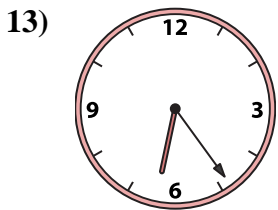
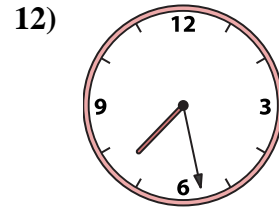
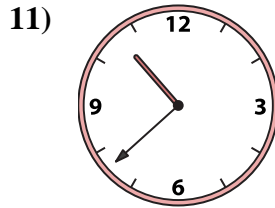
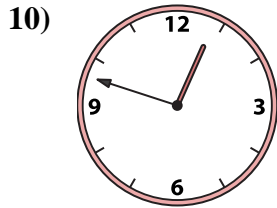
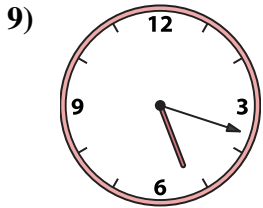
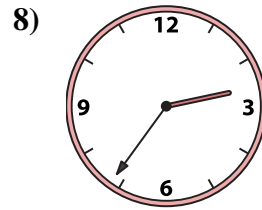
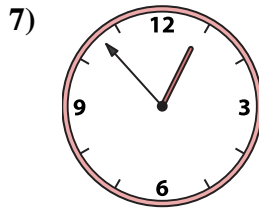
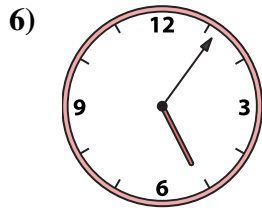
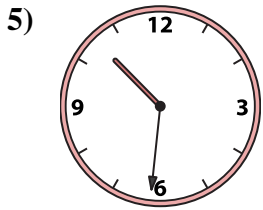
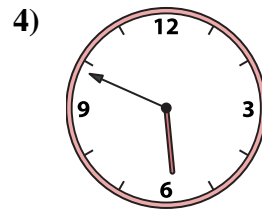
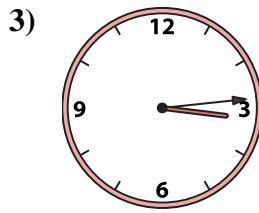
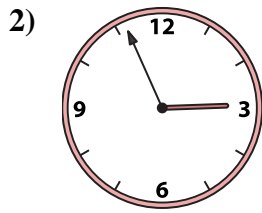
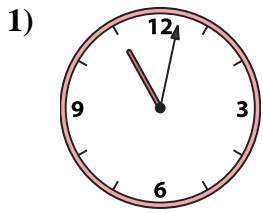




Match the analog clock to the digital clock.



**Answers**

1. \_\_\_\_\_
2. \_\_\_\_\_
3. \_\_\_\_\_
4. \_\_\_\_\_
5. \_\_\_\_\_
6. \_\_\_\_\_
7. \_\_\_\_\_
8. \_\_\_\_\_
9. \_\_\_\_\_
10. \_\_\_\_\_
11. \_\_\_\_\_
12. \_\_\_\_\_
13. \_\_\_\_\_
14. \_\_\_\_\_
15. \_\_\_\_\_
16. \_\_\_\_\_

A. 2:56

B. 10:31

C. 7:56

D. 6:24

E. 3:14

F. 5:49

G. 2:36

H. 1:28

I. 5:06

J. 10:38

K. 7:28

L. 12:53

M. 5:18

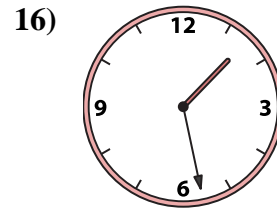
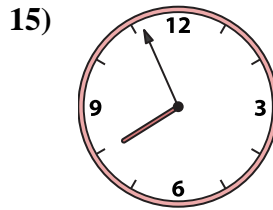
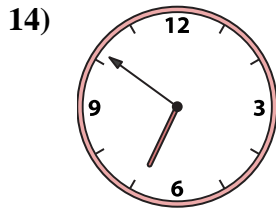
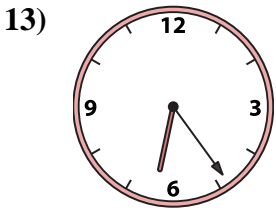
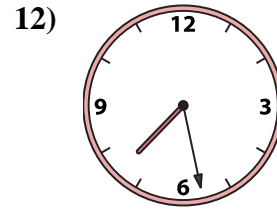
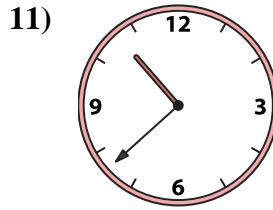
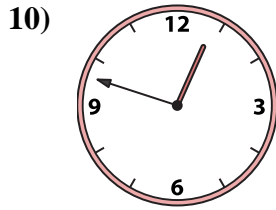
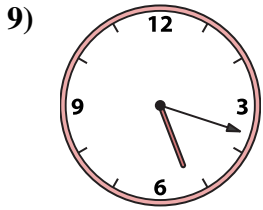
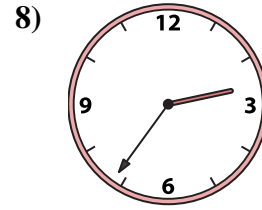
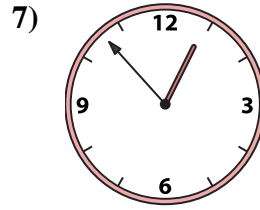
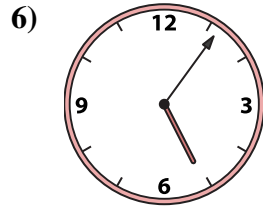
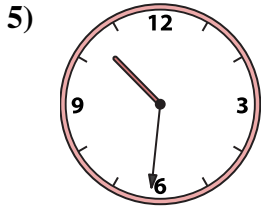
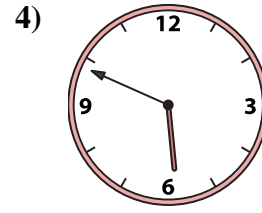
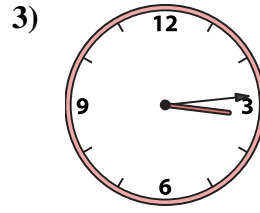
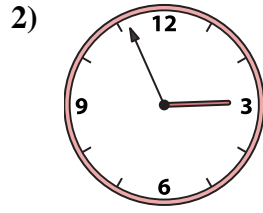
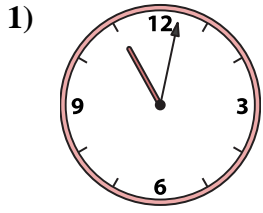
N. 12:48

O. 11:02

P. 6:51



Match the analog clock to the digital clock.



A. **2:56**

B. **10:31**

C. **7:56**

D. **6:24**

E. **3:14**

F. **5:49**

G. **2:36**

H. **1:28**

I. **5:06**

J. **10:38**

K. **7:28**

L. **12:53**

M. **5:18**

N. **12:48**

O. **11:02**

P. **6:51**

**Answers**

1. **O**

2. **A**

3. **E**

4. **F**

5. **B**

6. **I**

7. **L**

8. **G**

9. **M**

10. **N**

11. **J**

12. **K**

13. **D**

14. **P**

15. **C**

16. **H**