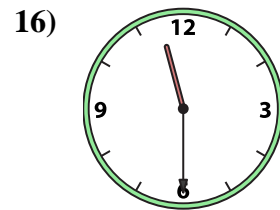
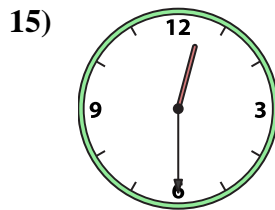
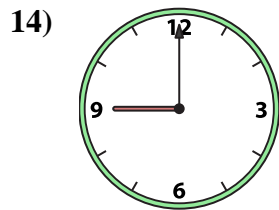
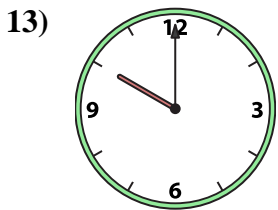
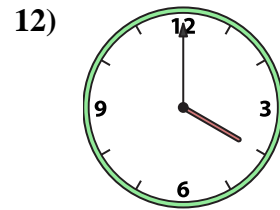
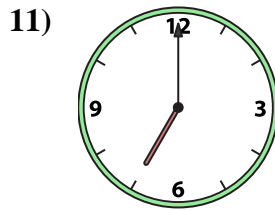
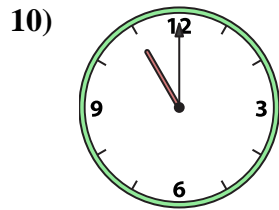
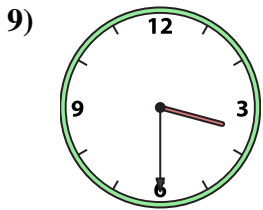
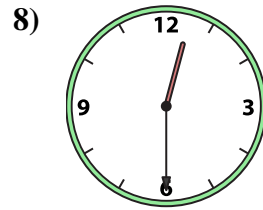
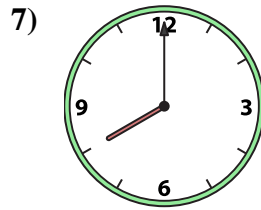
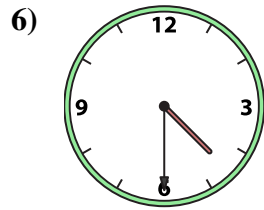
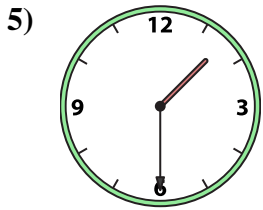
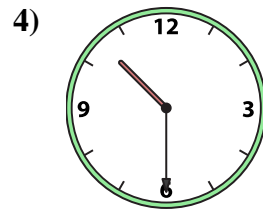
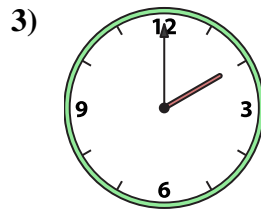
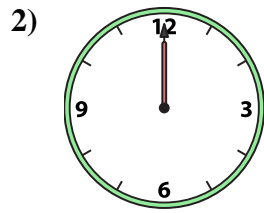





Match the analog clock to the digital clock.



A. 11:30

B. 9:00

C. 3:30

D. 12:30

E. 1:30

F. 11:00

G. 7:00

H. 4:30

I. 5:00

J. 10:00

K. 4:00

L. 8:00

M. 2:00

N. 12:00

O. 10:30

P. 12:30

Answers

1. _____

2. _____

3. _____

4. _____

5. _____

6. _____

7. _____

8. _____

9. _____

10. _____

11. _____

12. _____

13. _____

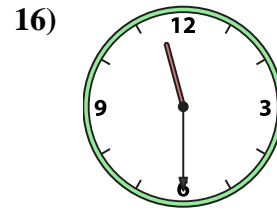
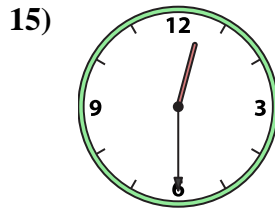
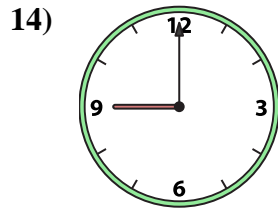
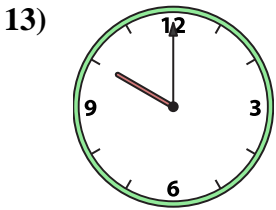
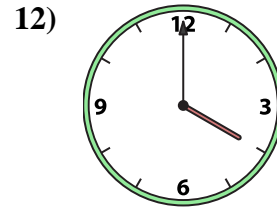
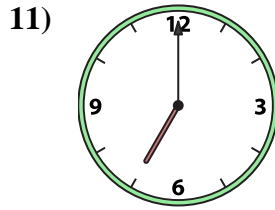
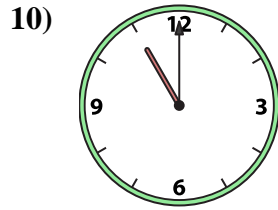
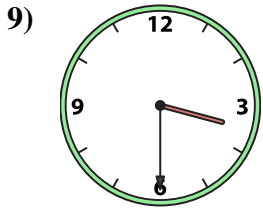
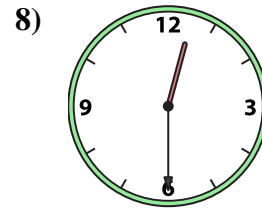
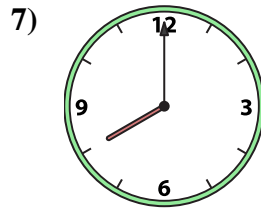
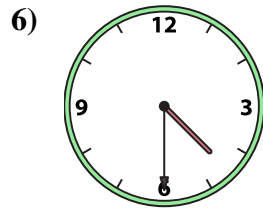
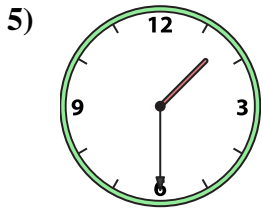
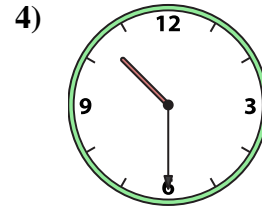
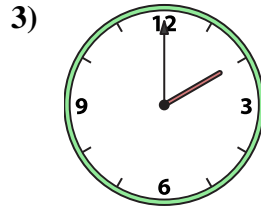
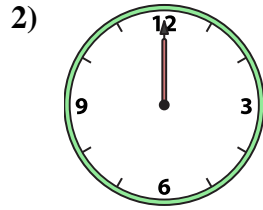
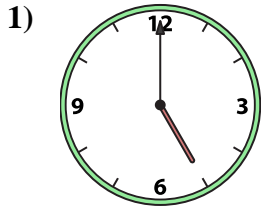
14. _____

15. _____

16. _____



Match the analog clock to the digital clock.



A. **11:30**

B. **9:00**

C. **3:30**

D. **12:30**

E. **1:30**

F. **11:00**

G. **7:00**

H. **4:30**

I. **5:00**

J. **10:00**

K. **4:00**

L. **8:00**

M. **2:00**

N. **12:00**

O. **10:30**

P. **12:30**

Answers

1. **I**

2. **N**

3. **M**

4. **O**

5. **E**

6. **H**

7. **L**

8. **P**

9. **C**

10. **F**

11. **G**

12. **K**

13. **J**

14. **B**

15. **D**

16. **A**