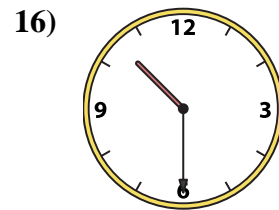
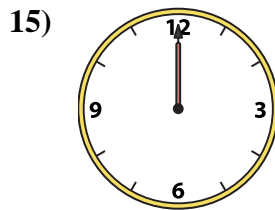
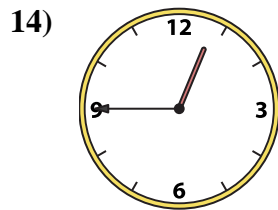
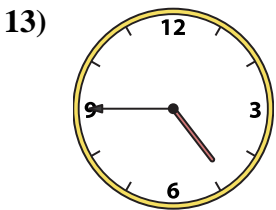
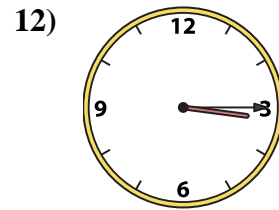
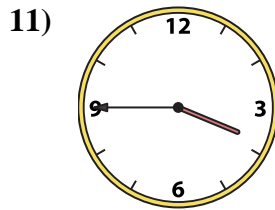
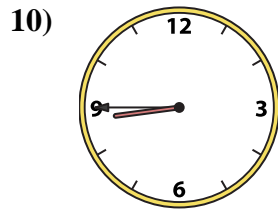
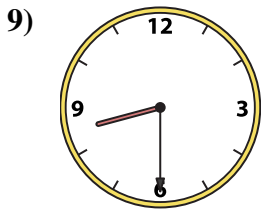
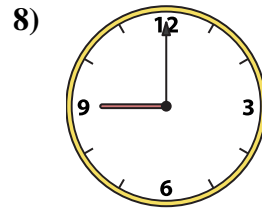
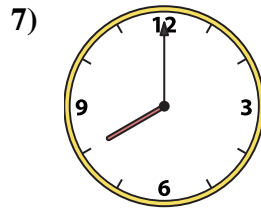
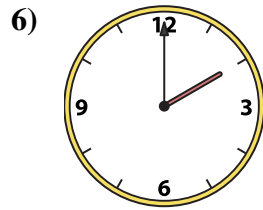
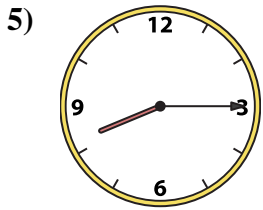
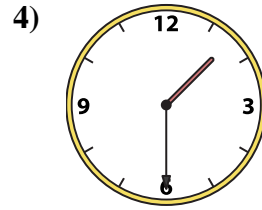
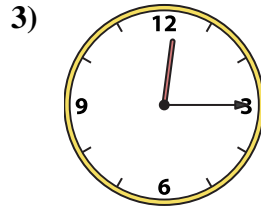
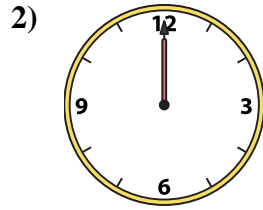
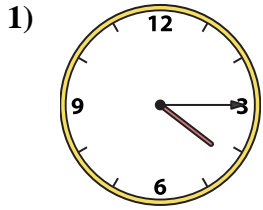




Match the analog clock to the digital clock.



A. 9:00

B. 3:45

C. 10:30

D. 12:45

E. 12:00

F. 8:45

G. 1:30

H. 8:30

I. 12:15

J. 8:15

K. 2:00

L. 4:15

M. 4:45

N. 8:00

O. 12:00

P. 3:15

Answers

1. \_\_\_\_\_

2. \_\_\_\_\_

3. \_\_\_\_\_

4. \_\_\_\_\_

5. \_\_\_\_\_

6. \_\_\_\_\_

7. \_\_\_\_\_

8. \_\_\_\_\_

9. \_\_\_\_\_

10. \_\_\_\_\_

11. \_\_\_\_\_

12. \_\_\_\_\_

13. \_\_\_\_\_

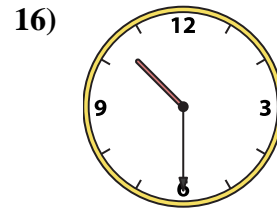
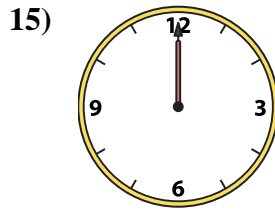
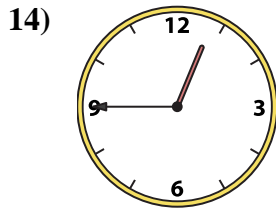
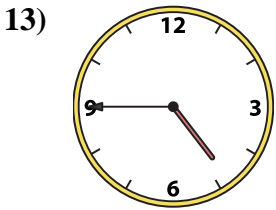
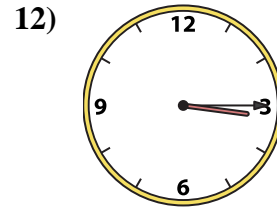
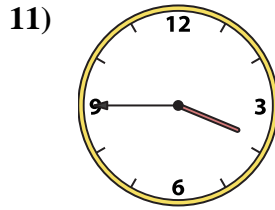
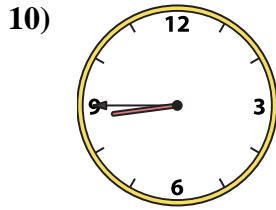
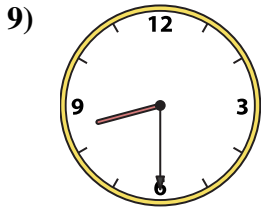
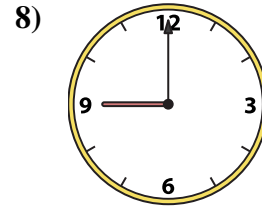
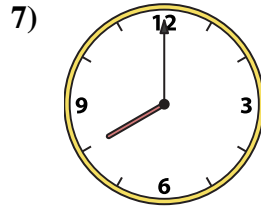
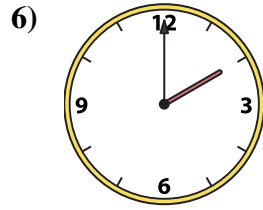
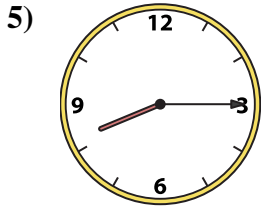
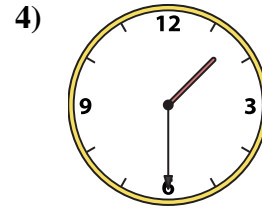
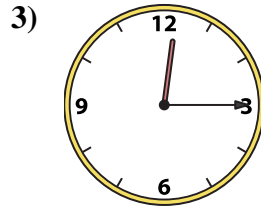
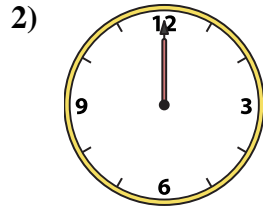
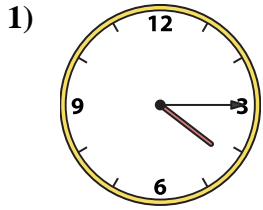
14. \_\_\_\_\_

15. \_\_\_\_\_

16. \_\_\_\_\_



Match the analog clock to the digital clock.



A. 9:00

B. 3:45

C. 10:30

D. 12:45

E. 12:00

F. 8:45

G. 1:30

H. 8:30

I. 12:15

J. 8:15

K. 2:00

L. 4:15

M. 4:45

N. 8:00

O. 12:00

P. 3:15

**Answers**

1. **L**

2. **E**

3. **I**

4. **G**

5. **J**

6. **K**

7. **N**

8. **A**

9. **H**

10. **F**

11. **B**

12. **P**

13. **M**

14. **D**

15. **O**

16. **C**