



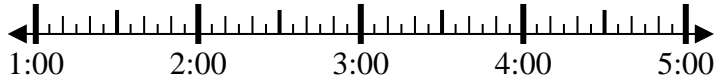
Solve each problem.

Answers

1) Start: _____

Elapsed: 1 hr & 35 mins

End: 3:25

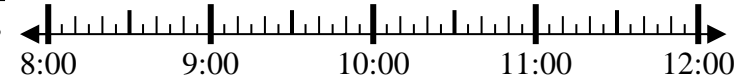


1. _____

2) Start: _____

Elapsed: 2 hrs & 25 mins

End: 11:00



2. _____

3) Start: _____

Elapsed: 1 hr & 40 mins

End: 9:05

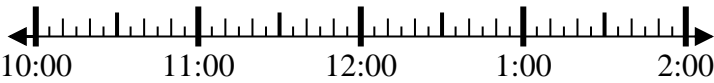


3. _____

4) Start: _____

Elapsed: 1 hr & 15 mins

End: 11:25

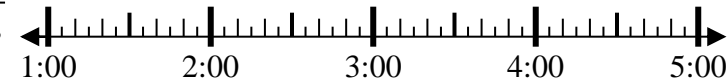


4. _____

5) Start: _____

Elapsed: 2 hrs & 45 mins

End: 4:15



5. _____

6) Start: _____

Elapsed: 1 hr & 25 mins

End: 10:15



6. _____

7) Start: _____

Elapsed: 1 hr & 20 mins

End: 7:25



7. _____

8) Start: _____

Elapsed: 2 hrs & 30 mins

End: 10:15



8. _____

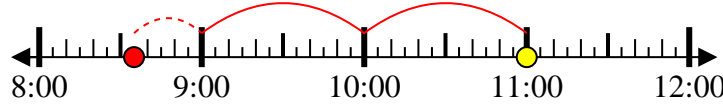


Solve each problem.

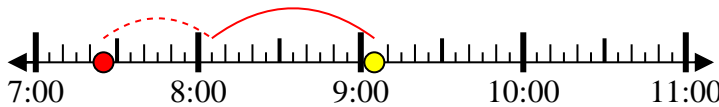
1) Start: 1:50
 Elapsed: 1 hr & 35 mins
 End: 3:25



2) Start: 8:35
 Elapsed: 2 hrs & 25 mins
 End: 11:00



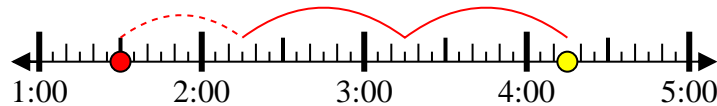
3) Start: 7:25
 Elapsed: 1 hr & 40 mins
 End: 9:05



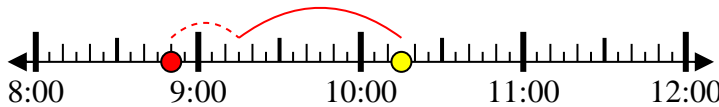
4) Start: 10:10
 Elapsed: 1 hr & 15 mins
 End: 11:25



5) Start: 1:30
 Elapsed: 2 hrs & 45 mins
 End: 4:15



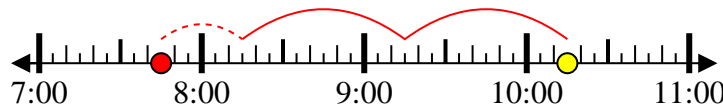
6) Start: 8:50
 Elapsed: 1 hr & 25 mins
 End: 10:15



7) Start: 6:05
 Elapsed: 1 hr & 20 mins
 End: 7:25



8) Start: 7:45
 Elapsed: 2 hrs & 30 mins
 End: 10:15



Answers

1. 1:50

2. 8:35

3. 7:25

4. 10:10

5. 1:30

6. 8:50

7. 6:05

8. 7:45