



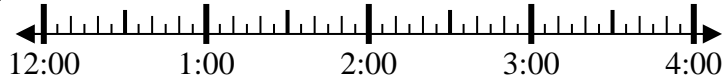
Solve each problem.

Answers

1) Start: _____

Elapsed: 1 hr & 35 mins

End: 1:50

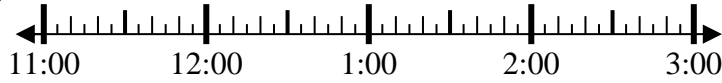


1. _____

2) Start: _____

Elapsed: 1 hr & 25 mins

End: 12:55

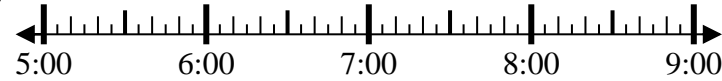


2. _____

3) Start: _____

Elapsed: 1 hr & 35 mins

End: 6:45

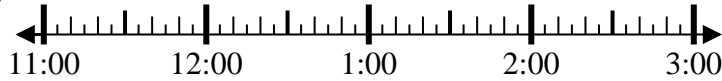


3. _____

4) Start: _____

Elapsed: 1 hr & 10 mins

End: 12:10



4. _____

5) Start: _____

Elapsed: 1 hr & 10 mins

End: 1:40

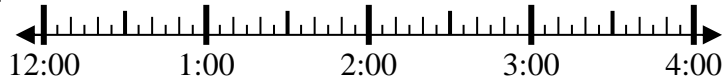


5. _____

6) Start: _____

Elapsed: 1 hr & 25 mins

End: 2:05

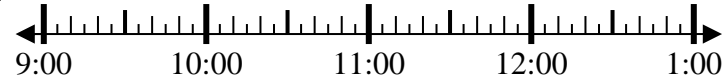


6. _____

7) Start: _____

Elapsed: 1 hr & 50 mins

End: 11:30



7. _____

8) Start: _____

Elapsed: 2 hrs & 45 mins

End: 4:20



8. _____

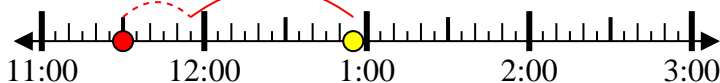


Solve each problem.

1) Start: 12:15
 Elapsed: 1 hr & 35 mins
 End: 1:50



2) Start: 11:30
 Elapsed: 1 hr & 25 mins
 End: 12:55



3) Start: 5:10
 Elapsed: 1 hr & 35 mins
 End: 6:45



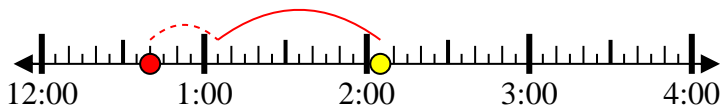
4) Start: 11:00
 Elapsed: 1 hr & 10 mins
 End: 12:10



5) Start: 12:30
 Elapsed: 1 hr & 10 mins
 End: 1:40



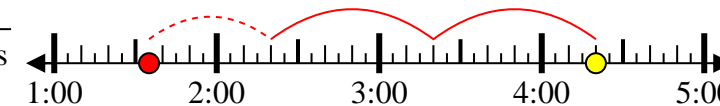
6) Start: 12:40
 Elapsed: 1 hr & 25 mins
 End: 2:05



7) Start: 9:40
 Elapsed: 1 hr & 50 mins
 End: 11:30



8) Start: 1:35
 Elapsed: 2 hrs & 45 mins
 End: 4:20



Answers

1. 12:15
2. 11:30
3. 5:10
4. 11:00
5. 12:30
6. 12:40
7. 9:40
8. 1:35