



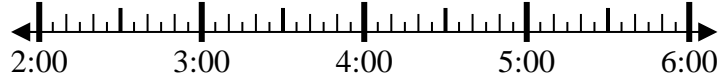
Solve each problem.

Answers

1) Start: \_\_\_\_\_

Elapsed: 2 hrs & 50 mins

End: 5:40

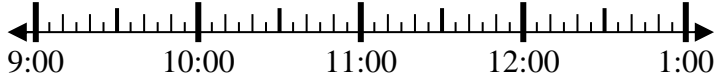


1. \_\_\_\_\_

2) Start: \_\_\_\_\_

Elapsed: 1 hr & 10 mins

End: 10:20

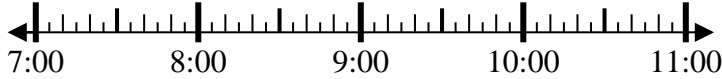


2. \_\_\_\_\_

3) Start: \_\_\_\_\_

Elapsed: 1 hr & 15 mins

End: 8:20

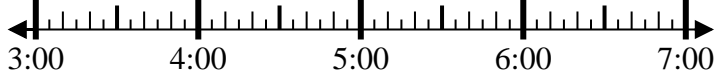


3. \_\_\_\_\_

4) Start: \_\_\_\_\_

Elapsed: 1 hr & 15 mins

End: 4:15



4. \_\_\_\_\_

5) Start: \_\_\_\_\_

Elapsed: 1 hr & 40 mins

End: 8:55

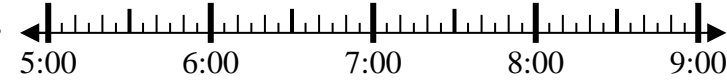


5. \_\_\_\_\_

6) Start: \_\_\_\_\_

Elapsed: 2 hrs & 15 mins

End: 7:15

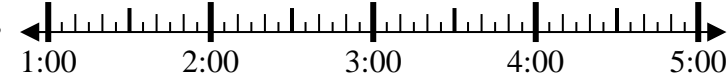


6. \_\_\_\_\_

7) Start: \_\_\_\_\_

Elapsed: 2 hrs & 45 mins

End: 3:45

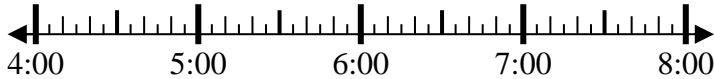


7. \_\_\_\_\_

8) Start: \_\_\_\_\_

Elapsed: 1 hr & 20 mins

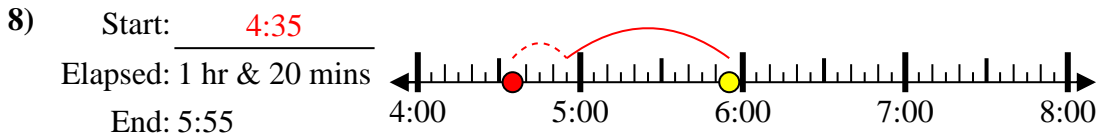
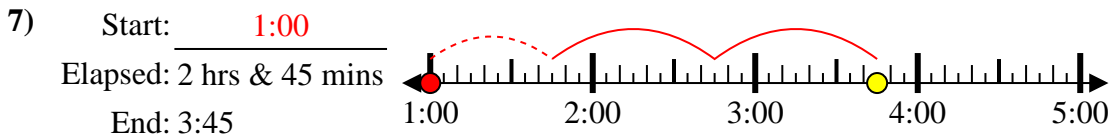
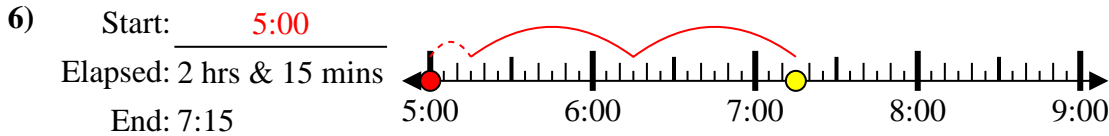
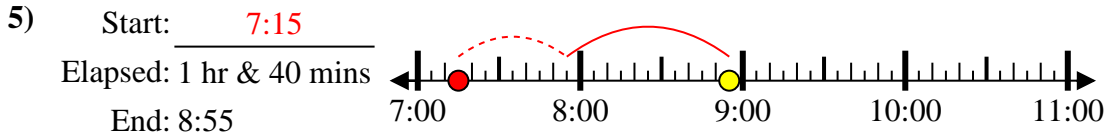
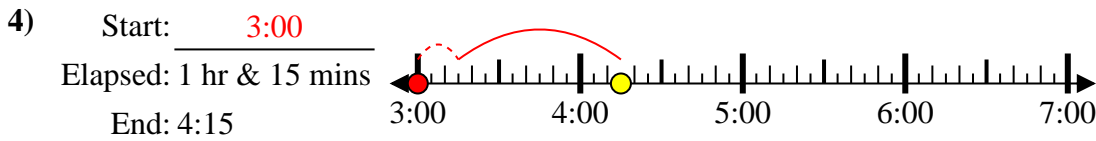
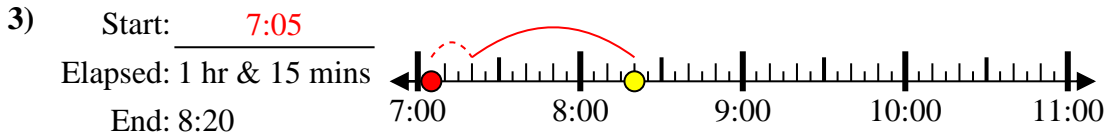
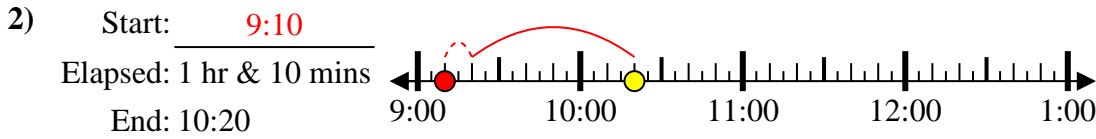
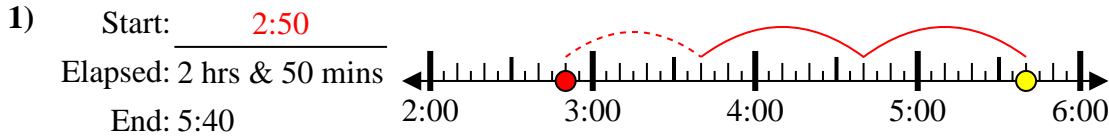
End: 5:55



8. \_\_\_\_\_



Solve each problem.



Answers

1. 2:50

2. 9:10

3. 7:05

4. 3:00

5. 7:15

6. 5:00

7. 1:00

8. 4:35