



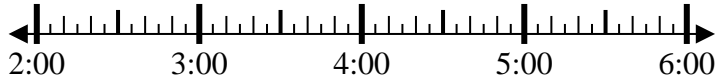
Solve each problem.

Answers

1) Start: \_\_\_\_\_

Elapsed: 1 hr & 45 mins

End: 3:45

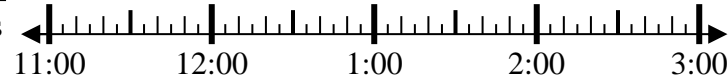


1. \_\_\_\_\_

2) Start: \_\_\_\_\_

Elapsed: 2 hrs & 45 mins

End: 2:20

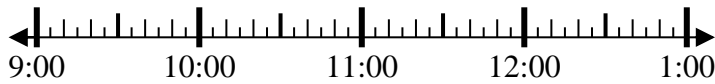


2. \_\_\_\_\_

3) Start: \_\_\_\_\_

Elapsed: 1 hr & 10 mins

End: 10:10

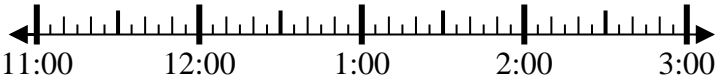


3. \_\_\_\_\_

4) Start: \_\_\_\_\_

Elapsed: 1 hr & 20 mins

End: 1:05



4. \_\_\_\_\_

5) Start: \_\_\_\_\_

Elapsed: 1 hr & 15 mins

End: 1:35



5. \_\_\_\_\_

6) Start: \_\_\_\_\_

Elapsed: 1 hr & 10 mins

End: 6:35

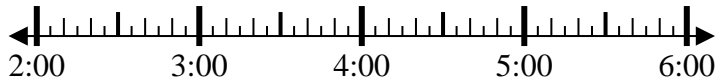


6. \_\_\_\_\_

7) Start: \_\_\_\_\_

Elapsed: 1 hr & 45 mins

End: 4:20

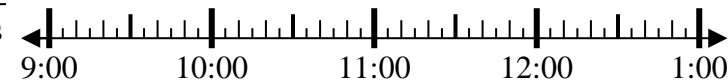


7. \_\_\_\_\_

8) Start: \_\_\_\_\_

Elapsed: 2 hrs & 45 mins

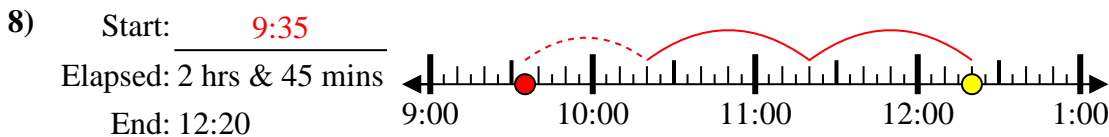
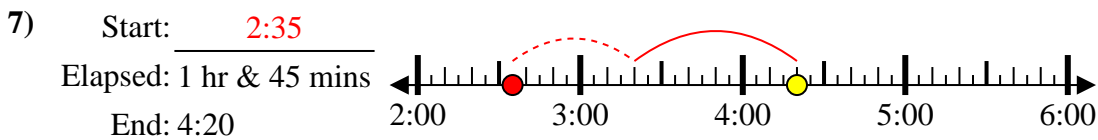
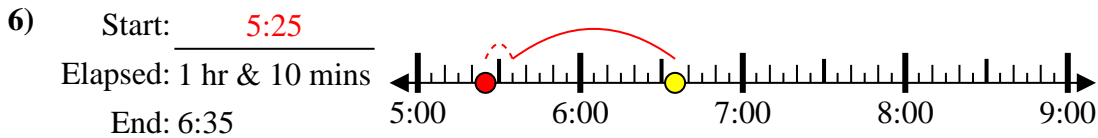
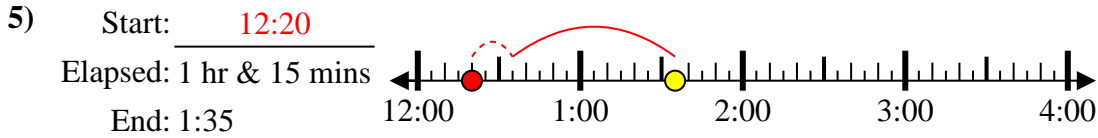
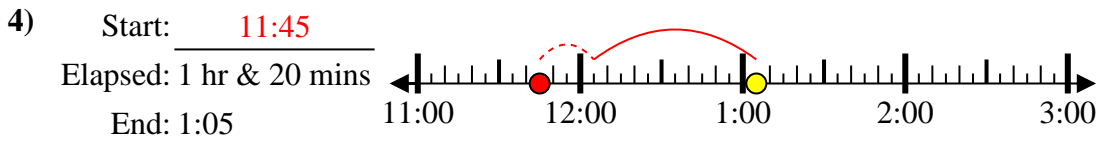
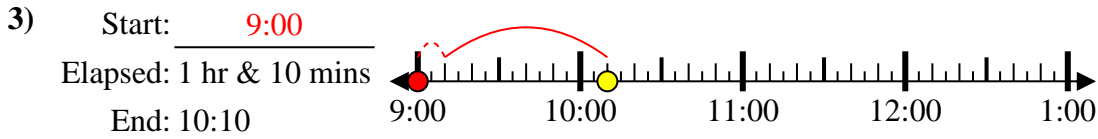
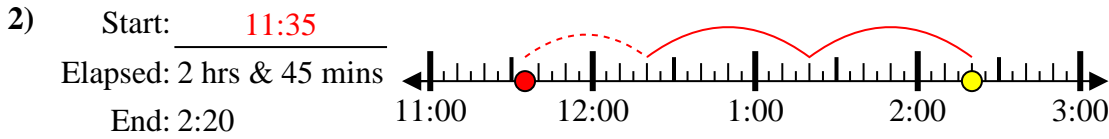
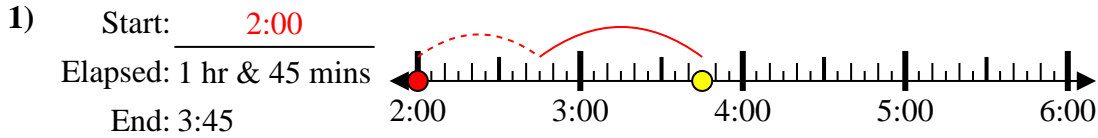
End: 12:20



8. \_\_\_\_\_



Solve each problem.



Answers

1. 2:00

2. 11:35

3. 9:00

4. 11:45

5. 12:20

6. 5:25

7. 2:35

8. 9:35