



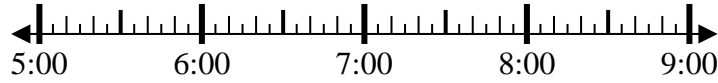
Solve each problem.

Answers

1) Start: 5:45

Elapsed: 1 hr & 25 mins

End: _____

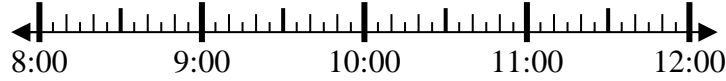


1. _____

2) Start: 8:50

Elapsed: 2 hrs & 40 mins

End: _____

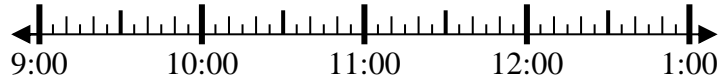


2. _____

3) Start: 9:50

Elapsed: 1 hr & 20 mins

End: _____

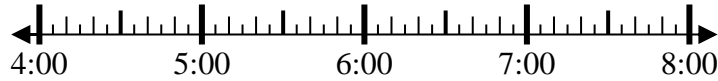


3. _____

4) Start: 4:20

Elapsed: 1 hr & 25 mins

End: _____

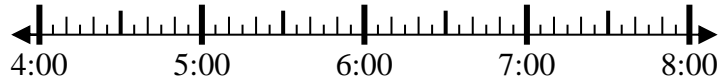


4. _____

5) Start: 4:50

Elapsed: 2 hrs & 10 mins

End: _____

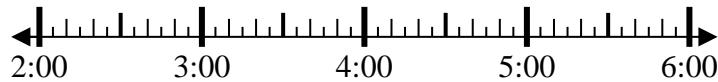


5. _____

6) Start: 2:45

Elapsed: 2 hrs & 50 mins

End: _____

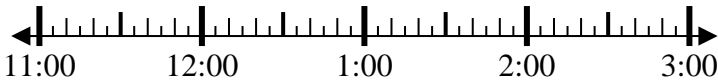


6. _____

7) Start: 11:05

Elapsed: 1 hr & 15 mins

End: _____

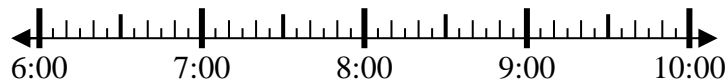


7. _____

8) Start: 6:45

Elapsed: 1 hr & 30 mins

End: _____



8. _____

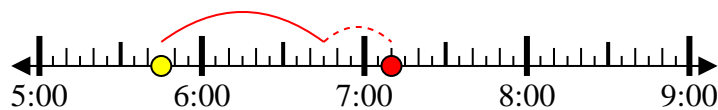


Solve each problem.

1) Start: 5:45

Elapsed: 1 hr & 25 mins

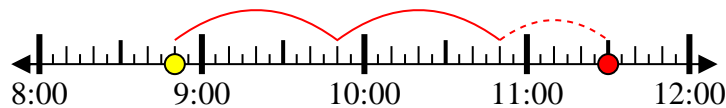
End: 7:10



2) Start: 8:50

Elapsed: 2 hrs & 40 mins

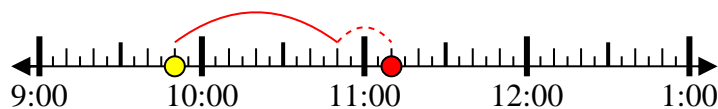
End: 11:30



3) Start: 9:50

Elapsed: 1 hr & 20 mins

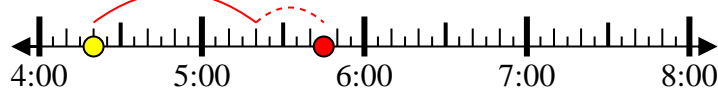
End: 11:10



4) Start: 4:20

Elapsed: 1 hr & 25 mins

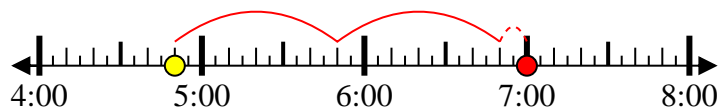
End: 5:45



5) Start: 4:50

Elapsed: 2 hrs & 10 mins

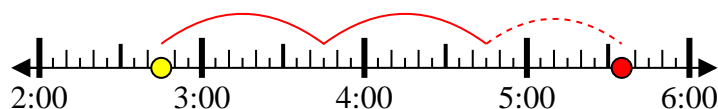
End: 7:00



6) Start: 2:45

Elapsed: 2 hrs & 50 mins

End: 5:35



7) Start: 11:05

Elapsed: 1 hr & 15 mins

End: 12:20



8) Start: 6:45

Elapsed: 1 hr & 30 mins

End: 8:15



Answers

1. 7:10

2. 11:30

3. 11:10

4. 5:45

5. 7:00

6. 5:35

7. 12:20

8. 8:15