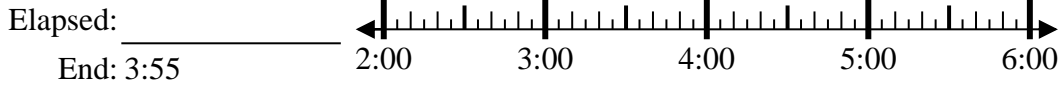




Solve each problem.

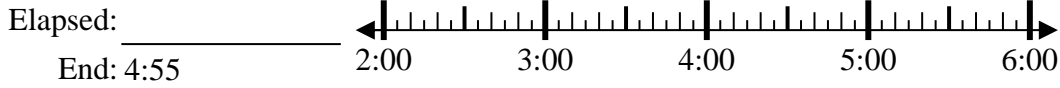
Answers

1) Start: 2:15



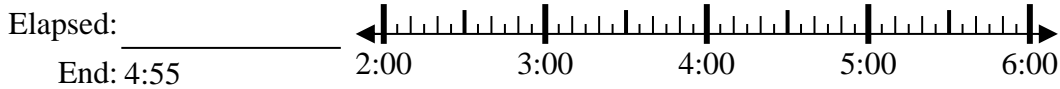
1. \_\_\_\_\_

2) Start: 2:10



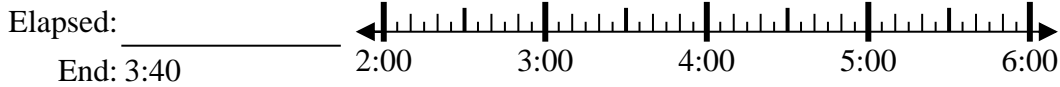
2. \_\_\_\_\_

3) Start: 2:45



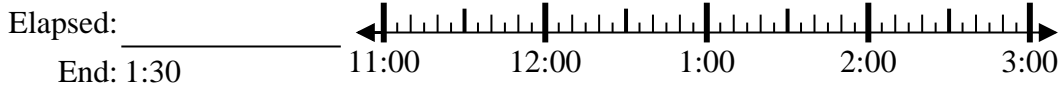
3. \_\_\_\_\_

4) Start: 2:20



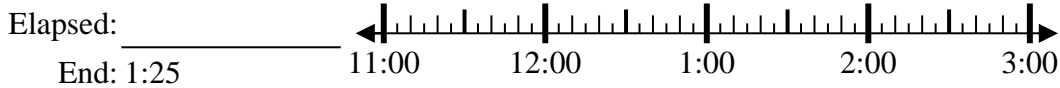
4. \_\_\_\_\_

5) Start: 11:05



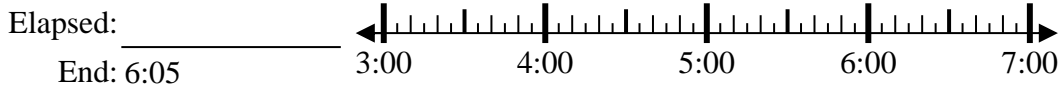
5. \_\_\_\_\_

6) Start: 11:05



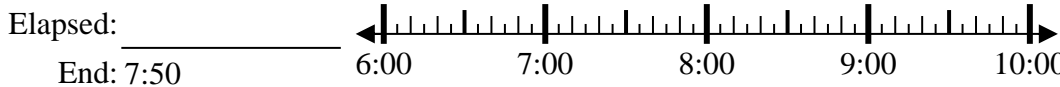
6. \_\_\_\_\_

7) Start: 3:45



7. \_\_\_\_\_

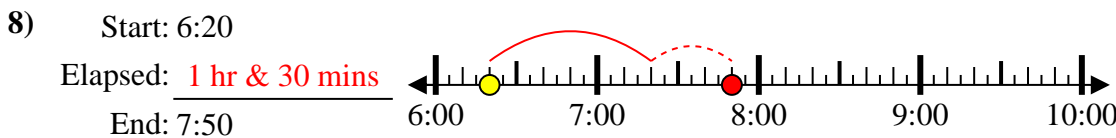
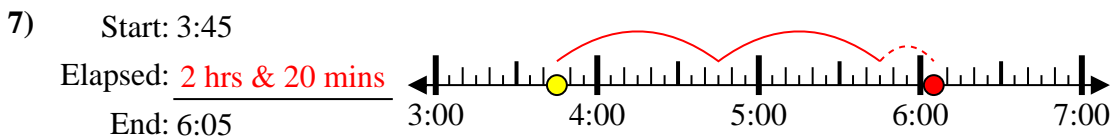
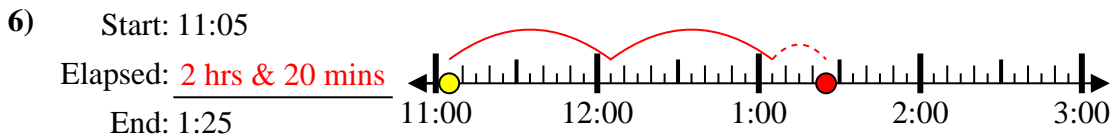
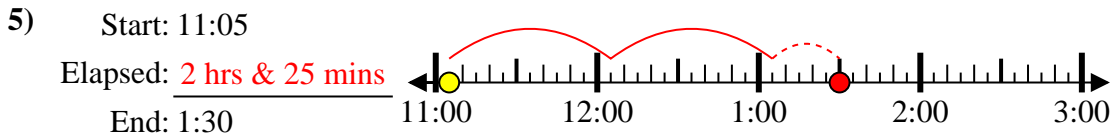
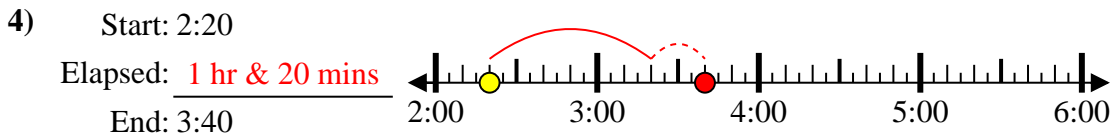
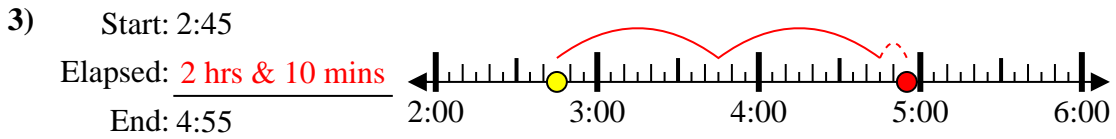
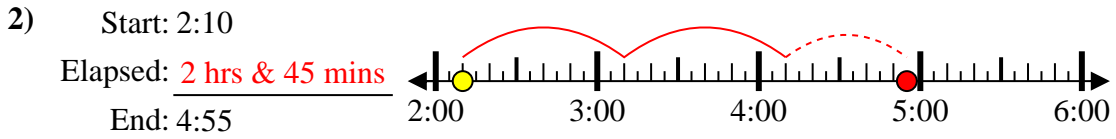
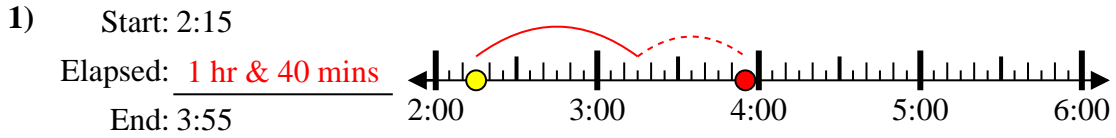
8) Start: 6:20



8. \_\_\_\_\_



Solve each problem.



Answers

1. 1 hr & 40 mins
2. 2 hrs & 45 mins
3. 2 hrs & 10 mins
4. 1 hr & 20 mins
5. 2 hrs & 25 mins
6. 2 hrs & 20 mins
7. 2 hrs & 20 mins
8. 1 hr & 30 mins



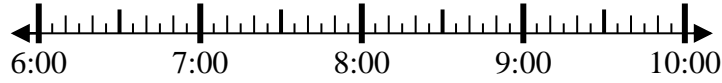
Solve each problem.

Answers

1) Start: 6:45

Elapsed: \_\_\_\_\_

End: 7:55

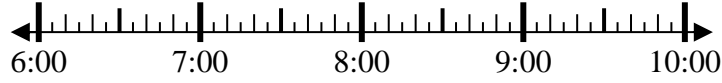


1. \_\_\_\_\_

2) Start: 6:25

Elapsed: \_\_\_\_\_

End: 9:05

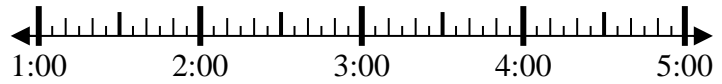


2. \_\_\_\_\_

3) Start: 1:10

Elapsed: \_\_\_\_\_

End: 3:00



3. \_\_\_\_\_

4) Start: 11:15

Elapsed: \_\_\_\_\_

End: 1:00



4. \_\_\_\_\_

5) Start: 3:25

Elapsed: \_\_\_\_\_

End: 5:35

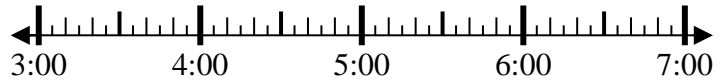


5. \_\_\_\_\_

6) Start: 3:20

Elapsed: \_\_\_\_\_

End: 5:55

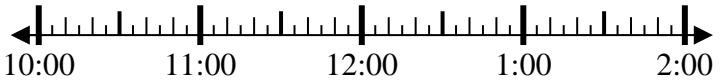


6. \_\_\_\_\_

7) Start: 10:35

Elapsed: \_\_\_\_\_

End: 12:25

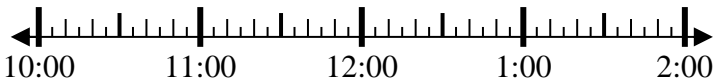


7. \_\_\_\_\_

8) Start: 10:00

Elapsed: \_\_\_\_\_

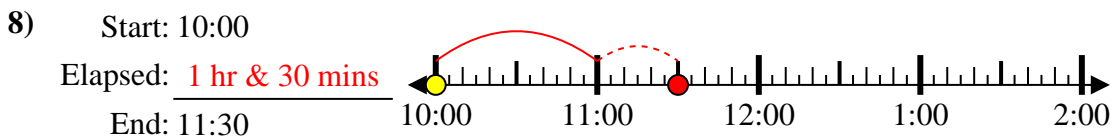
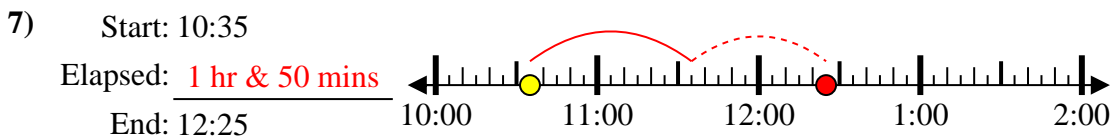
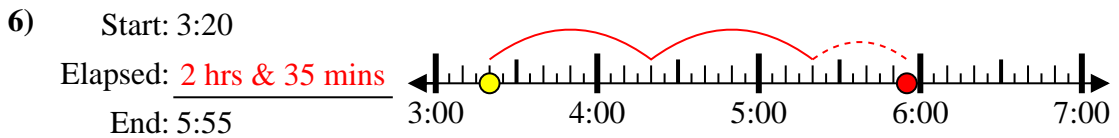
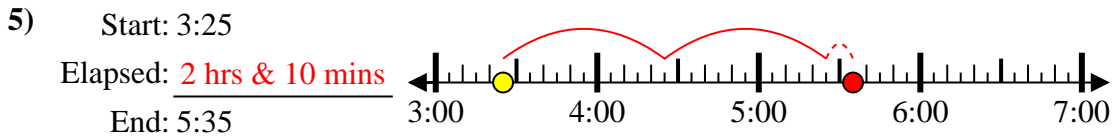
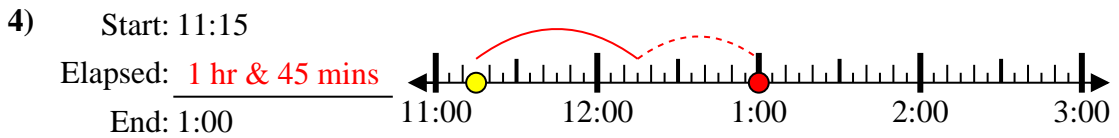
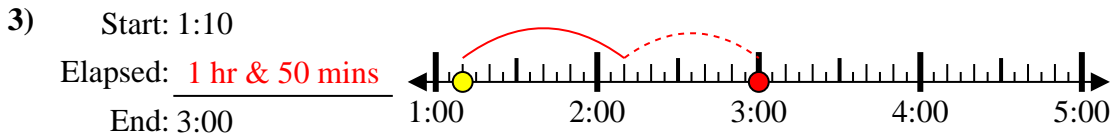
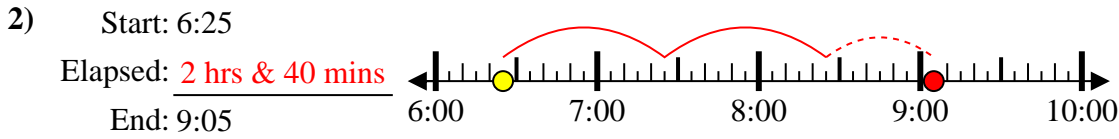
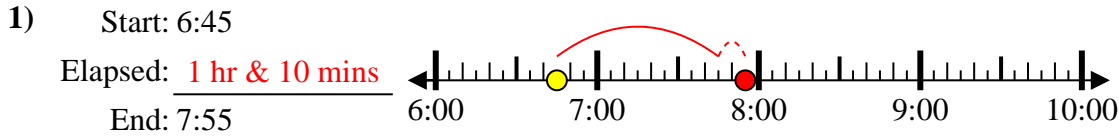
End: 11:30



8. \_\_\_\_\_



Solve each problem.



Answers

1. 1 hr & 10 mins

2. 2 hrs & 40 mins

3. 1 hr & 50 mins

4. 1 hr & 45 mins

5. 2 hrs & 10 mins

6. 2 hrs & 35 mins

7. 1 hr & 50 mins

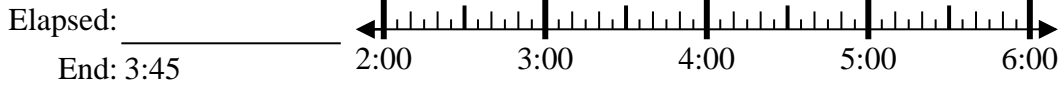
8. 1 hr & 30 mins



Solve each problem.

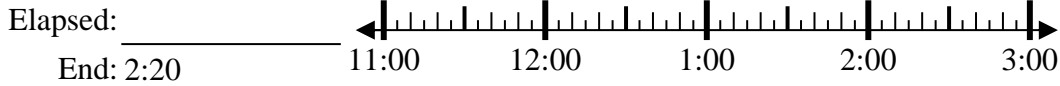
Answers

1) Start: 2:00



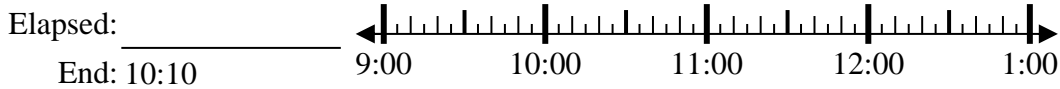
1. \_\_\_\_\_

2) Start: 11:35



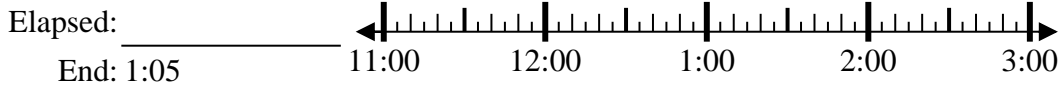
2. \_\_\_\_\_

3) Start: 9:00



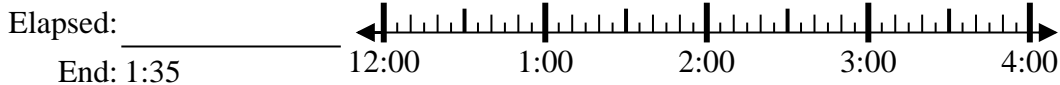
3. \_\_\_\_\_

4) Start: 11:45



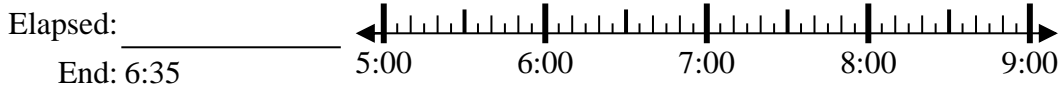
4. \_\_\_\_\_

5) Start: 12:20



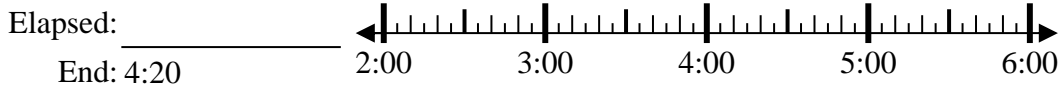
5. \_\_\_\_\_

6) Start: 5:25



6. \_\_\_\_\_

7) Start: 2:35



7. \_\_\_\_\_

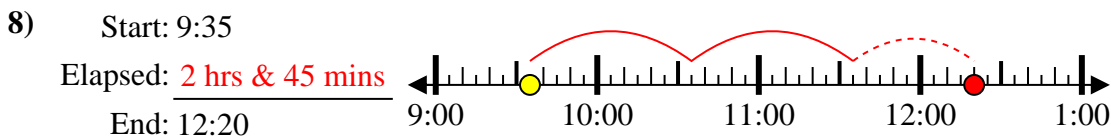
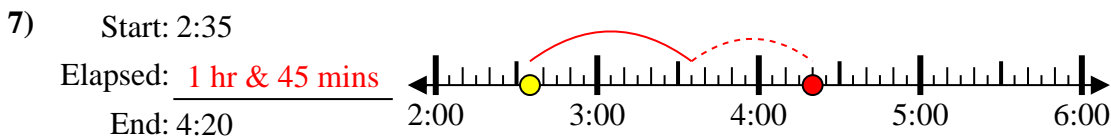
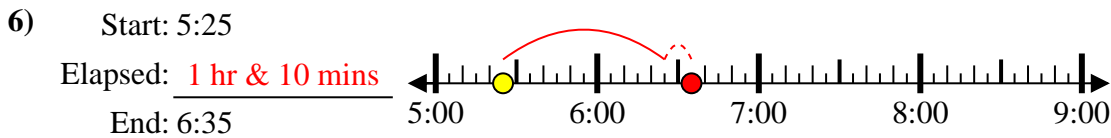
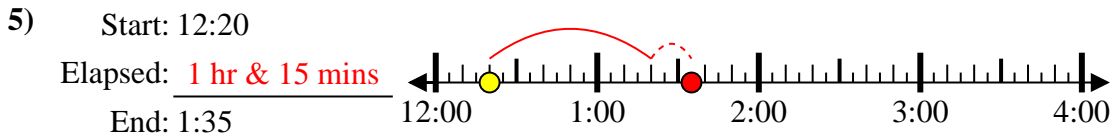
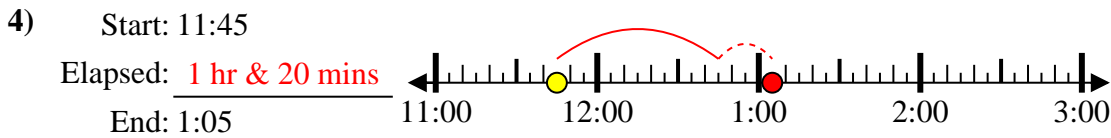
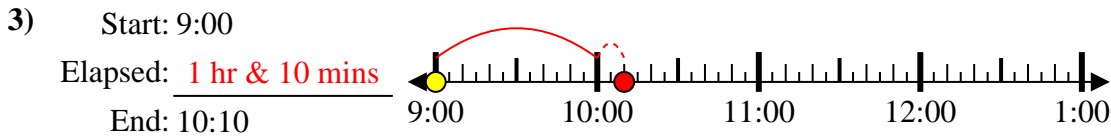
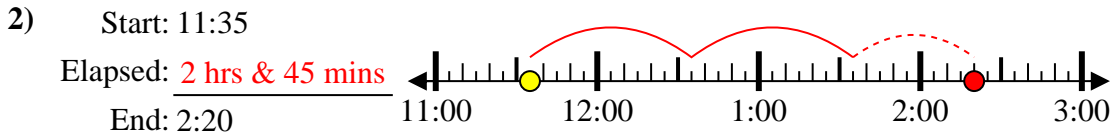
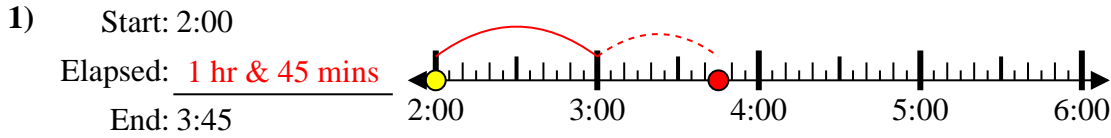
8) Start: 9:35



8. \_\_\_\_\_



Solve each problem.



Answers

1. 1 hr & 45 mins

2. 2 hrs & 45 mins

3. 1 hr & 10 mins

4. 1 hr & 20 mins

5. 1 hr & 15 mins

6. 1 hr & 10 mins

7. 1 hr & 45 mins

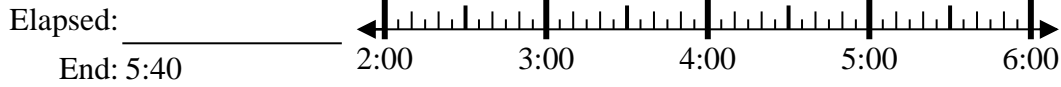
8. 2 hrs & 45 mins



Solve each problem.

Answers

1) Start: 2:50



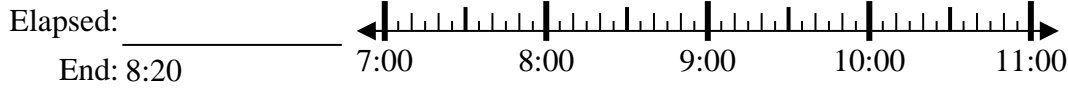
1. \_\_\_\_\_

2) Start: 9:10



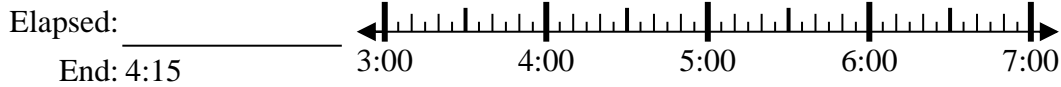
2. \_\_\_\_\_

3) Start: 7:05



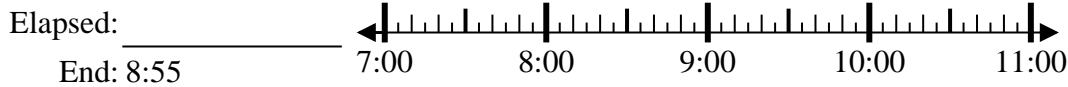
3. \_\_\_\_\_

4) Start: 3:00



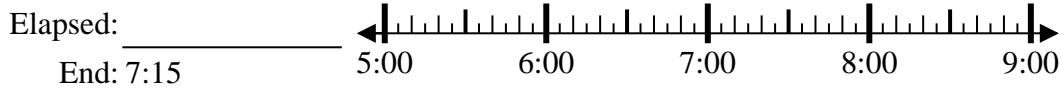
4. \_\_\_\_\_

5) Start: 7:15



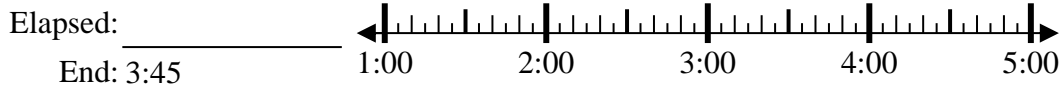
5. \_\_\_\_\_

6) Start: 5:00



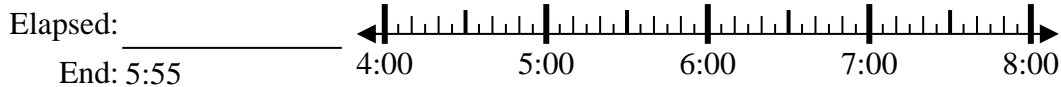
6. \_\_\_\_\_

7) Start: 1:00



7. \_\_\_\_\_

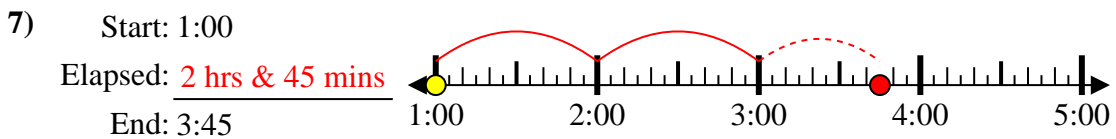
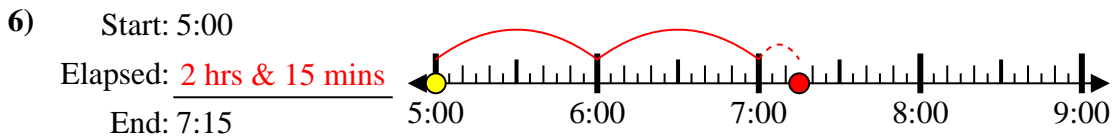
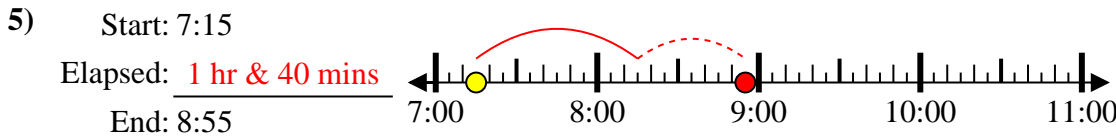
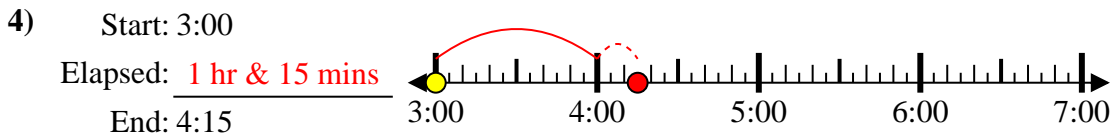
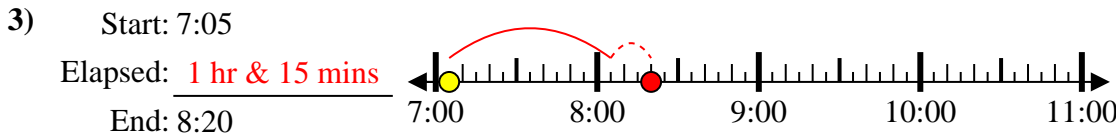
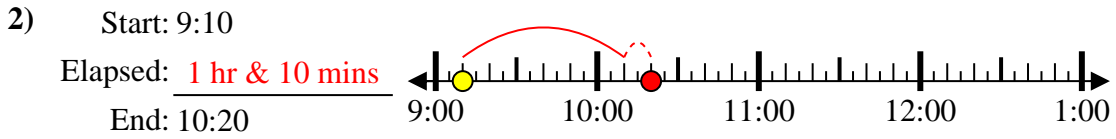
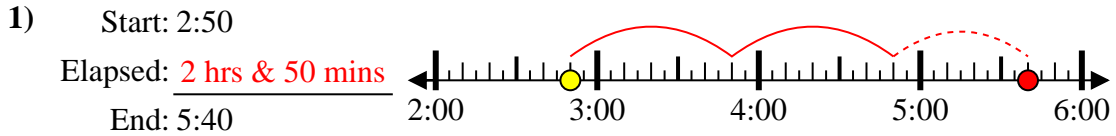
8) Start: 4:35



8. \_\_\_\_\_



Solve each problem.



Answers

1. 2 hrs & 50 mins

2. 1 hr & 10 mins

3. 1 hr & 15 mins

4. 1 hr & 15 mins

5. 1 hr & 40 mins

6. 2 hrs & 15 mins

7. 2 hrs & 45 mins

8. 1 hr & 20 mins





Solve each problem.

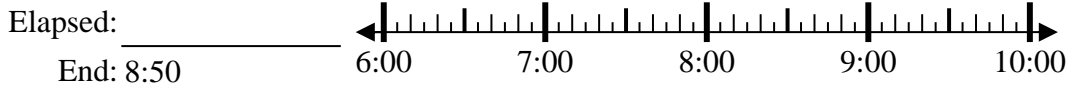
Answers

1) Start: 12:10



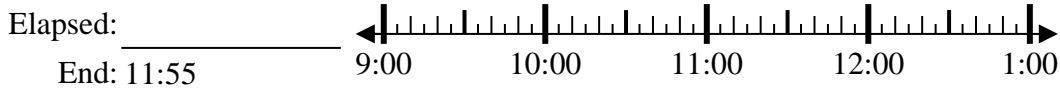
1. \_\_\_\_\_

2) Start: 6:40



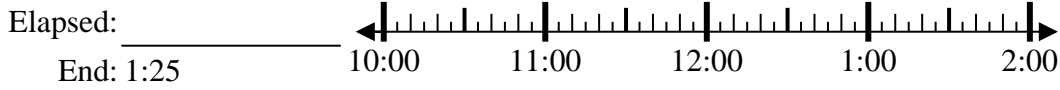
2. \_\_\_\_\_

3) Start: 9:05



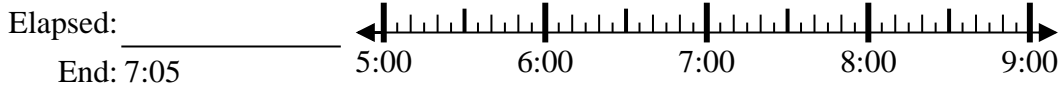
3. \_\_\_\_\_

4) Start: 10:45



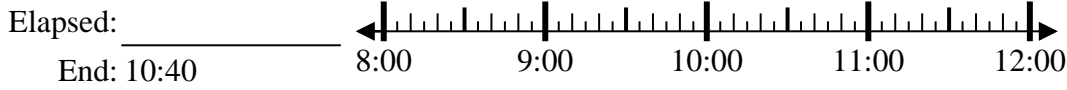
4. \_\_\_\_\_

5) Start: 5:35



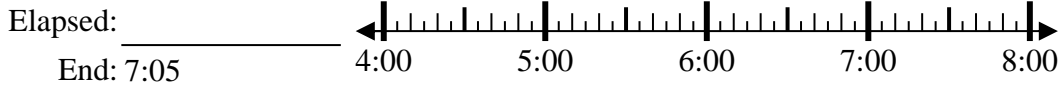
5. \_\_\_\_\_

6) Start: 8:15



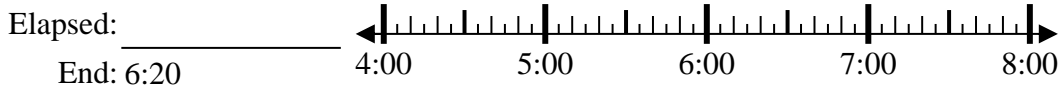
6. \_\_\_\_\_

7) Start: 4:10



7. \_\_\_\_\_

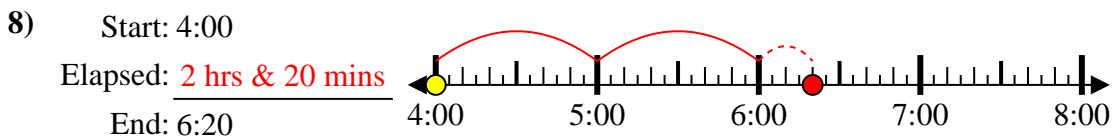
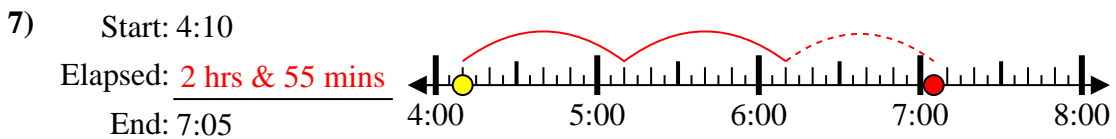
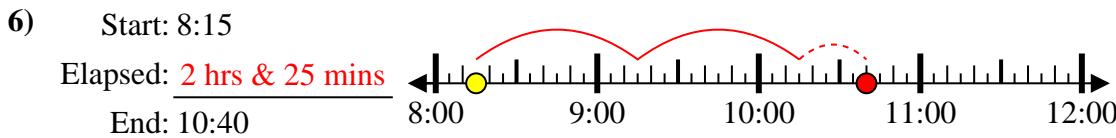
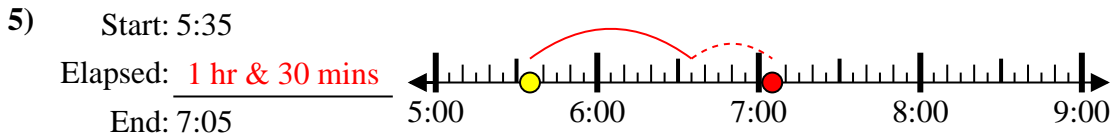
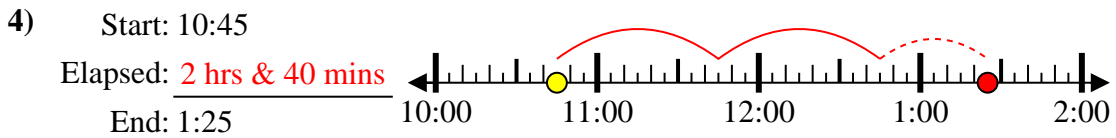
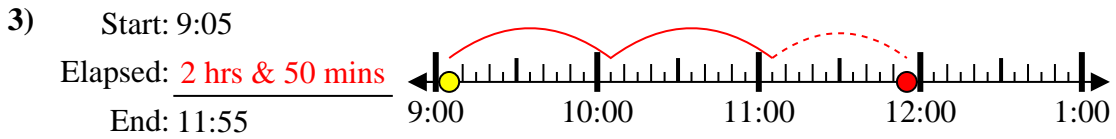
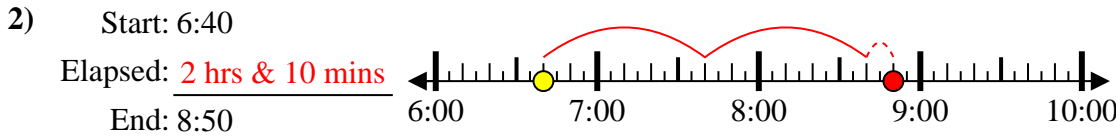
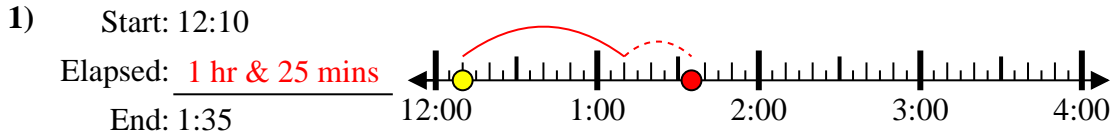
8) Start: 4:00



8. \_\_\_\_\_



Solve each problem.



Answers

1. 1 hr & 25 mins

2. 2 hrs & 10 mins

3. 2 hrs & 50 mins

4. 2 hrs & 40 mins

5. 1 hr & 30 mins

6. 2 hrs & 25 mins

7. 2 hrs & 55 mins

8. 2 hrs & 20 mins



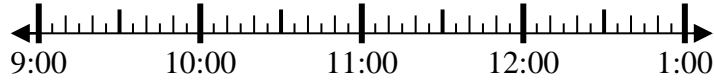
Solve each problem.

Answers

1) Start: 9:35

Elapsed: \_\_\_\_\_

End: 12:05

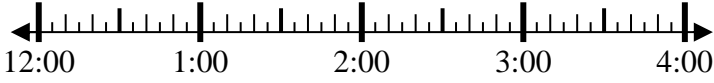


1. \_\_\_\_\_

2) Start: 12:50

Elapsed: \_\_\_\_\_

End: 2:35

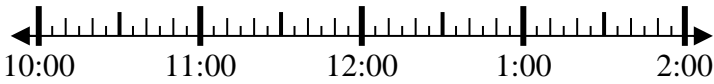


2. \_\_\_\_\_

3) Start: 10:15

Elapsed: \_\_\_\_\_

End: 11:40

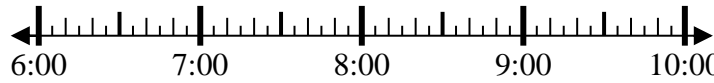


3. \_\_\_\_\_

4) Start: 6:25

Elapsed: \_\_\_\_\_

End: 8:10

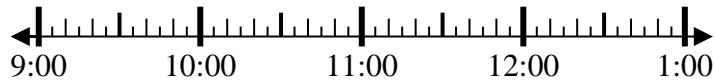


4. \_\_\_\_\_

5) Start: 9:10

Elapsed: \_\_\_\_\_

End: 10:25



5. \_\_\_\_\_

6) Start: 11:45

Elapsed: \_\_\_\_\_

End: 2:00



6. \_\_\_\_\_

7) Start: 12:20

Elapsed: \_\_\_\_\_

End: 2:00

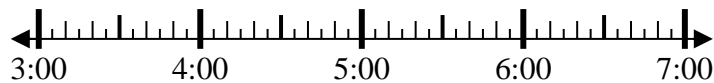


7. \_\_\_\_\_

8) Start: 3:35

Elapsed: \_\_\_\_\_

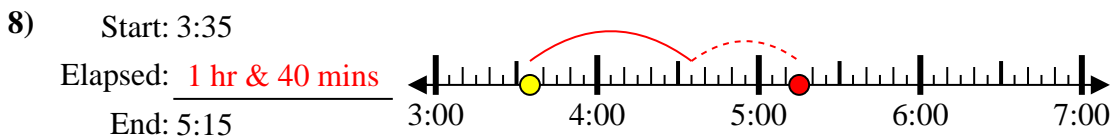
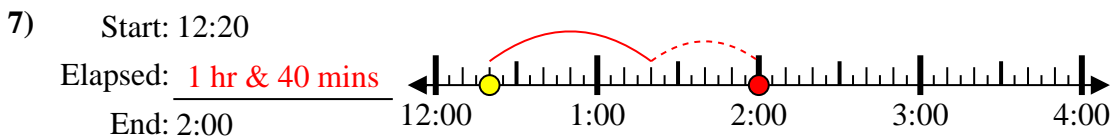
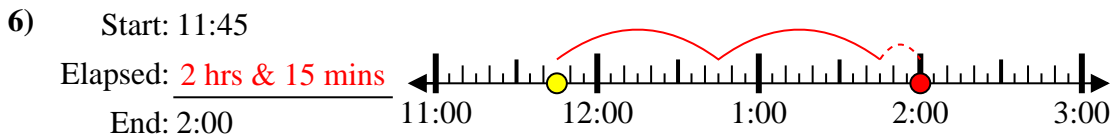
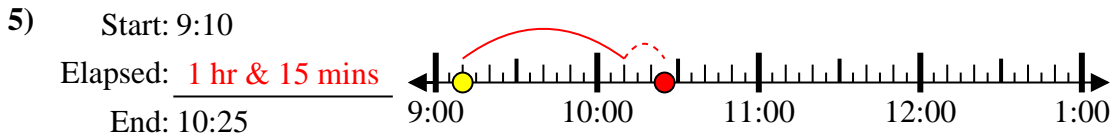
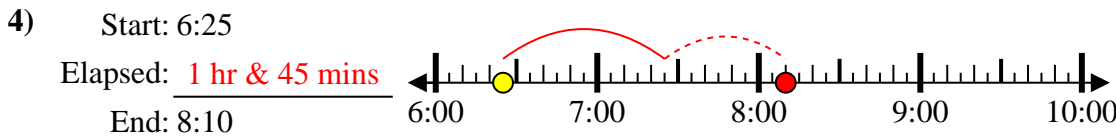
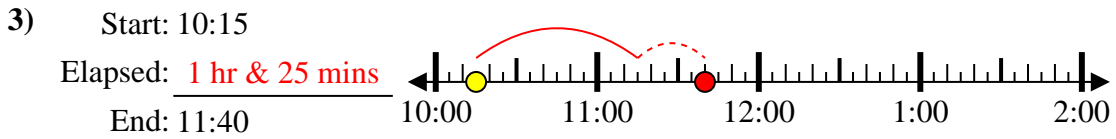
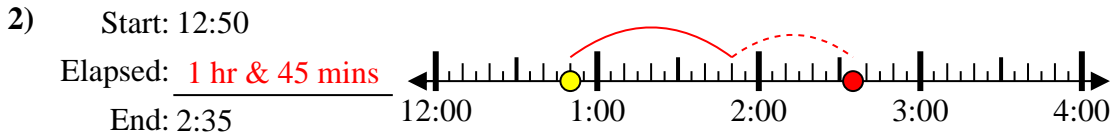
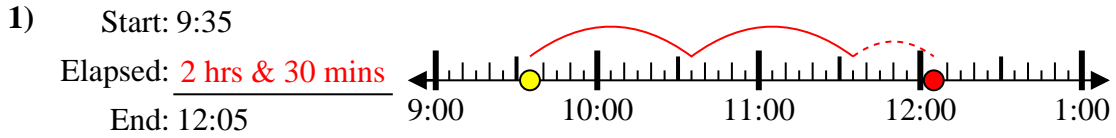
End: 5:15



8. \_\_\_\_\_



Solve each problem.



Answers

1. 2 hrs & 30 mins

2. 1 hr & 45 mins

3. 1 hr & 25 mins

4. 1 hr & 45 mins

5. 1 hr & 15 mins

6. 2 hrs & 15 mins

7. 1 hr & 40 mins

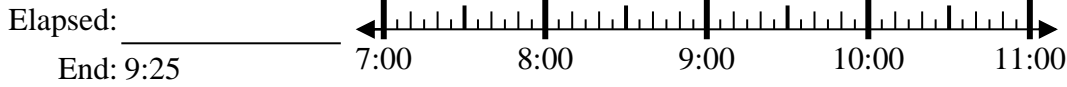
8. 1 hr & 40 mins



Solve each problem.

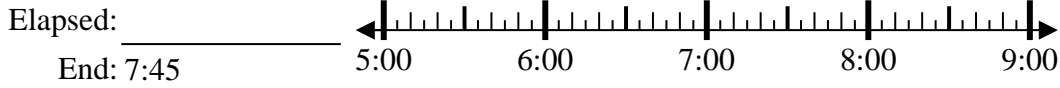
Answers

1) Start: 7:05



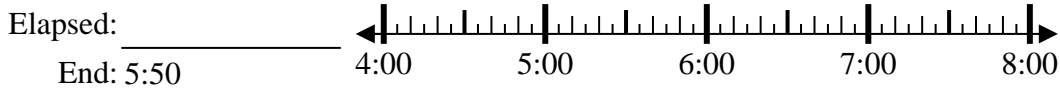
1. \_\_\_\_\_

2) Start: 5:25



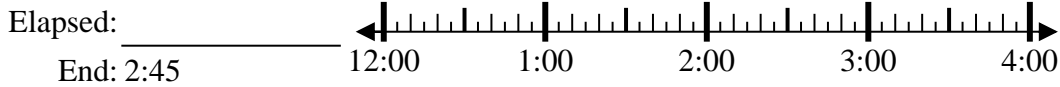
2. \_\_\_\_\_

3) Start: 4:15



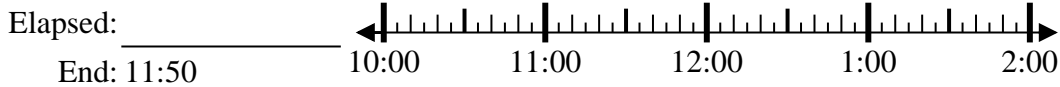
3. \_\_\_\_\_

4) Start: 12:05



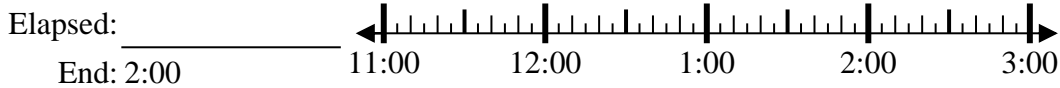
4. \_\_\_\_\_

5) Start: 10:05



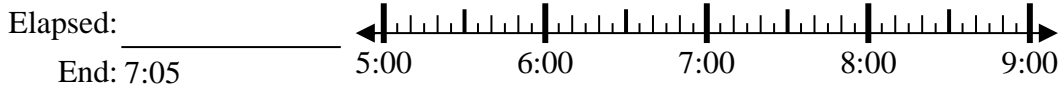
5. \_\_\_\_\_

6) Start: 11:45



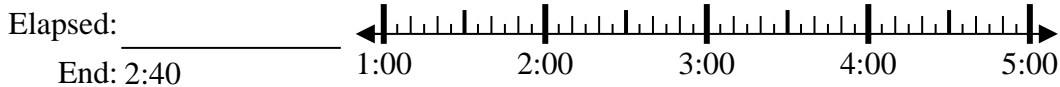
6. \_\_\_\_\_

7) Start: 5:25



7. \_\_\_\_\_

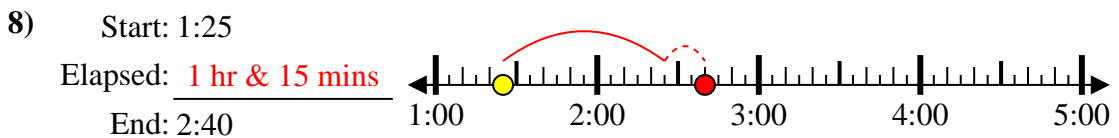
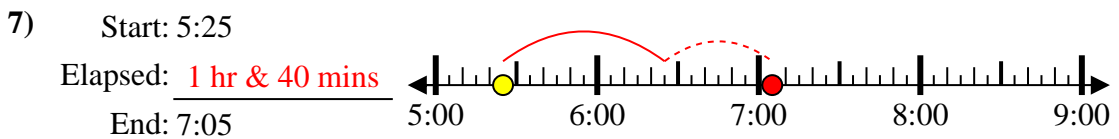
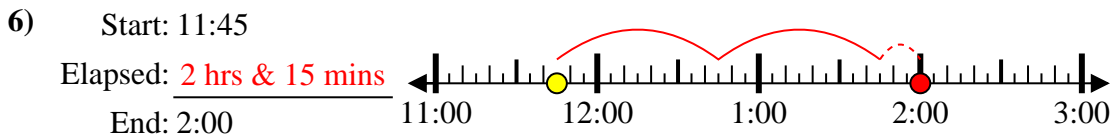
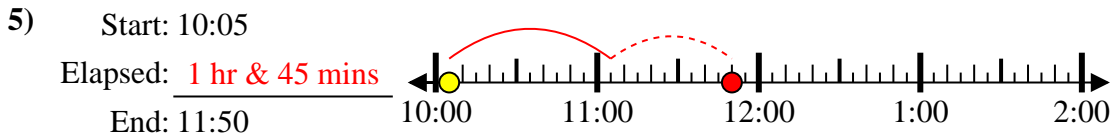
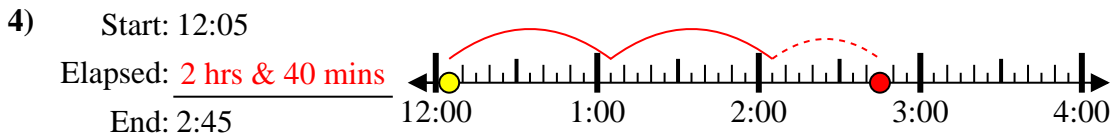
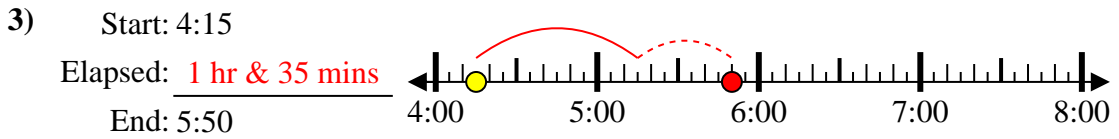
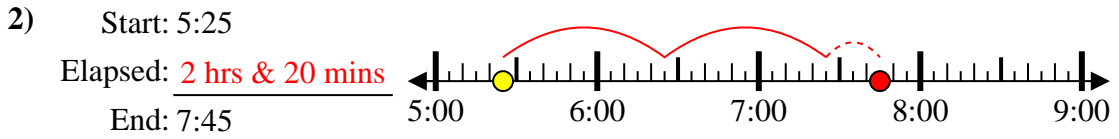
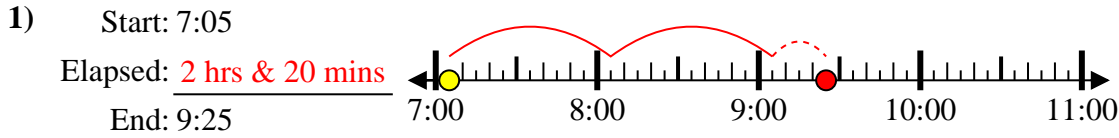
8) Start: 1:25



8. \_\_\_\_\_



Solve each problem.



Answers

1. 2 hrs & 20 mins

2. 2 hrs & 20 mins

3. 1 hr & 35 mins

4. 2 hrs & 40 mins

5. 1 hr & 45 mins

6. 2 hrs & 15 mins

7. 1 hr & 40 mins

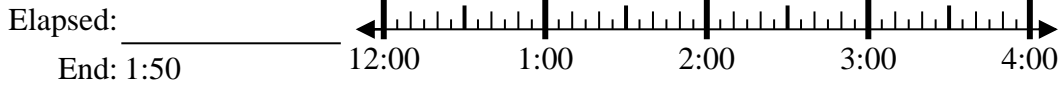
8. 1 hr & 15 mins



Solve each problem.

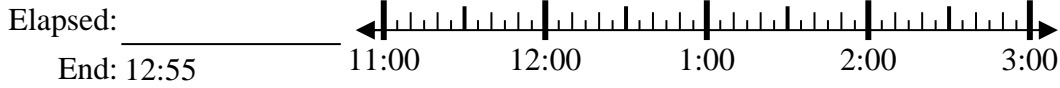
Answers

1) Start: 12:15



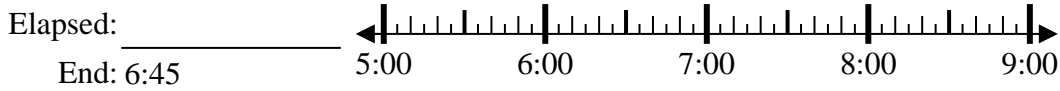
1. \_\_\_\_\_

2) Start: 11:30



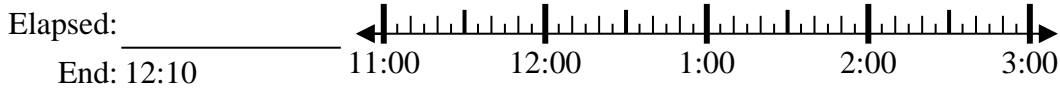
2. \_\_\_\_\_

3) Start: 5:10



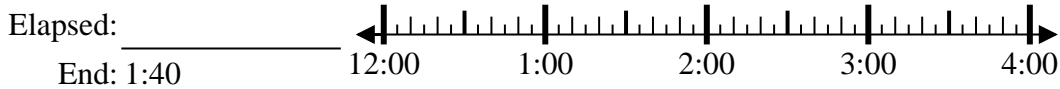
3. \_\_\_\_\_

4) Start: 11:00



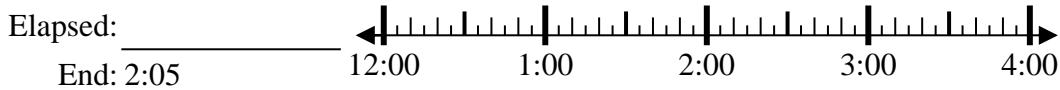
4. \_\_\_\_\_

5) Start: 12:30



5. \_\_\_\_\_

6) Start: 12:40



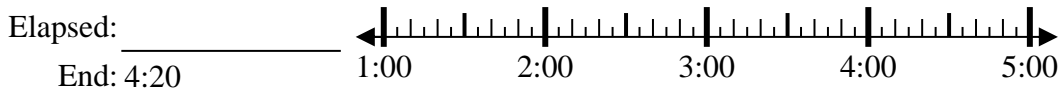
6. \_\_\_\_\_

7) Start: 9:40



7. \_\_\_\_\_

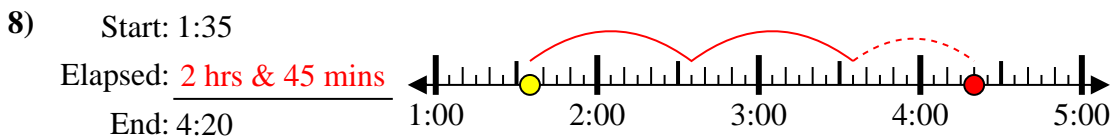
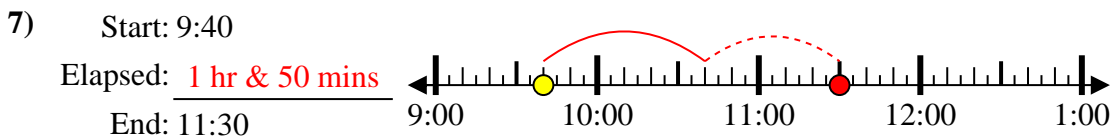
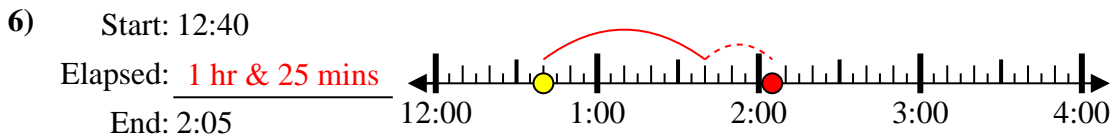
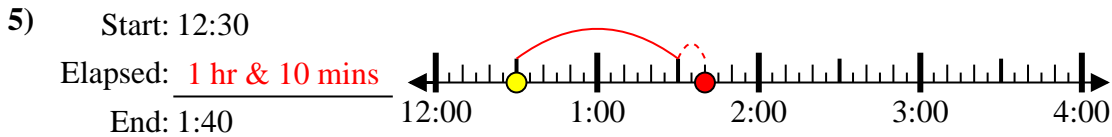
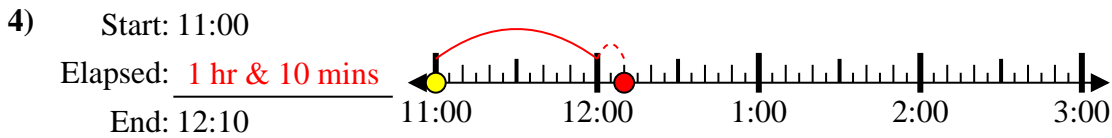
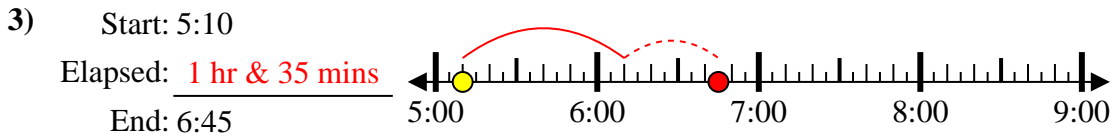
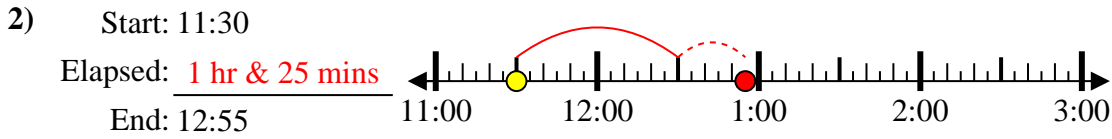
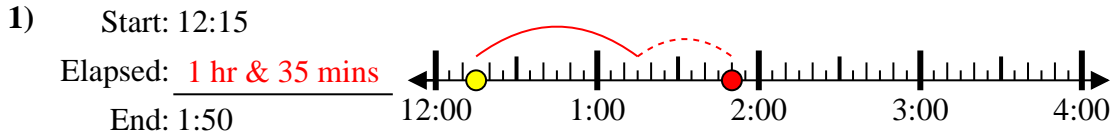
8) Start: 1:35



8. \_\_\_\_\_



Solve each problem.



Answers

1. 1 hr & 35 mins

2. 1 hr & 25 mins

3. 1 hr & 35 mins

4. 1 hr & 10 mins

5. 1 hr & 10 mins

6. 1 hr & 25 mins

7. 1 hr & 50 mins

8. 2 hrs & 45 mins

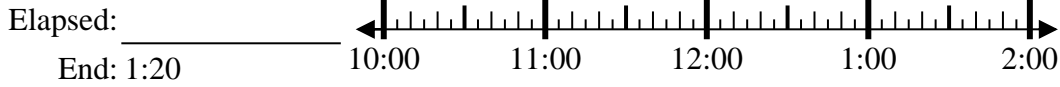




Solve each problem.

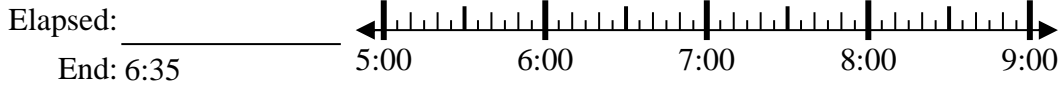
Answers

1) Start: 10:50



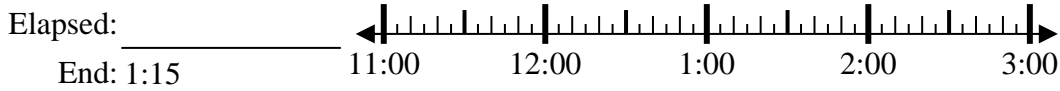
1. \_\_\_\_\_

2) Start: 5:10



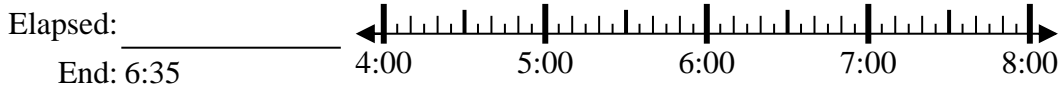
2. \_\_\_\_\_

3) Start: 11:40



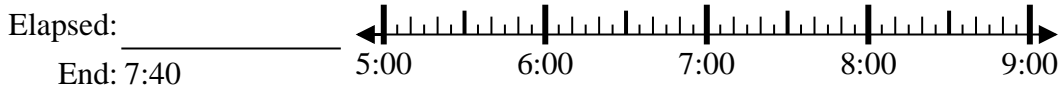
3. \_\_\_\_\_

4) Start: 4:20



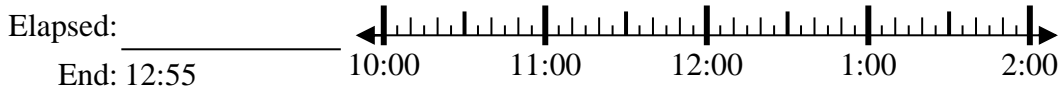
4. \_\_\_\_\_

5) Start: 5:15



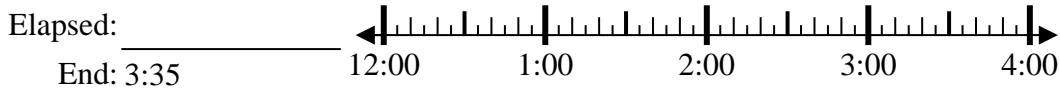
5. \_\_\_\_\_

6) Start: 10:20



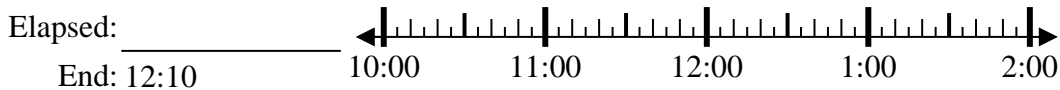
6. \_\_\_\_\_

7) Start: 12:45



7. \_\_\_\_\_

8) Start: 10:40



8. \_\_\_\_\_

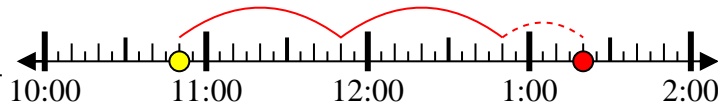


Solve each problem.

1) Start: 10:50

Elapsed: 2 hrs & 30 mins

End: 1:20



1. 2 hrs & 30 mins

2) Start: 5:10

Elapsed: 1 hr & 25 mins

End: 6:35



2. 1 hr & 25 mins

3) Start: 11:40

Elapsed: 1 hr & 35 mins

End: 1:15

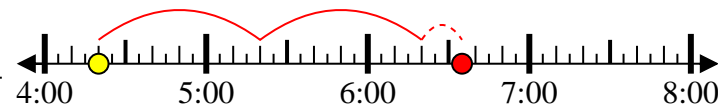


3. 1 hr & 35 mins

4) Start: 4:20

Elapsed: 2 hrs & 15 mins

End: 6:35

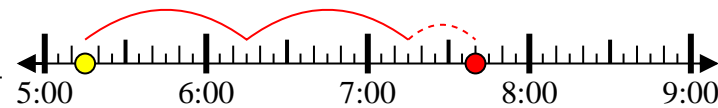


4. 2 hrs & 15 mins

5) Start: 5:15

Elapsed: 2 hrs & 25 mins

End: 7:40

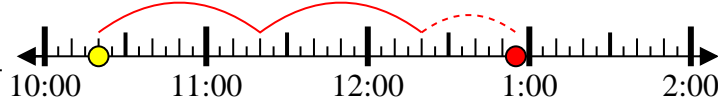


5. 2 hrs & 25 mins

6) Start: 10:20

Elapsed: 2 hrs & 35 mins

End: 12:55

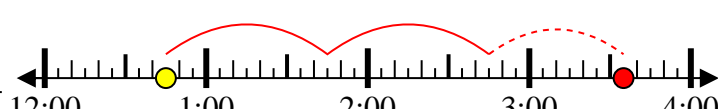


6. 2 hrs & 35 mins

7) Start: 12:45

Elapsed: 2 hrs & 50 mins

End: 3:35



7. 2 hrs & 50 mins

8) Start: 10:40

Elapsed: 1 hr & 30 mins

End: 12:10



8. 1 hr & 30 mins

**Answers**



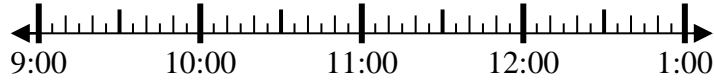
Solve each problem.

Answers

1) Start: 9:20

Elapsed: \_\_\_\_\_

End: 10:45

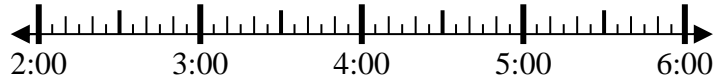


1. \_\_\_\_\_

2) Start: 2:00

Elapsed: \_\_\_\_\_

End: 4:55



2. \_\_\_\_\_

3) Start: 7:40

Elapsed: \_\_\_\_\_

End: 9:55

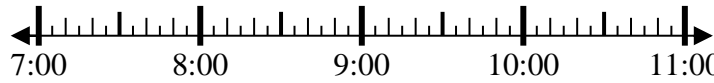


3. \_\_\_\_\_

4) Start: 7:15

Elapsed: \_\_\_\_\_

End: 8:25

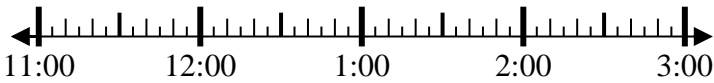


4. \_\_\_\_\_

5) Start: 11:15

Elapsed: \_\_\_\_\_

End: 1:40



5. \_\_\_\_\_

6) Start: 5:30

Elapsed: \_\_\_\_\_

End: 6:55



6. \_\_\_\_\_

7) Start: 12:00

Elapsed: \_\_\_\_\_

End: 2:40



7. \_\_\_\_\_

8) Start: 12:15

Elapsed: \_\_\_\_\_

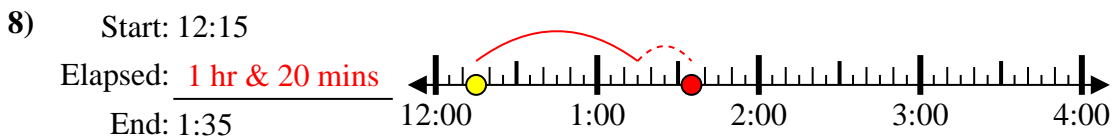
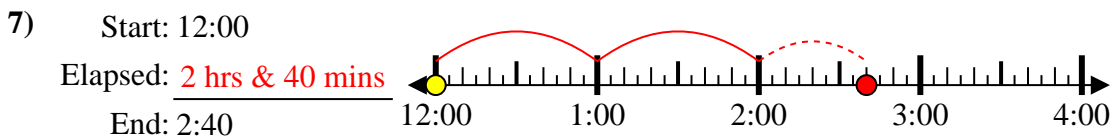
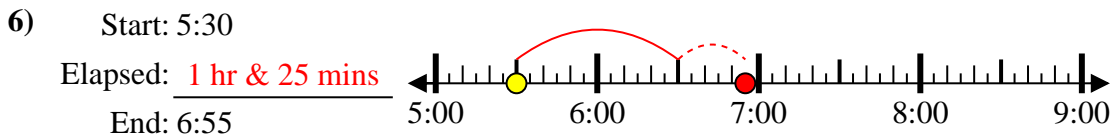
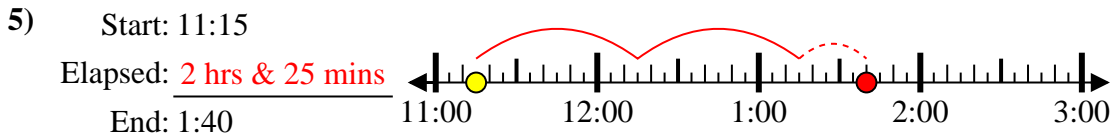
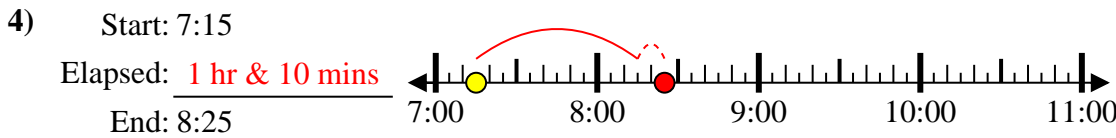
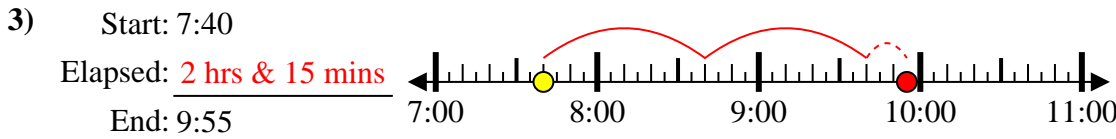
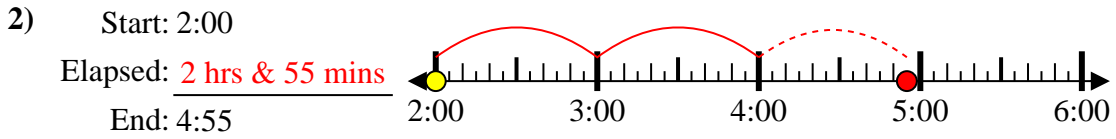
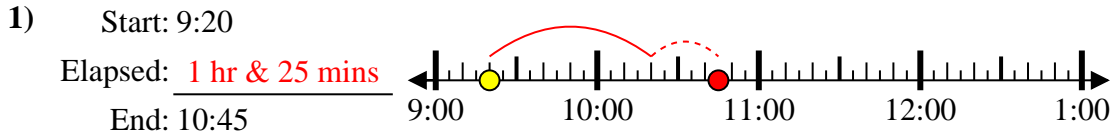
End: 1:35



8. \_\_\_\_\_



Solve each problem.



Answers

1. 1 hr & 25 mins

2. 2 hrs & 55 mins

3. 2 hrs & 15 mins

4. 1 hr & 10 mins

5. 2 hrs & 25 mins

6. 1 hr & 25 mins

7. 2 hrs & 40 mins

8. 1 hr & 20 mins