



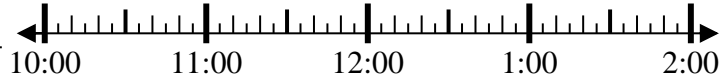
Solve each problem.

Answers

1) Start: 10:50

Elapsed: _____

End: 1:20

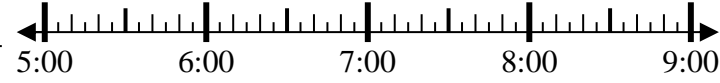


1. _____

2) Start: 5:10

Elapsed: _____

End: 6:35

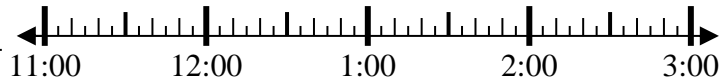


2. _____

3) Start: 11:40

Elapsed: _____

End: 1:15

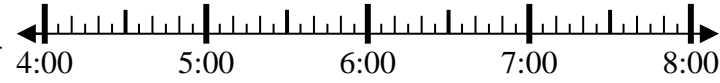


3. _____

4) Start: 4:20

Elapsed: _____

End: 6:35

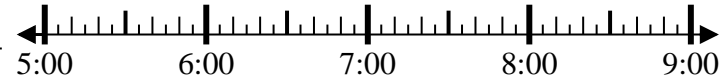


4. _____

5) Start: 5:15

Elapsed: _____

End: 7:40

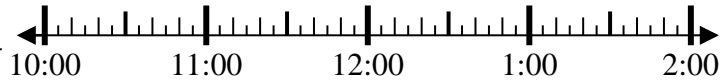


5. _____

6) Start: 10:20

Elapsed: _____

End: 12:55

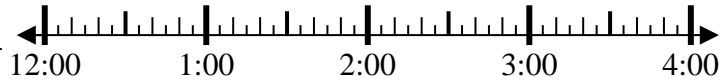


6. _____

7) Start: 12:45

Elapsed: _____

End: 3:35



7. _____

8) Start: 10:40

Elapsed: _____

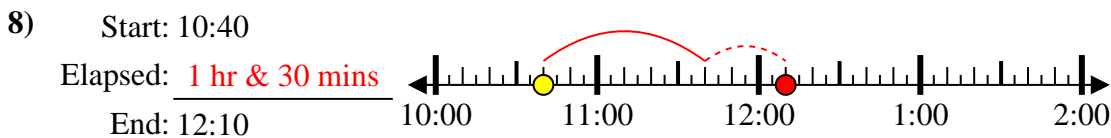
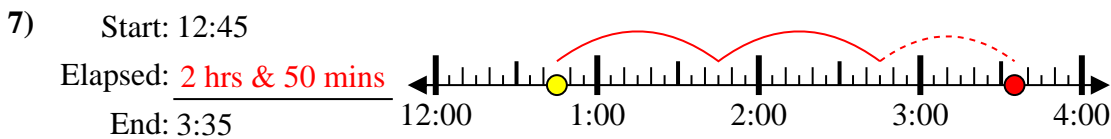
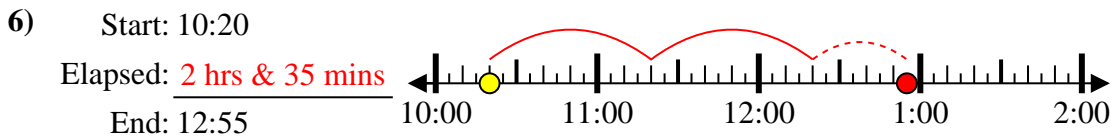
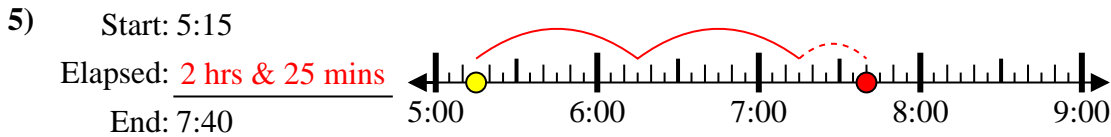
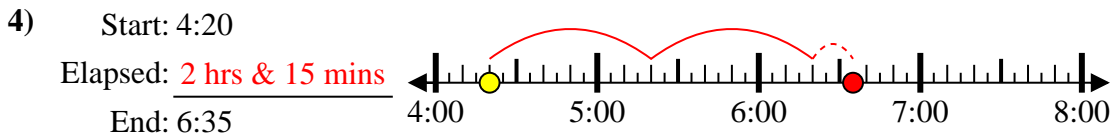
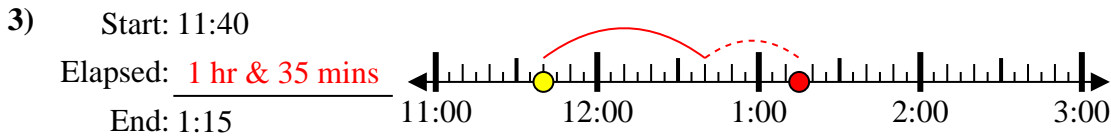
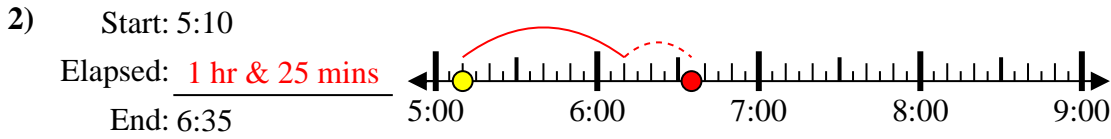
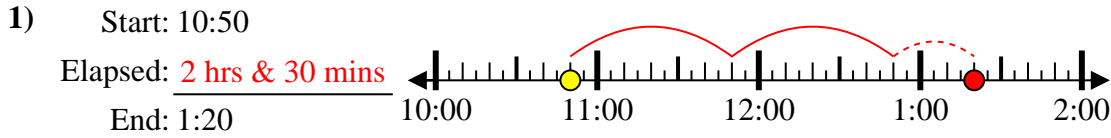
End: 12:10



8. _____



Solve each problem.



Answers

1. 2 hrs & 30 mins

2. 1 hr & 25 mins

3. 1 hr & 35 mins

4. 2 hrs & 15 mins

5. 2 hrs & 25 mins

6. 2 hrs & 35 mins

7. 2 hrs & 50 mins

8. 1 hr & 30 mins