



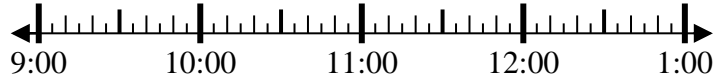
Solve each problem.

Answers

1) Start: 9:20

Elapsed: _____

End: 10:45

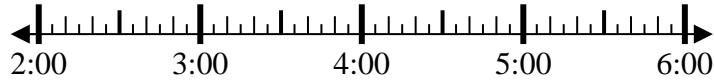


1. _____

2) Start: 2:00

Elapsed: _____

End: 4:55



2. _____

3) Start: 7:40

Elapsed: _____

End: 9:55



3. _____

4) Start: 7:15

Elapsed: _____

End: 8:25

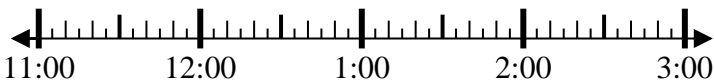


4. _____

5) Start: 11:15

Elapsed: _____

End: 1:40



5. _____

6) Start: 5:30

Elapsed: _____

End: 6:55



6. _____

7) Start: 12:00

Elapsed: _____

End: 2:40



7. _____

8) Start: 12:15

Elapsed: _____

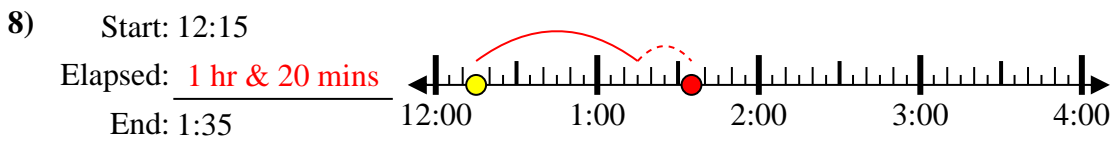
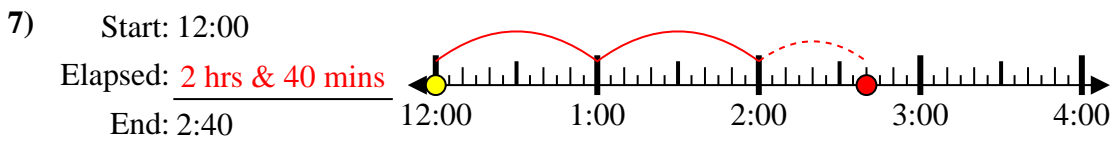
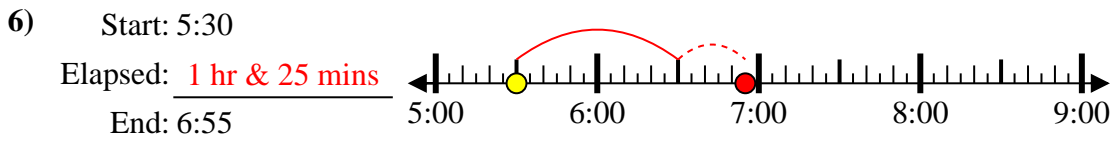
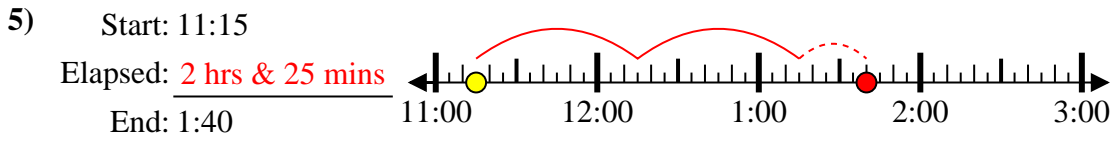
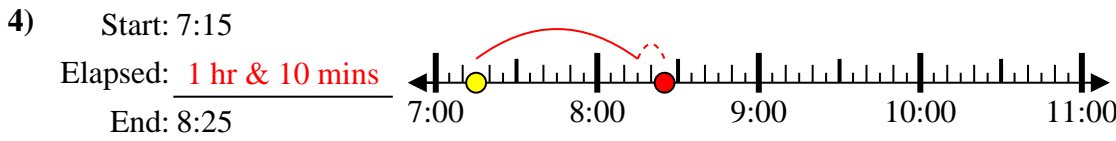
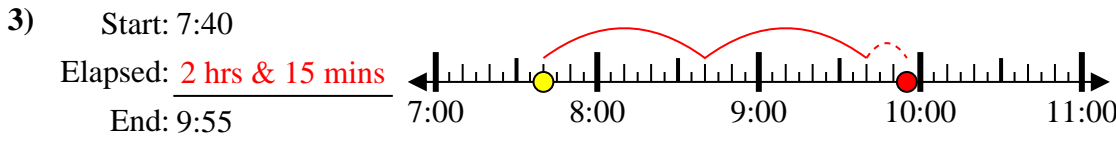
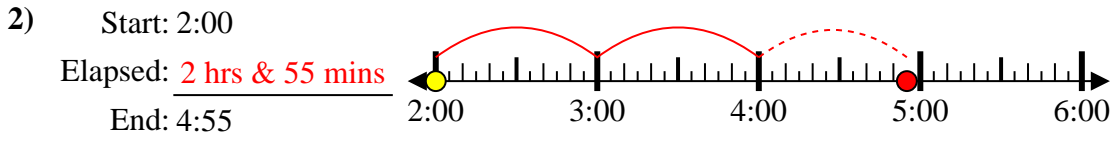
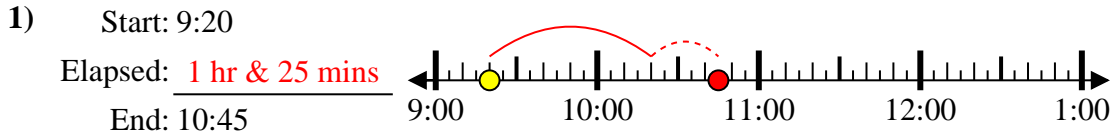
End: 1:35



8. _____



Solve each problem.



Answers

1. 1 hr & 25 mins
2. 2 hrs & 55 mins
3. 2 hrs & 15 mins
4. 1 hr & 10 mins
5. 2 hrs & 25 mins
6. 1 hr & 25 mins
7. 2 hrs & 40 mins
8. 1 hr & 20 mins