



Use the visual model to solve each problem.

Answers

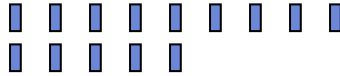
1) There are 13 stars below.



If you were to take away 1, how many would be left?

$13 - 1 = ?$

2) There are 14 rectangles below.



If you were to take away 13, how many would be left?

$14 - 13 = ?$


3) There are 5 stars below.



If you were to take away 2, how many would be left?

$5 - 2 = ?$

4) There are 10 triangles below.



If you were to take away 3, how many would be left?

$10 - 3 = ?$

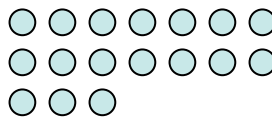
5) There are 3 stars below.



If you were to take away 2, how many would be left?

$3 - 2 = ?$

6) There are 17 circles below.



If you were to take away 4, how many would be left?

$17 - 4 = ?$

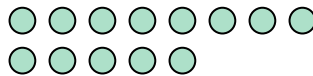
7) There are 5 pentagons below.



If you were to take away 4, how many would be left?

$5 - 4 = ?$

8) There are 13 circles below.



If you were to take away 12, how many would be left?

$13 - 12 = ?$

9) There are 2 circles below.



If you were to take away 1, how many would be left?

$2 - 1 = ?$

10) There are 12 stars below.



If you were to take away 5, how many would be left?

$12 - 5 = ?$

- 1. _____
- 2. _____
- 3. _____
- 4. _____
- 5. _____
- 6. _____
- 7. _____
- 8. _____
- 9. _____
- 10. _____



Use the visual model to solve each problem.

- 1) There are 13 stars below.
 ☆ ☆ ☆ ☆ ☆ ☆ ☆ ☆ ☆
 ☆ ☆ ☆ ☆ ☆

If you were to take away 1, how many would be left?
 $13 - 1 = ?$

- 2) There are 14 rectangles below.
 ▮ ▮ ▮ ▮ ▮ ▮ ▮ ▮ ▮ ▮
 ▮ ▮ ▮ ▮ ▮

If you were to take away 13, how many would be left?
 $14 - 13 = ?$

- 3) There are 5 stars below.
 ☆ ☆ ☆ ☆ ☆

If you were to take away 2, how many would be left?
 $5 - 2 = ?$

- 4) There are 10 triangles below.
 ▲ ▲ ▲ ▲ ▲ ▲ ▲ ▲ ▲ ▲
 ▲

If you were to take away 3, how many would be left?
 $10 - 3 = ?$

- 5) There are 3 stars below.
 ☆ ☆ ☆

If you were to take away 2, how many would be left?
 $3 - 2 = ?$

- 6) There are 17 circles below.
 ○ ○ ○ ○ ○ ○ ○ ○
 ○ ○ ○ ○ ○ ○ ○ ○
 ○ ○ ○

If you were to take away 4, how many would be left?
 $17 - 4 = ?$

- 7) There are 5 pentagons below.
 ⬠ ⬠ ⬠ ⬠ ⬠

If you were to take away 4, how many would be left?
 $5 - 4 = ?$

- 8) There are 13 circles below.
 ○ ○ ○ ○ ○ ○ ○ ○ ○
 ○ ○ ○ ○ ○ ○

If you were to take away 12, how many would be left?
 $13 - 12 = ?$

- 9) There are 2 circles below.
 ○ ○

If you were to take away 1, how many would be left?
 $2 - 1 = ?$

- 10) There are 12 stars below.
 ☆ ☆ ☆ ☆ ☆ ☆ ☆ ☆ ☆ ☆
 ☆ ☆ ☆

If you were to take away 5, how many would be left?
 $12 - 5 = ?$

Answers

1. 12
 2. 1
 3. 3
 4. 7
 5. 1
 6. 13
 7. 1
 8. 1
 9. 1
 10. 7