



Use the visual model to solve each problem.

Answers

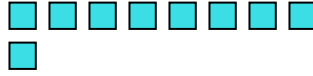
1) There are 6 hexagons below.



If you were to take away 1, how many would be left?

$6 - 1 = ?$

2) There are 9 squares below.



If you were to take away 7, how many would be left?

$9 - 7 = ?$

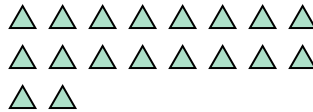
3) There are 2 circles below.



If you were to take away 1, how many would be left?

$2 - 1 = ?$

4) There are 18 triangles below.



If you were to take away 5, how many would be left?

$18 - 5 = ?$

5) There are 5 rectangles below.



If you were to take away 4, how many would be left?

$5 - 4 = ?$


6) There are 3 stars below.



If you were to take away 1, how many would be left?

$3 - 1 = ?$

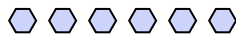
7) There are 20 squares below.



If you were to take away 16, how many would be left?

$20 - 16 = ?$

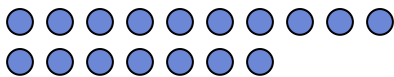
8) There are 6 hexagons below.



If you were to take away 4, how many would be left?

$6 - 4 = ?$

9) There are 17 circles below.



If you were to take away 10, how many would be left?

$17 - 10 = ?$

10) There are 7 rectangles below.



If you were to take away 6, how many would be left?

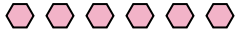
$7 - 6 = ?$

- 1. _____
- 2. _____
- 3. _____
- 4. _____
- 5. _____
- 6. _____
- 7. _____
- 8. _____
- 9. _____
- 10. _____



Use the visual model to solve each problem.

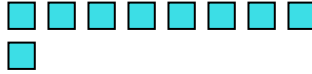
1) There are 6 hexagons below.



If you were to take away 1, how many would be left?

$6 - 1 = ?$

2) There are 9 squares below.



If you were to take away 7, how many would be left?

$9 - 7 = ?$

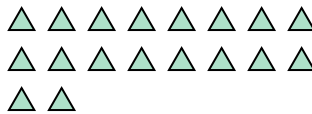
3) There are 2 circles below.



If you were to take away 1, how many would be left?

$2 - 1 = ?$

4) There are 18 triangles below.



If you were to take away 5, how many would be left?

$18 - 5 = ?$

5) There are 5 rectangles below.



If you were to take away 4, how many would be left?

$5 - 4 = ?$

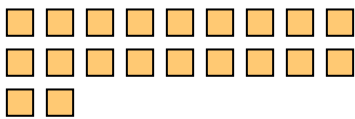
6) There are 3 stars below.



If you were to take away 1, how many would be left?

$3 - 1 = ?$

7) There are 20 squares below.



If you were to take away 16, how many would be left?

$20 - 16 = ?$

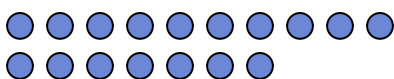
8) There are 6 hexagons below.



If you were to take away 4, how many would be left?

$6 - 4 = ?$

9) There are 17 circles below.



If you were to take away 10, how many would be left?

$17 - 10 = ?$

10) There are 7 rectangles below.



If you were to take away 6, how many would be left?

$7 - 6 = ?$

Answers

1. 5

2. 2

3. 1

4. 13

5. 1

6. 2

7. 4

8. 2

9. 7

10. 1