




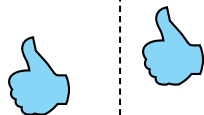
Determine if the shape is translating (slide), rotating (turn) or reflecting (flip).

Answers

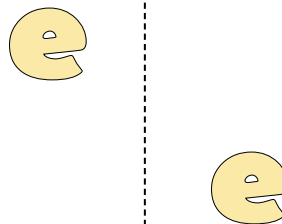
1)



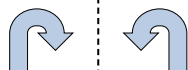
2)



3)




4)



5)



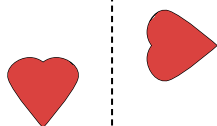
6)



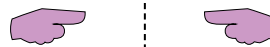
7)



8)




9)




10)



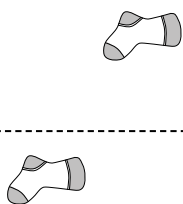
11)



12)



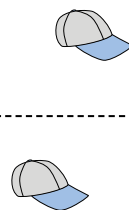
13)



14)



15)

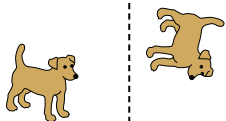


1. _____
2. _____
3. _____
4. _____
5. _____
6. _____
7. _____
8. _____
9. _____
10. _____
11. _____
12. _____
13. _____
14. _____
15. _____

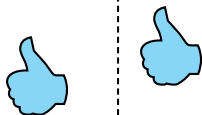


Determine if the shape is translating (slide), rotating (turn) or reflecting (flip).

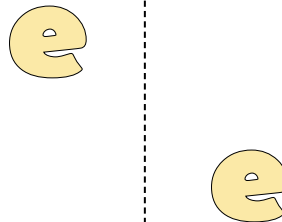
1)



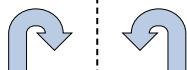
2)




3)




4)



5)



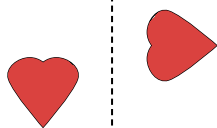
6)



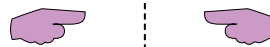
7)



8)




9)




10)



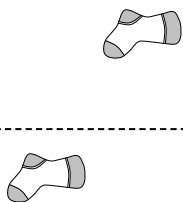
11)



12)



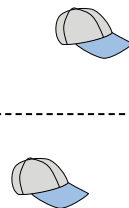
13)



14)



15)



Answers

1. rotating
2. translating
3. translating
4. reflecting
5. translating
6. rotating
7. rotating
8. rotating
9. reflecting
10. reflecting
11. reflecting
12. reflecting
13. translating
14. translating
15. translating