




Determine if the shape is translating (slide), rotating (turn) or reflecting (flip).

Answers

1)



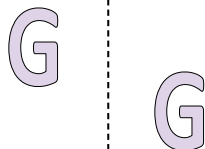
2)



3)



4)



5)



6)



7)



8)



9)



10)



11)



12)



13)



14)



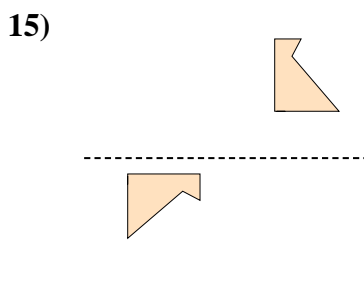
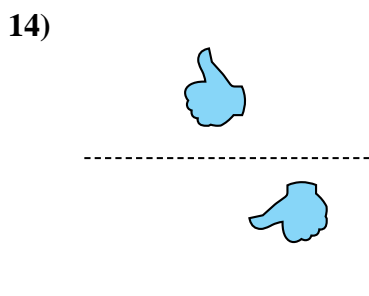
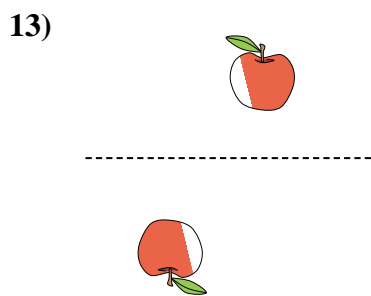
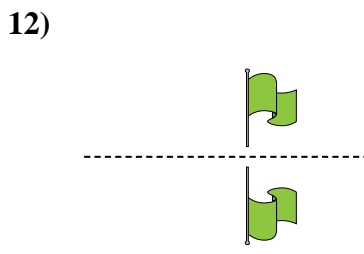
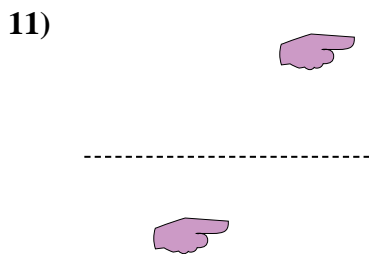
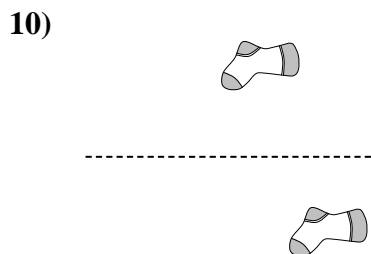
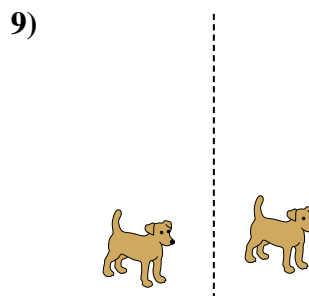
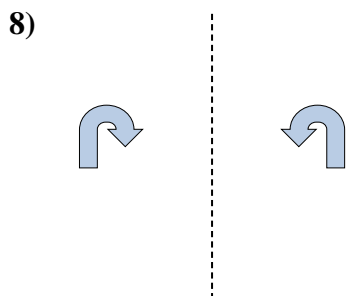
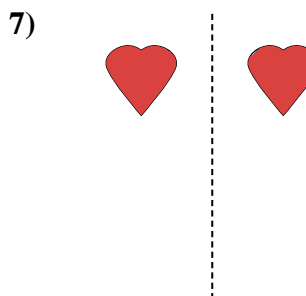
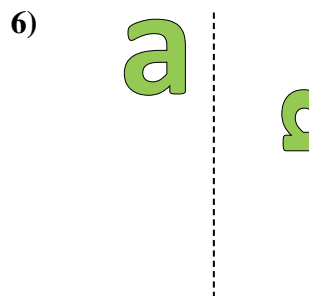
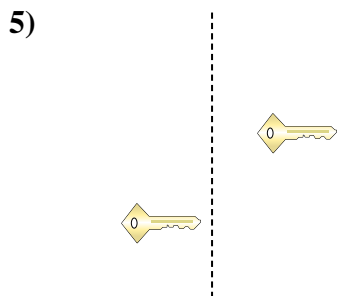
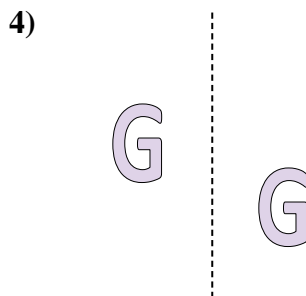
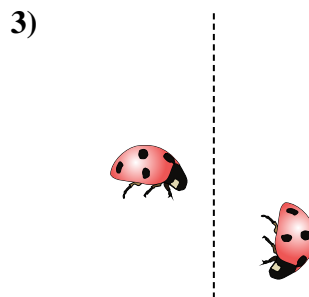
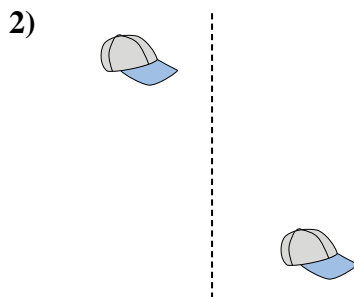
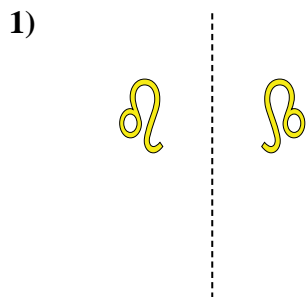
15)



1. _____
2. _____
3. _____
4. _____
5. _____
6. _____
7. _____
8. _____
9. _____
10. _____
11. _____
12. _____
13. _____
14. _____
15. _____



Determine if the shape is translating (slide), rotating (turn) or reflecting (flip).



Answers

1. reflecting
2. translating
3. rotating
4. translating
5. translating
6. rotating
7. reflecting
8. reflecting
9. translating
10. translating
11. translating
12. reflecting
13. rotating
14. rotating
15. rotating