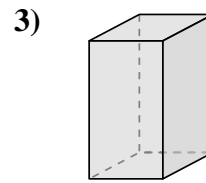
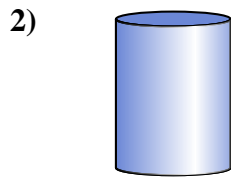
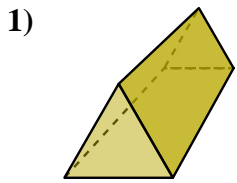




Determine which choice BEST describes the shape shown.

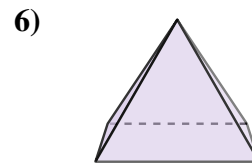
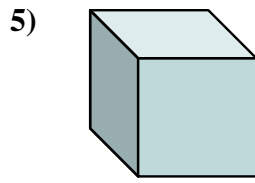
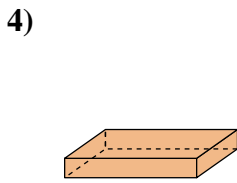
Answers



- A. triangular prism
- B. cube
- C. rectangular prism
- D. rectangular pyramid

- A. rectangular pyramid
- B. triangular prism
- C. rectangular prism
- D. cylinder

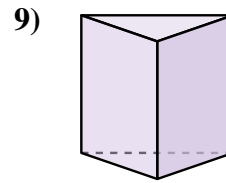
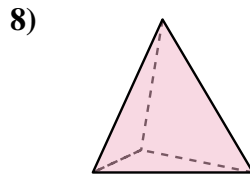

- A. sphere
- B. rectangular prism
- C. cone
- D. triangular pyramid



- A. cone
- B. triangular pyramid
- C. rectangular prism
- D. cylinder

- A. cone
- B. sphere
- C. cube
- D. triangular prism

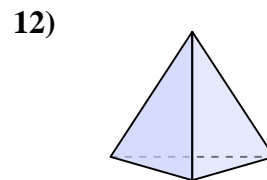
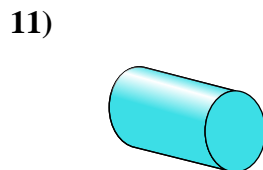
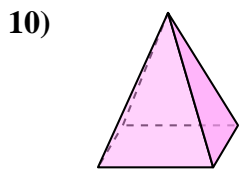
- A. rectangular pyramid
- B. cone
- C. triangular prism
- D. cube



- A. rectangular prism
- B. triangular prism
- C. rectangular pyramid
- D. sphere

- A. cylinder
- B. cone
- C. cube
- D. triangular pyramid

- A. rectangular prism
- B. sphere
- C. cylinder
- D. triangular prism



- A. rectangular pyramid
- B. triangular pyramid
- C. cone
- D. cube

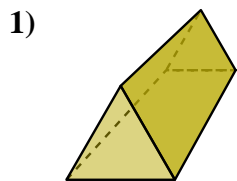
- A. rectangular pyramid
- B. cone
- C. cylinder
- D. triangular prism

- A. cube
- B. cone
- C. cylinder
- D. triangular pyramid

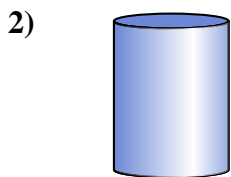
- 1. _____
- 2. _____
- 3. _____
- 4. _____
- 5. _____
- 6. _____
- 7. _____
- 8. _____
- 9. _____
- 10. _____
- 11. _____
- 12. _____



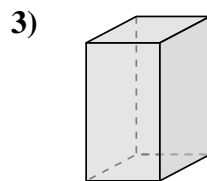
Determine which choice BEST describes the shape shown.



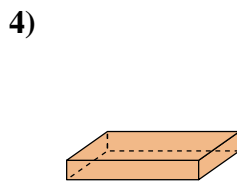
- A. triangular prism
- B. cube
- C. rectangular prism
- D. rectangular pyramid



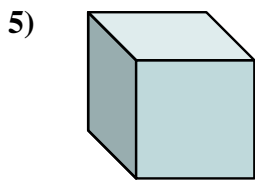
- A. rectangular pyramid
- B. triangular prism
- C. rectangular prism
- D. cylinder



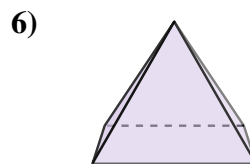
- A. sphere
- B. rectangular prism
- C. cone
- D. triangular pyramid




- A. cone
- B. triangular pyramid
- C. rectangular prism
- D. cylinder



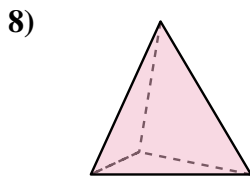
- A. cone
- B. sphere
- C. cube
- D. triangular prism



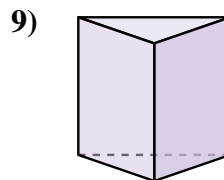
- A. rectangular pyramid
- B. cone
- C. triangular prism
- D. cube



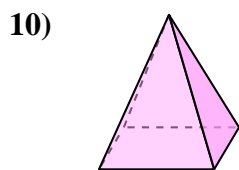
- A. rectangular prism
- B. triangular prism
- C. rectangular pyramid
- D. sphere



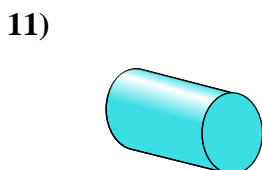
- A. cylinder
- B. cone
- C. cube
- D. triangular pyramid



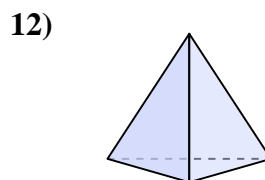
- A. rectangular prism
- B. sphere
- C. cylinder
- D. triangular prism



- A. rectangular pyramid
- B. triangular pyramid
- C. cone
- D. cube



- A. rectangular pyramid
- B. cone
- C. cylinder
- D. triangular prism



- A. cube
- B. cone
- C. cylinder
- D. triangular pyramid

Answers

- 1. **A**
- 2. **D**
- 3. **B**
- 4. **C**
- 5. **C**
- 6. **A**
- 7. **D**
- 8. **D**
- 9. **D**
- 10. **A**
- 11. **C**
- 12. **D**