



Determine if the shapes shown are 'similar', 'congruent' or 'neither'.

Answers

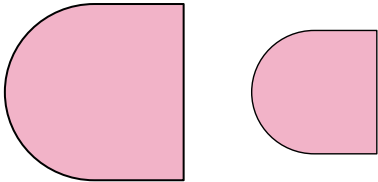
1)



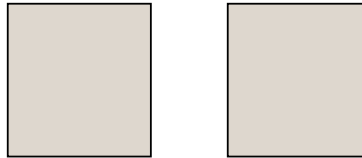
2)




3)



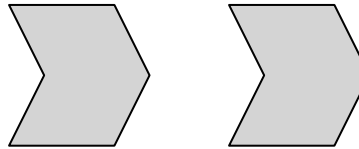
4)




5)



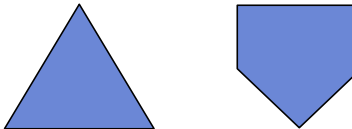
6)



7)



8)



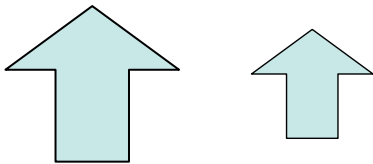
9)



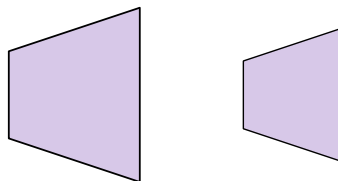
10)



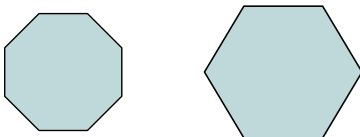
11)



12)



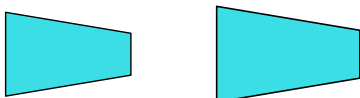
13)



14)



15)



16)



1. _____
2. _____
3. _____
4. _____
5. _____
6. _____
7. _____
8. _____
9. _____
10. _____
11. _____
12. _____
13. _____
14. _____
15. _____
16. _____




Determine if the shapes shown are 'similar', 'congruent' or 'neither'.

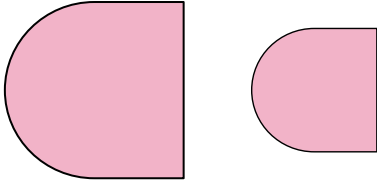
1)



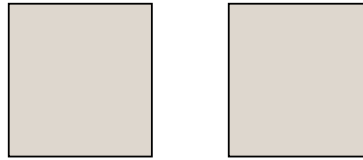
2)




3)



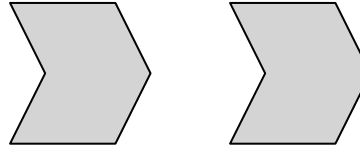
4)




5)



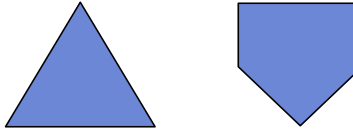
6)



7)



8)



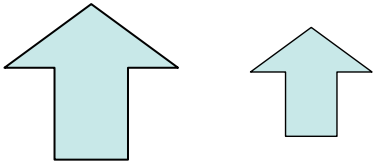
9)



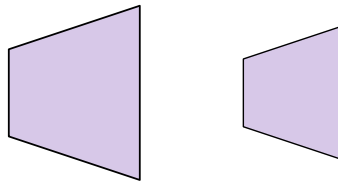
10)



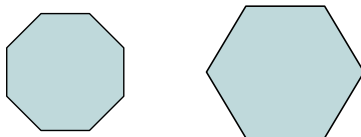
11)



12)



13)



14)



15)



16)



Answers

1. similar

2. similar

3. similar

4. congruent

5. neither

6. congruent

7. neither

8. neither

9. neither

10. congruent

11. similar

12. similar

13. neither

14. congruent

15. similar

16. neither