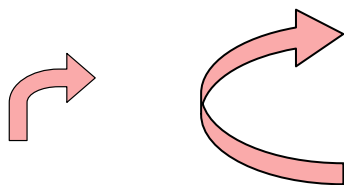




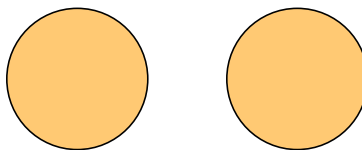
Determine if the shapes shown are 'similar', 'congruent' or 'neither'.

Answers

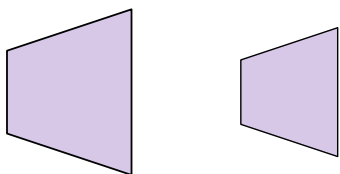
1)



2)



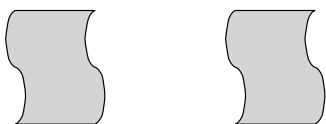
3)



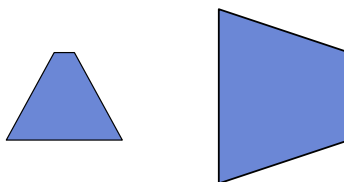
4)



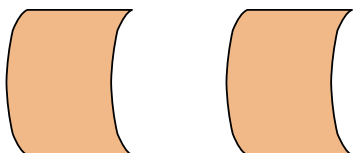
5)



6)



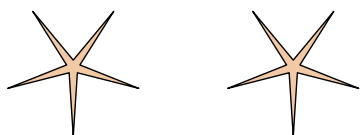
7)



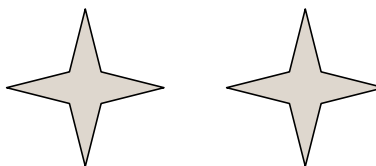
8)



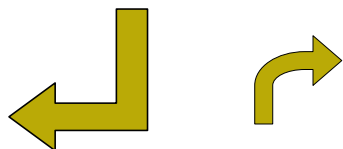
9)



10)



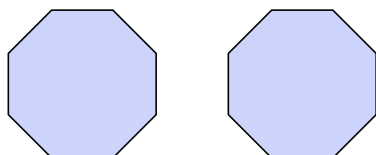
11)



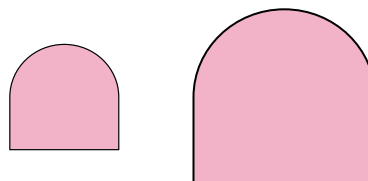
12)



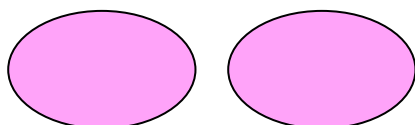
13)



14)



15)



16)



1. _____

2. _____

3. _____

4. _____

5. _____

6. _____

7. _____

8. _____

9. _____

10. _____

11. _____

12. _____

13. _____

14. _____

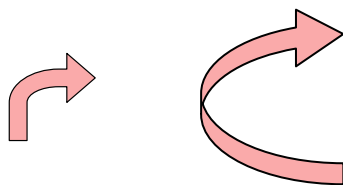
15. _____

16. _____

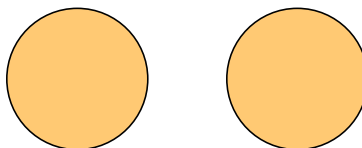


Determine if the shapes shown are 'similar', 'congruent' or 'neither'.

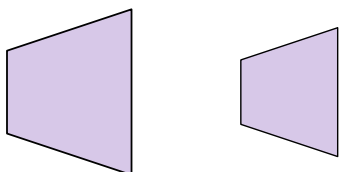
1)



2)



3)



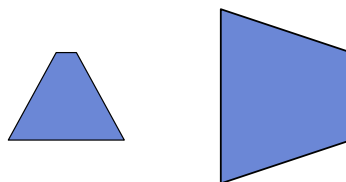
4)



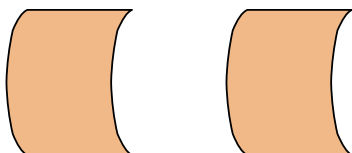
5)



6)



7)



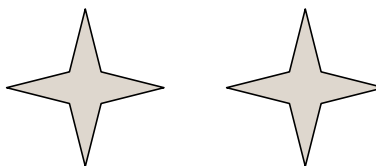
8)



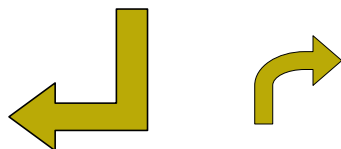
9)



10)



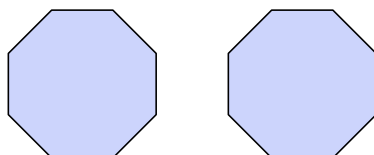
11)



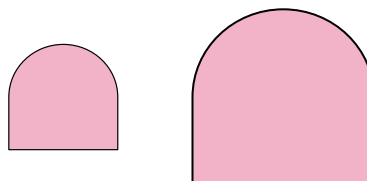
12)



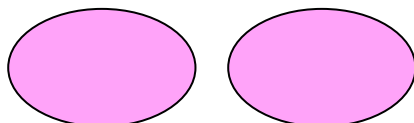
13)



14)



15)



16)

**Answers**

1. neither
2. congruent
3. similar
4. neither
5. congruent
6. neither
7. congruent
8. similar
9. congruent
10. congruent
11. neither
12. neither
13. congruent
14. similar
15. congruent
16. similar