



Use the numberlines to round each number to the nearest 100.

Ex)

4,028



Ex. 4,000

1)

905



1. _____

2)

4,915



2. _____

3)

984



3. _____

4)

6,410



4. _____

5)

43,902



5. _____

6)

20,088



6. _____

7)

59,370



7. _____

8)

815



8. _____

9)

38,901



9. _____

10)

4,908



10. _____

Answers

Ex. 4,000

1. _____

2. _____

3. _____

4. _____

5. _____

6. _____

7. _____

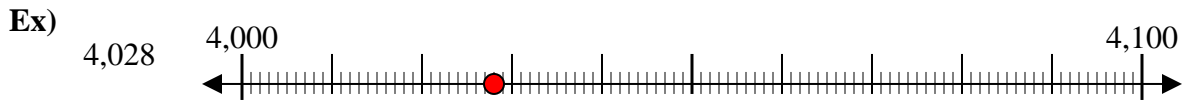
8. _____

9. _____

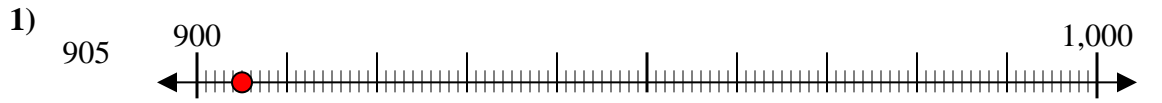
10. _____



Use the numberlines to round each number to the nearest 100.



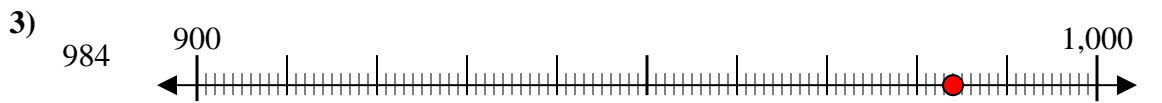
Answers
Ex. 4,000



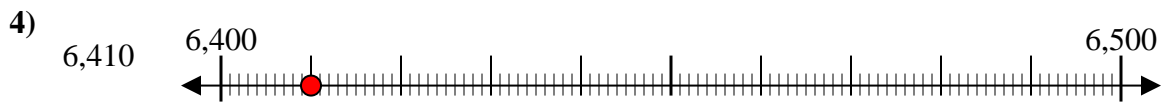
1. 900



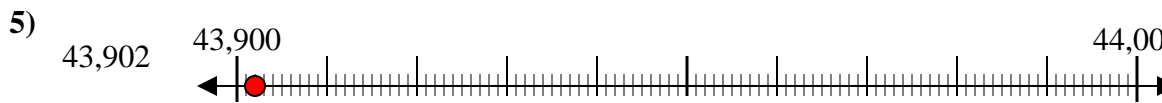
2. 4,900



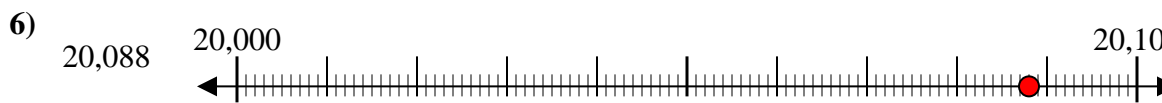
3. 1,000



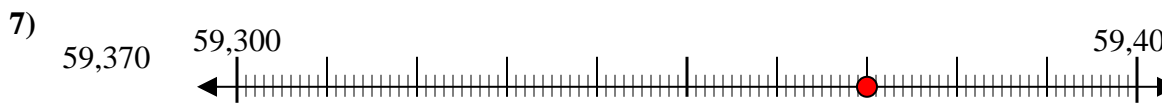
4. 6,400



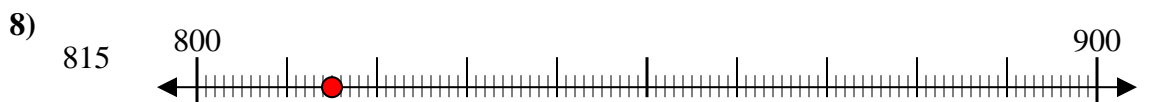
5. 43,900



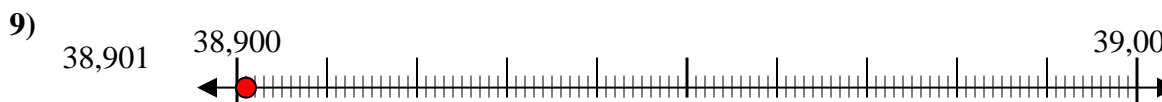
6. 20,100



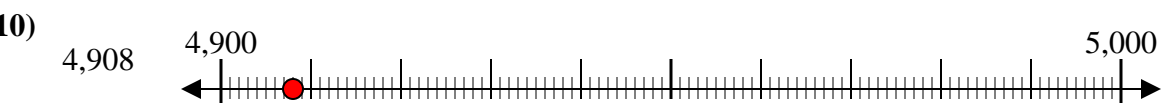
7. 59,400



8. 800



9. 38,900



10. 4,900