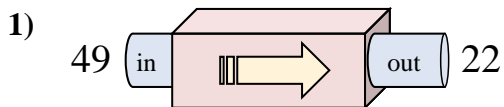


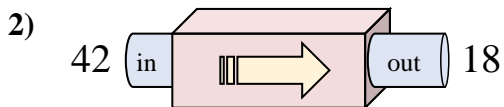


Determine which rule the function machine is using.

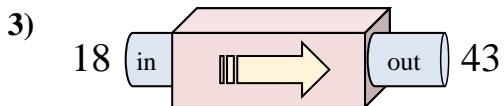
Answers



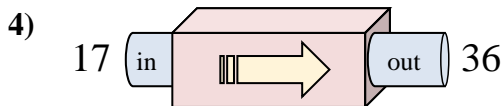
- A. Add 25
- B. Subtract 28
- C. Add 30
- D. Subtract 27



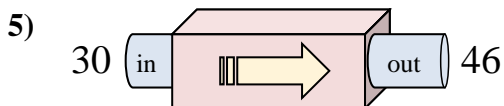
- A. Subtract 23
- B. Subtract 29
- C. Subtract 21
- D. Subtract 24



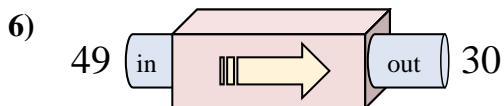
- A. Add 28
- B. Subtract 25
- C. Subtract 23
- D. Add 25



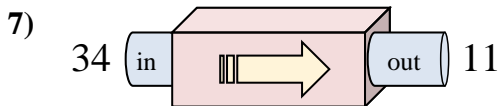
- A. Add 19
- B. Subtract 24
- C. Add 16
- D. Add 23



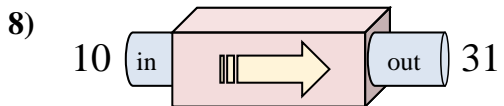
- A. Subtract 21
- B. Subtract 16
- C. Add 19
- D. Add 16



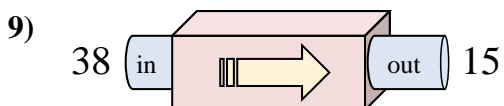
- A. Subtract 19
- B. Subtract 20
- C. Add 18
- D. Subtract 24



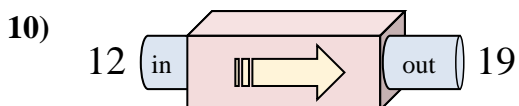
- A. Subtract 25
- B. Subtract 23
- C. Subtract 18
- D. Subtract 21



- A. Subtract 22
- B. Add 18
- C. Add 21
- D. Add 16



- A. Subtract 23
- B. Add 28
- C. Add 18
- D. Subtract 22

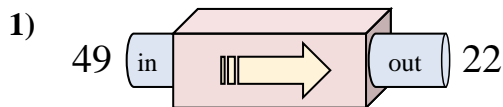


- A. Subtract 10
- B. Add 12
- C. Add 7
- D. Add 6

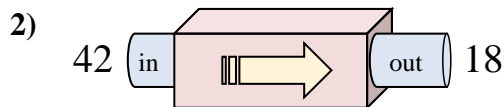
1. _____
2. _____
3. _____
4. _____
5. _____
6. _____
7. _____
8. _____
9. _____
10. _____



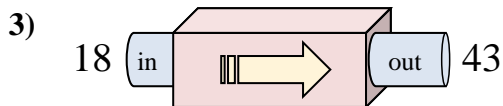
Determine which rule the function machine is using.



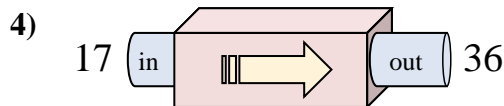
- A. Add 25
- B. Subtract 28
- C. Add 30
- D. Subtract 27



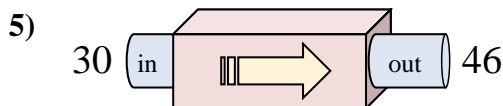
- A. Subtract 23
- B. Subtract 29
- C. Subtract 21
- D. Subtract 24



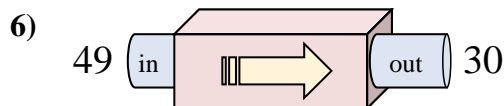
- A. Add 28
- B. Subtract 25
- C. Subtract 23
- D. Add 25



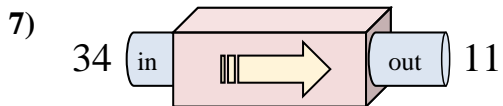
- A. Add 19
- B. Subtract 24
- C. Add 16
- D. Add 23



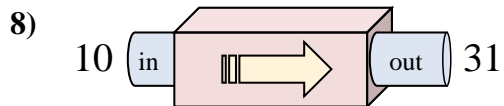
- A. Subtract 21
- B. Subtract 16
- C. Add 19
- D. Add 16



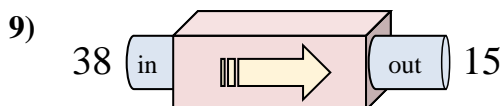
- A. Subtract 19
- B. Subtract 20
- C. Add 18
- D. Subtract 24



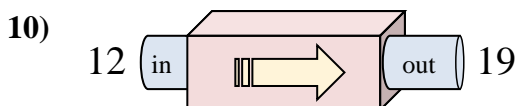
- A. Subtract 25
- B. Subtract 23
- C. Subtract 18
- D. Subtract 21



- A. Subtract 22
- B. Add 18
- C. Add 21
- D. Add 16



- A. Subtract 23
- B. Add 28
- C. Add 18
- D. Subtract 22



- A. Subtract 10
- B. Add 12
- C. Add 7
- D. Add 6

Answers

- 1. **D**
- 2. **D**
- 3. **D**
- 4. **A**
- 5. **D**
- 6. **A**
- 7. **B**
- 8. **C**
- 9. **A**
- 10. **C**