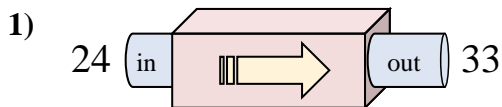


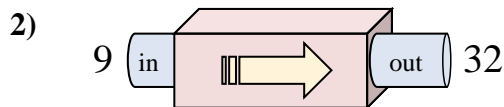


Determine which rule the function machine is using.

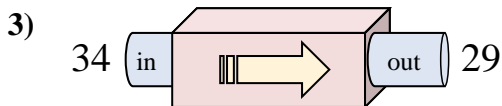
**Answers**



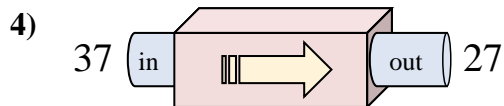
- A. Add 12
- B. Subtract 8
- C. Add 13
- D. Add 9



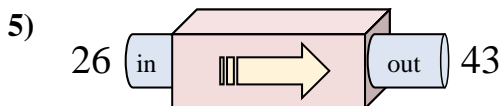
- A. Add 25
- B. Add 23
- C. Add 26
- D. Subtract 19



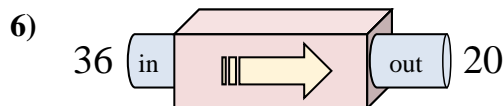
- A. Add 7
- B. Subtract 5
- C. Subtract 6
- D. Add 3



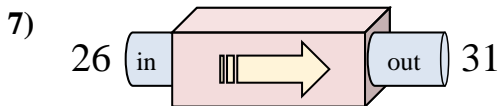
- A. Add 13
- B. Subtract 10
- C. Subtract 15
- D. Subtract 13



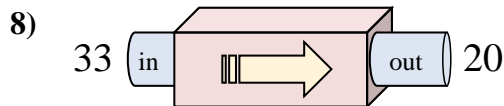
- A. Add 14
- B. Subtract 22
- C. Add 15
- D. Add 17



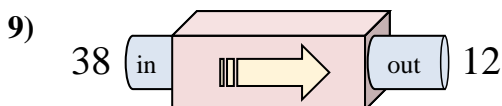
- A. Subtract 16
- B. Add 19
- C. Add 21
- D. Subtract 17



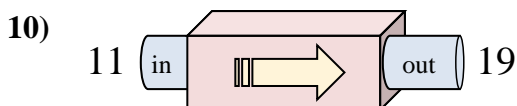
- A. Add 5
- B. Subtract 7
- C. Add 7
- D. Subtract 4



- A. Subtract 16
- B. Add 16
- C. Subtract 8
- D. Subtract 13



- A. Subtract 29
- B. Subtract 30
- C. Subtract 26
- D. Add 21

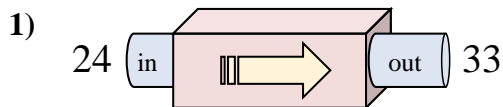


- A. Add 8
- B. Add 9
- C. Subtract 13
- D. Add 5

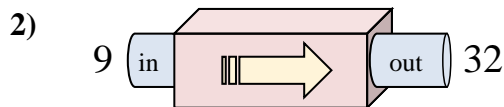
1. \_\_\_\_\_
2. \_\_\_\_\_
3. \_\_\_\_\_
4. \_\_\_\_\_
5. \_\_\_\_\_
6. \_\_\_\_\_
7. \_\_\_\_\_
8. \_\_\_\_\_
9. \_\_\_\_\_
10. \_\_\_\_\_



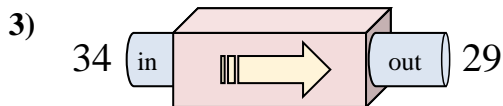
Determine which rule the function machine is using.



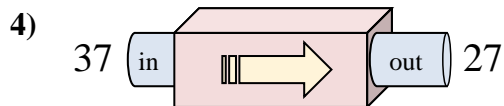
- A. Add 12
- B. Subtract 8
- C. Add 13
- D. Add 9



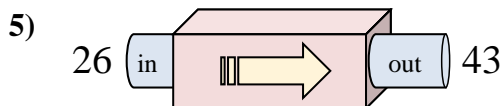
- A. Add 25
- B. Add 23
- C. Add 26
- D. Subtract 19



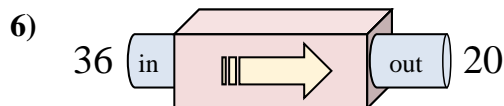
- A. Add 7
- B. Subtract 5
- C. Subtract 6
- D. Add 3



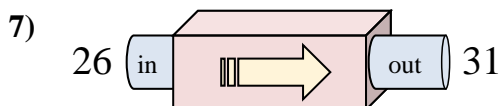
- A. Add 13
- B. Subtract 10
- C. Subtract 15
- D. Subtract 13



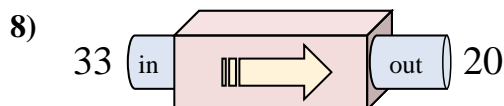
- A. Add 14
- B. Subtract 22
- C. Add 15
- D. Add 17



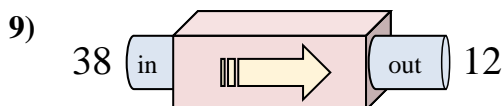
- A. Subtract 16
- B. Add 19
- C. Add 21
- D. Subtract 17



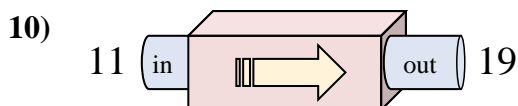
- A. Add 5
- B. Subtract 7
- C. Add 7
- D. Subtract 4



- A. Subtract 16
- B. Add 16
- C. Subtract 8
- D. Subtract 13



- A. Subtract 29
- B. Subtract 30
- C. Subtract 26
- D. Add 21



- A. Add 8
- B. Add 9
- C. Subtract 13
- D. Add 5

**Answers**

- 1. **D**
- 2. **B**
- 3. **B**
- 4. **B**
- 5. **D**
- 6. **A**
- 7. **A**
- 8. **D**
- 9. **C**
- 10. **A**