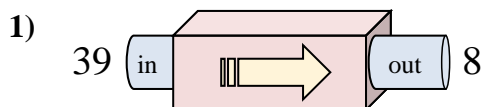
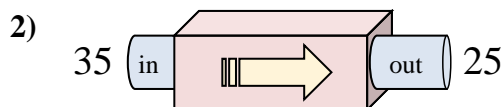




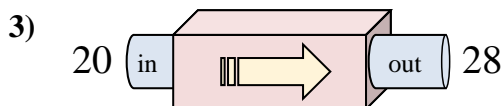
Determine which rule the function machine is using.

Answers

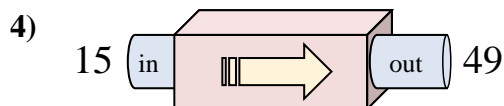
- A. Subtract 34
- B. Add 28
- C. Add 26
- D. Subtract 31



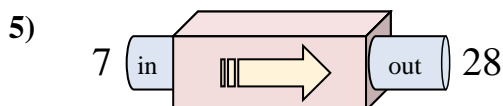
- A. Subtract 6
- B. Subtract 14
- C. Subtract 10
- D. Add 9



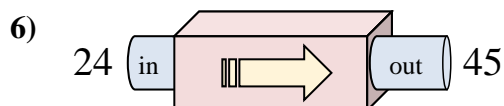
- A. Add 3
- B. Add 4
- C. Add 9
- D. Add 8



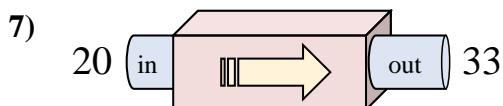
- A. Subtract 36
- B. Add 29
- C. Add 34
- D. Add 31



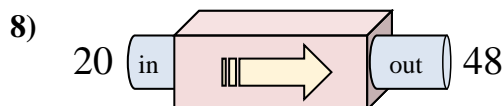
- A. Subtract 20
- B. Add 23
- C. Add 20
- D. Add 21



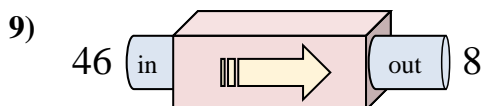
- A. Add 17
- B. Subtract 22
- C. Add 18
- D. Add 21



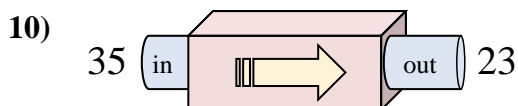
- A. Add 9
- B. Add 15
- C. Add 17
- D. Add 13



- A. Add 28
- B. Subtract 27
- C. Add 25
- D. Add 29



- A. Subtract 42
- B. Subtract 40
- C. Add 34
- D. Subtract 38

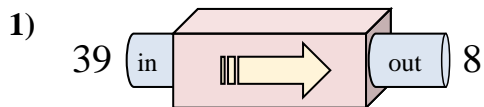


- A. Subtract 10
- B. Subtract 12
- C. Add 17
- D. Add 8

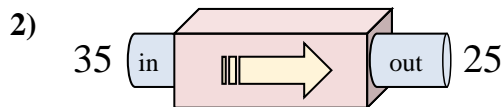
1. _____
2. _____
3. _____
4. _____
5. _____
6. _____
7. _____
8. _____
9. _____
10. _____



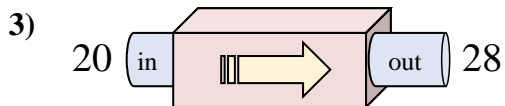
Determine which rule the function machine is using.



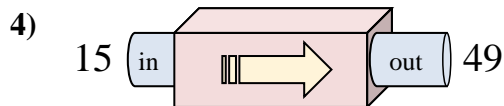
- A. Subtract 34
- B. Add 28
- C. Add 26
- D. Subtract 31



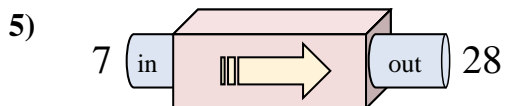
- A. Subtract 6
- B. Subtract 14
- C. Subtract 10
- D. Add 9



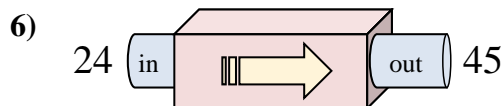
- A. Add 3
- B. Add 4
- C. Add 9
- D. Add 8



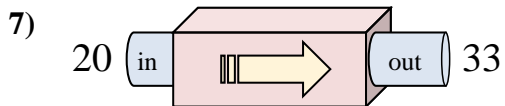
- A. Subtract 36
- B. Add 29
- C. Add 34
- D. Add 31



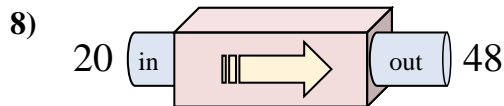
- A. Subtract 20
- B. Add 23
- C. Add 20
- D. Add 21



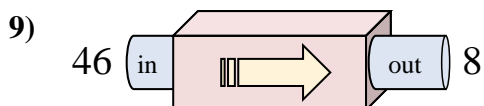
- A. Add 17
- B. Subtract 22
- C. Add 18
- D. Add 21



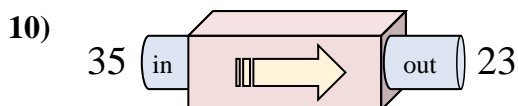
- A. Add 9
- B. Add 15
- C. Add 17
- D. Add 13



- A. Add 28
- B. Subtract 27
- C. Add 25
- D. Add 29



- A. Subtract 42
- B. Subtract 40
- C. Add 34
- D. Subtract 38



- A. Subtract 10
- B. Subtract 12
- C. Add 17
- D. Add 8

Answers

- 1. **D**
- 2. **C**
- 3. **D**
- 4. **C**
- 5. **D**
- 6. **D**
- 7. **D**
- 8. **A**
- 9. **D**
- 10. **B**