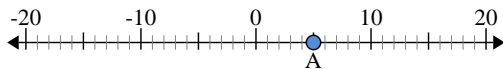




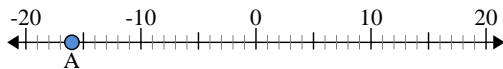
Use the numberlines to find the absolute value.

1) a. What is the value of 'A'?



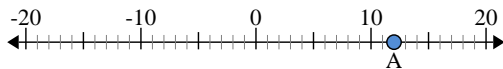
b. How far is 'A' from 0 (absolute value)?

2) a. What is the value of 'A'?



b. How far is 'A' from 0 (absolute value)?

3) a. What is the value of 'A'?



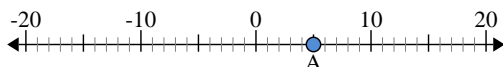
Answers

1. _____
2. _____
3. _____
4. _____
5. _____
6. _____
7. _____
8. _____
9. _____
10. _____



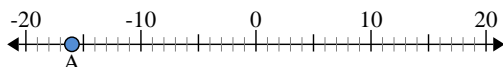
Use the numberlines to find the absolute value.

1) a. What is the value of 'A'?



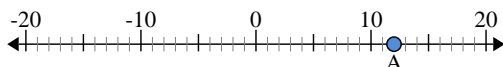
b. How far is 'A' from 0 (absolute value)?

2) a. What is the value of 'A'?



b. How far is 'A' from 0 (absolute value)?

3) a. What is the value of 'A'?



Answers

1. 5 5

2. -16 16

3. 12 12

4. 6 6

5. -7 7

6. 8 8

7. -11 11

8. -20 20

9. -2 2

10. 0 0