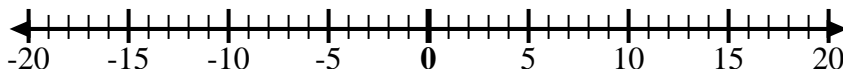




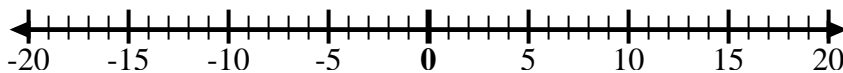
Use the numberlines to show each expression and solve.

Ex) Start at -9 and add 5



Ex.  $-9 + 5 = -4$

1) Start at -10 and add 14



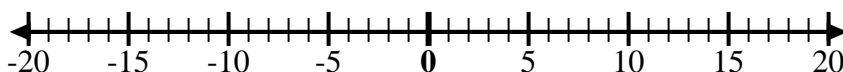
1. \_\_\_\_\_

2) Start at 3 and add -10



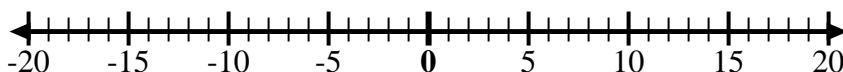
2. \_\_\_\_\_

3) Start at 7 and add -6



3. \_\_\_\_\_

4) Start at -8 and add -2



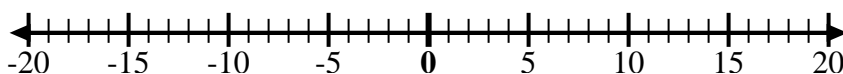
4. \_\_\_\_\_

5) Start at 5 and add -9



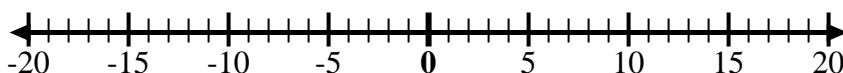
5. \_\_\_\_\_

6) Start at -5 and add 4



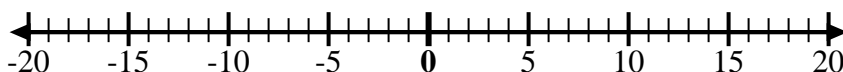
6. \_\_\_\_\_

7) Start at -6 and add 9



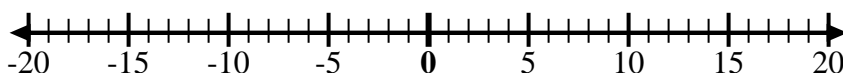
7. \_\_\_\_\_

8) Start at -4 and add 14



8. \_\_\_\_\_

9) Start at -4 and add -3



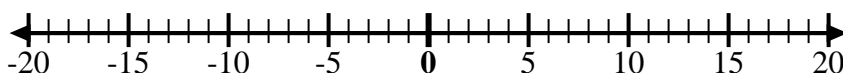
9. \_\_\_\_\_

10) Start at -7 and add -2



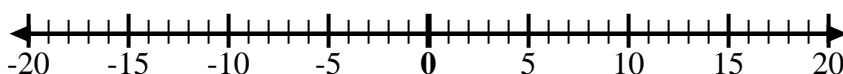
10. \_\_\_\_\_

11) Start at 0 and add -7



11. \_\_\_\_\_

12) Start at -2 and add -2



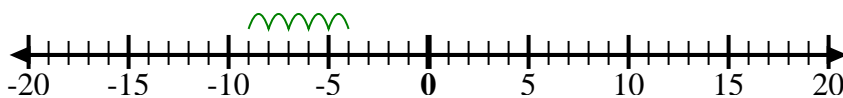
12. \_\_\_\_\_

Answers



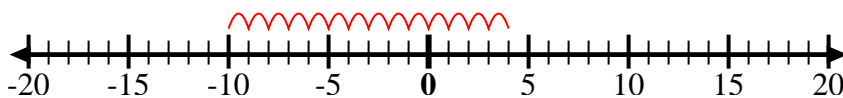
Use the numberlines to show each expression and solve.

Ex) Start at -9 and add 5



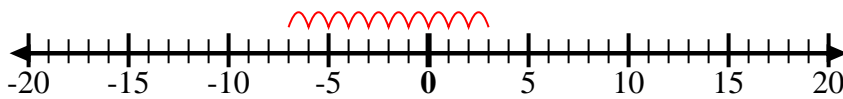
Ex.  $-9 + 5 = -4$

1) Start at -10 and add 14



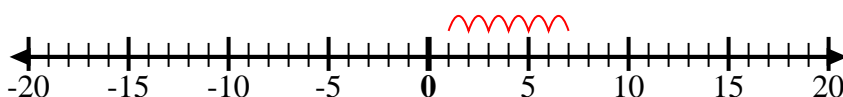
1.  $-10 + 14 = 4$

2) Start at 3 and add -10



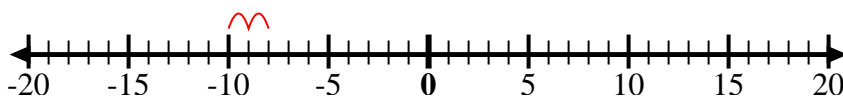
2.  $3 + -10 = -7$

3) Start at 7 and add -6



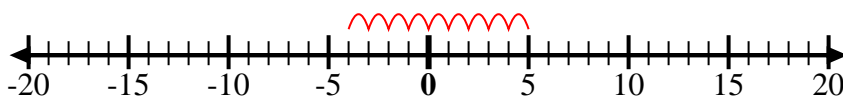
3.  $7 + -6 = 1$

4) Start at -8 and add -2



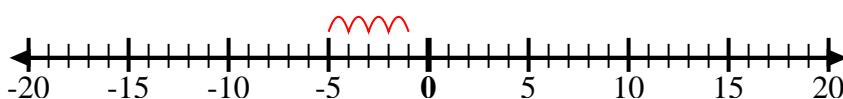
4.  $-8 + -2 = -10$

5) Start at 5 and add -9



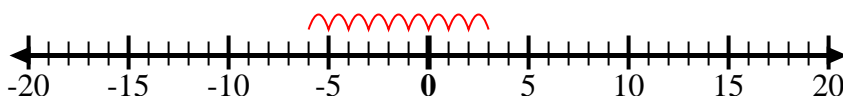
5.  $5 + -9 = -4$

6) Start at -5 and add 4



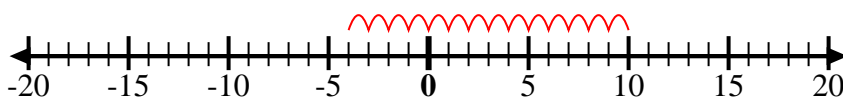
6.  $-5 + 4 = -1$

7) Start at -6 and add 9



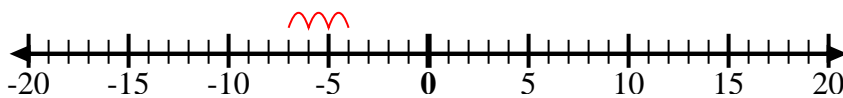
7.  $-6 + 9 = 3$

8) Start at -4 and add 14



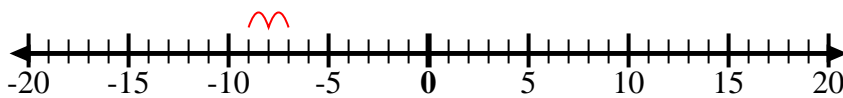
8.  $-4 + 14 = 10$

9) Start at -4 and add -3



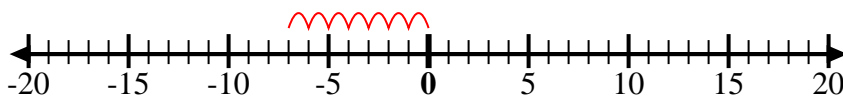
9.  $-4 + -3 = -7$

10) Start at -7 and add -2



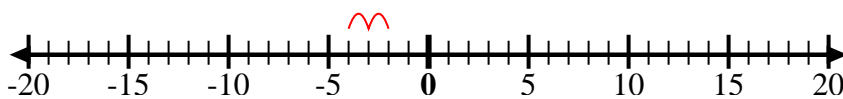
10.  $-7 + -2 = -9$

11) Start at 0 and add -7



11.  $0 + -7 = -7$

12) Start at -2 and add -2



12.  $-2 + -2 = -4$

**Answers**