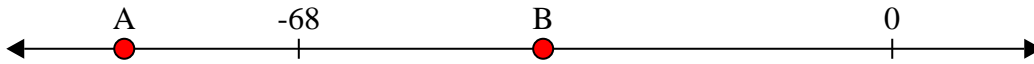




Solve each problem.


Answers

1) Which letter best shows -40?




1. _____

2) Which letter best shows -40?




2. _____

3) Which letter best shows -30?




3. _____

4) Which letter best shows -24?



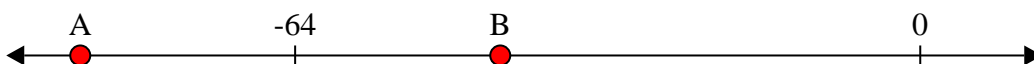
4. _____

5) Which letter best shows -27?




5. _____

6) Which letter best shows -43?



6. _____

7) Which letter best shows -90?




7. _____

8) Which letter best shows -39?




8. _____

9) Which letter best shows -19?



9. _____

10) Which letter best shows -90?

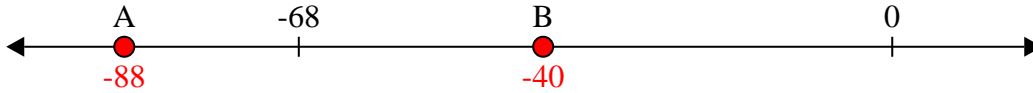


10. _____

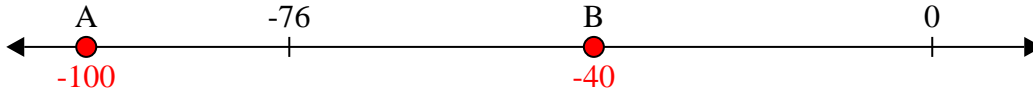


Solve each problem.

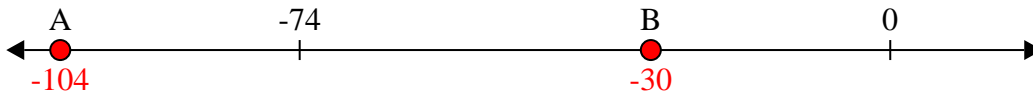
1) Which letter best shows -40?




2) Which letter best shows -40?




3) Which letter best shows -30?



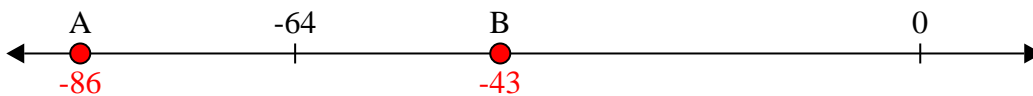
4) Which letter best shows -24?



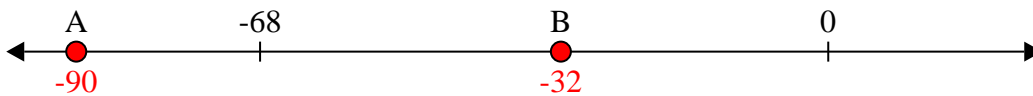
5) Which letter best shows -27?



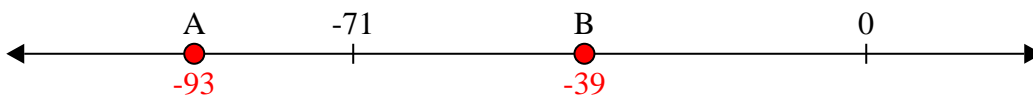
6) Which letter best shows -43?



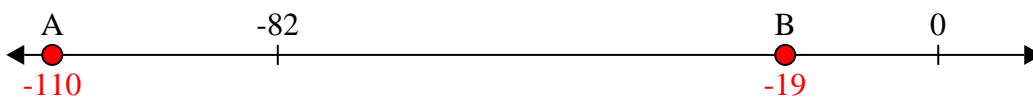
7) Which letter best shows -90?



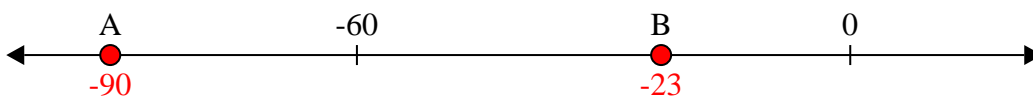
8) Which letter best shows -39?



9) Which letter best shows -19?



10) Which letter best shows -90?



Answers

- 1. **B**
- 2. **B**
- 3. **B**
- 4. **B**
- 5. **B**
- 6. **B**
- 7. **A**
- 8. **B**
- 9. **B**
- 10. **A**