



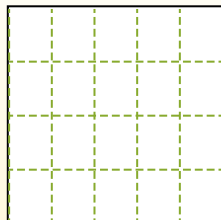
Partition the shape as described and then count to find the number of boxes.

**Answers**

Rows go left to right.


Columns go up and down.

This has 4 rows and 5 columns.  
There are 20 boxes total.



1. \_\_\_\_\_
2. \_\_\_\_\_
3. \_\_\_\_\_
4. \_\_\_\_\_
5. \_\_\_\_\_
6. \_\_\_\_\_
7. \_\_\_\_\_
8. \_\_\_\_\_
9. \_\_\_\_\_


1) 3 rows  
5 columns




2) 3 rows  
3 columns




3) 2 rows  
5 columns




4) 3 rows  
2 columns




5) 4 rows  
3 columns




6) 4 rows  
4 columns




7) 4 rows  
2 columns



8) 3 rows  
4 columns



9) 5 rows  
5 columns





Partition the shape as described and then count to find the number of boxes.

Rows go left to right.

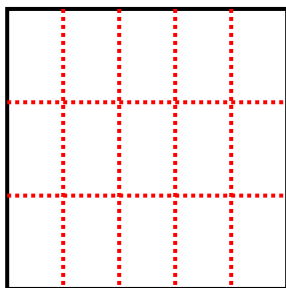
Columns go up and down.

This has 4 rows and 5 columns.  
There are 20 boxes total.

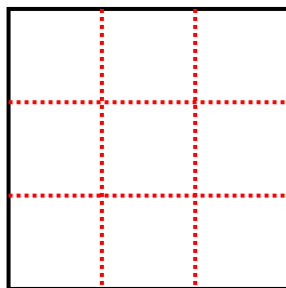


Answers

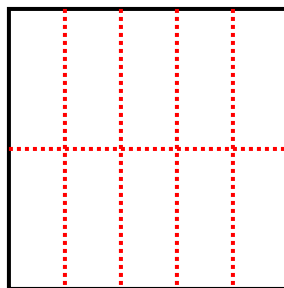
1) 3 rows  
5 columns



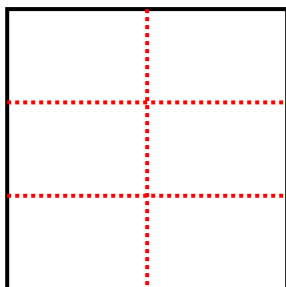
2) 3 rows  
3 columns



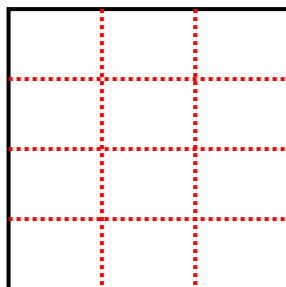
3) 2 rows  
5 columns




4) 3 rows  
2 columns



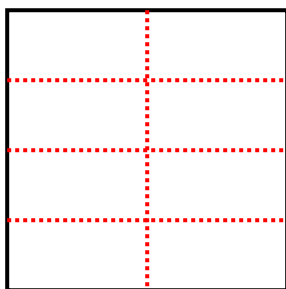
5) 4 rows  
3 columns



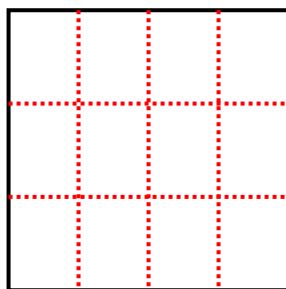
6) 4 rows  
4 columns



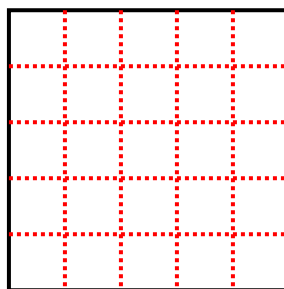
7) 4 rows  
2 columns



8) 3 rows  
4 columns



9) 5 rows  
5 columns



1. 15

2. 9

3. 10

4. 6

5. 12

6. 16

7. 8

8. 12

9. 25