





Use the array provided to solve each problem.


1) $27 \times 20 =$




2) $20 \times 24 =$




3) $28 \times 20 =$




4) $22 \times 20 =$



5) $20 \times 26 =$



6) $20 \times 28 =$



Answers

1. _____

2. _____

3. _____

4. _____

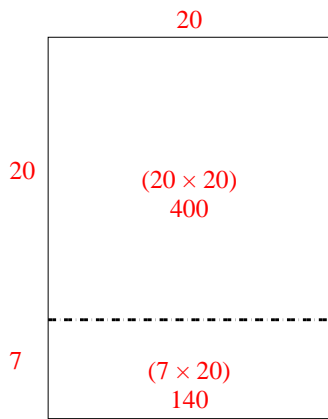
5. _____

6. _____

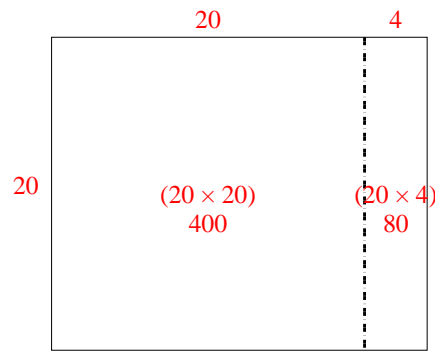


Use the array provided to solve each problem.

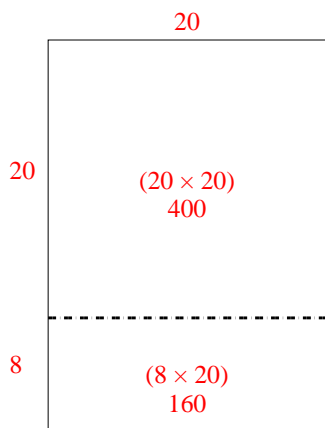
1) $27 \times 20 =$



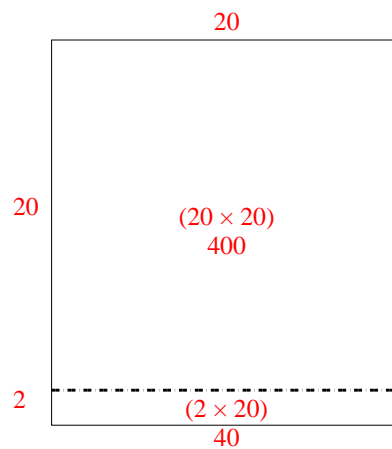
2) $20 \times 24 =$



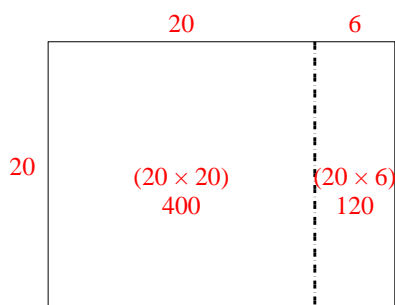
3) $28 \times 20 =$



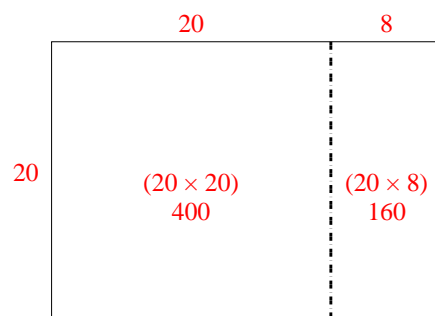
4) $22 \times 20 =$



5) $20 \times 26 =$



6) $20 \times 28 =$



Answers

1. 540

2. 480

3. 560

4. 440

5. 520

6. 560