





Use the array provided to solve each problem.


1) $23 \times 20 =$




2) $20 \times 28 =$




3) $20 \times 21 =$




4) $26 \times 20 =$



5) $20 \times 22 =$



6) $25 \times 20 =$



Answers

1. _____

2. _____

3. _____

4. _____

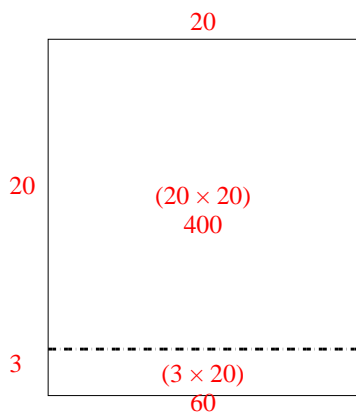
5. _____

6. _____

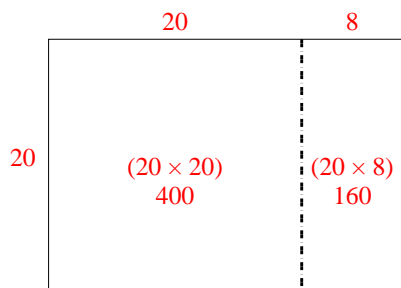


Use the array provided to solve each problem.

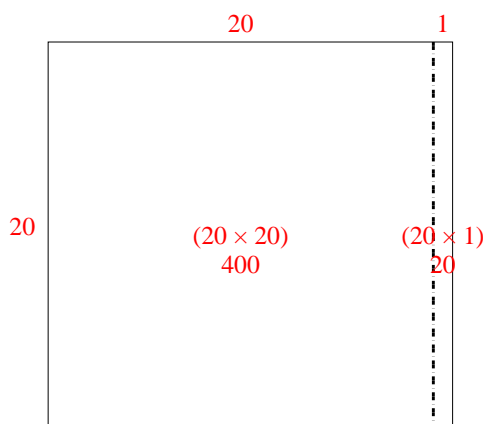
1) $23 \times 20 =$



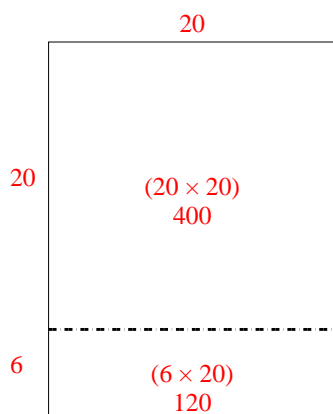
2) $20 \times 28 =$



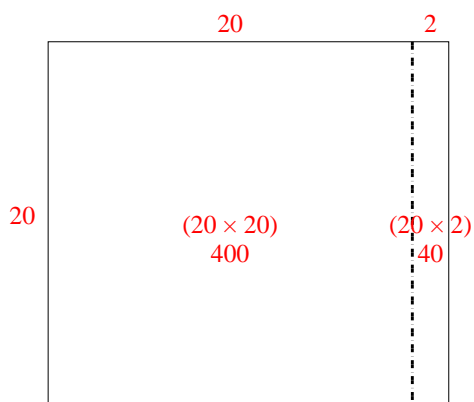
3) $20 \times 21 =$



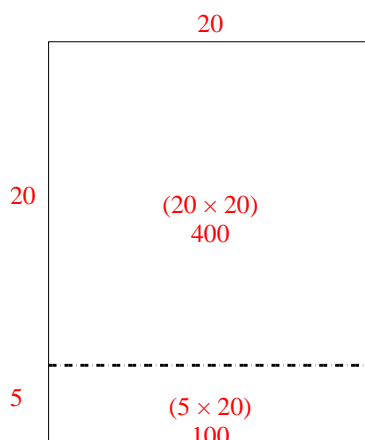
4) $26 \times 20 =$



5) $20 \times 22 =$



6) $25 \times 20 =$



Answers

1. 460

2. 560

3. 420

4. 520

5. 440

6. 500