





Use the array provided to solve each problem.


1)  $21 \times 20 =$




2)  $10 \times 17 =$




3)  $10 \times 13 =$




4)  $19 \times 10 =$



5)  $15 \times 10 =$



6)  $10 \times 14 =$



Answers

1. \_\_\_\_\_

2. \_\_\_\_\_

3. \_\_\_\_\_

4. \_\_\_\_\_

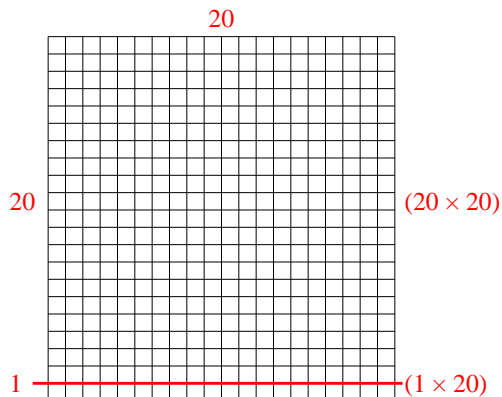
5. \_\_\_\_\_

6. \_\_\_\_\_

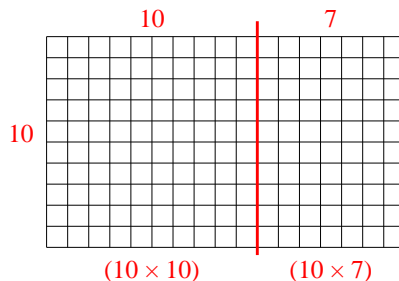


Use the array provided to solve each problem.

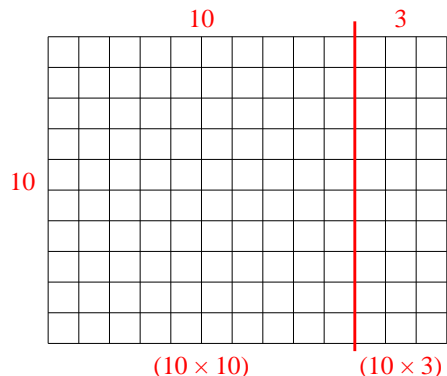
1)  $21 \times 20 =$



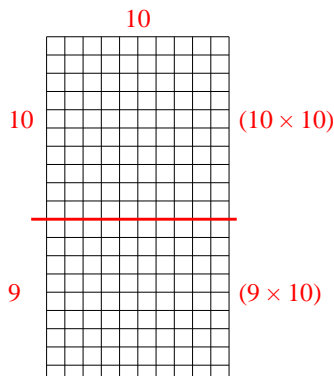
2)  $10 \times 17 =$



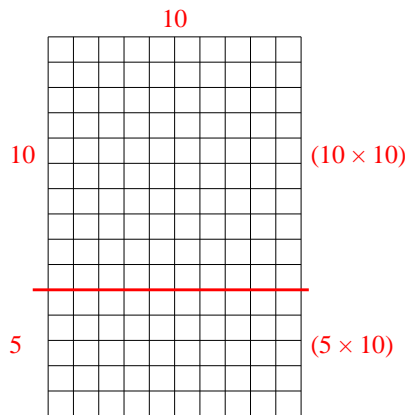
3)  $10 \times 13 =$



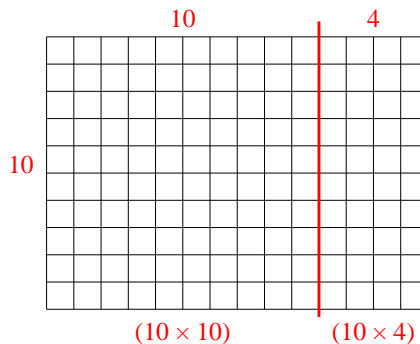
4)  $19 \times 10 =$



5)  $15 \times 10 =$



6)  $10 \times 14 =$



Answers

1. **420**

2. **170**

3. **130**

4. **190**

5. **150**

6. **140**