





Use the array provided to solve each problem.


1)  $29 \times 20 =$




2)  $18 \times 10 =$




3)  $11 \times 10 =$




4)  $17 \times 10 =$



5)  $10 \times 18 =$



6)  $10 \times 11 =$



**Answers**

1. \_\_\_\_\_

2. \_\_\_\_\_

3. \_\_\_\_\_

4. \_\_\_\_\_

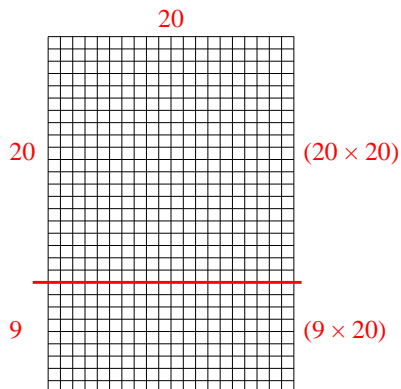
5. \_\_\_\_\_

6. \_\_\_\_\_

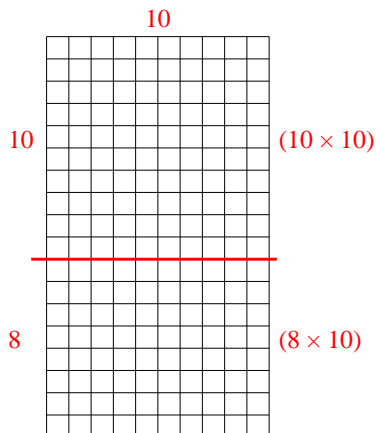


Use the array provided to solve each problem.

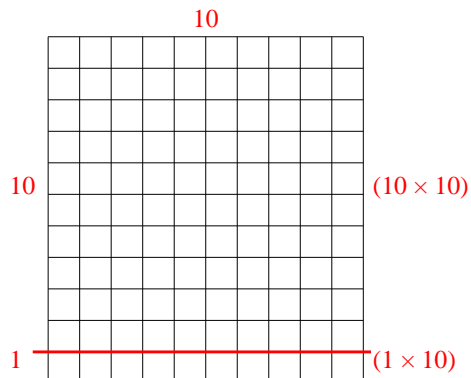
1)  $29 \times 20 =$



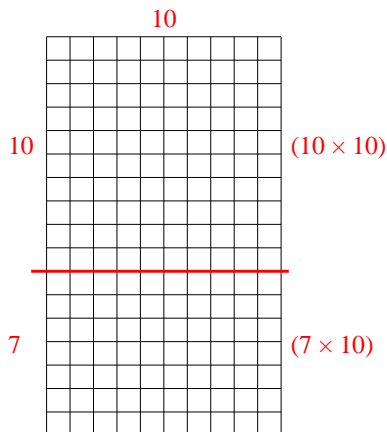
2)  $18 \times 10 =$



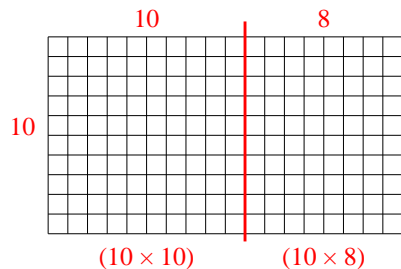
3)  $11 \times 10 =$



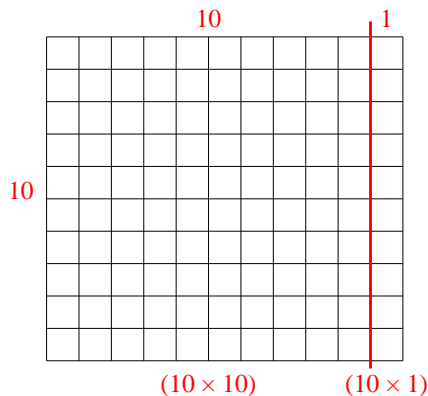
4)  $17 \times 10 =$



5)  $10 \times 18 =$



6)  $10 \times 11 =$



Answers

1. **580**

2. **180**

3. **110**

4. **170**


5. **180**

6. **110**




Use the array provided to solve each problem.


1)  $11 \times 10 =$




2)  $17 \times 10 =$




3)  $10 \times 13 =$




4)  $10 \times 17 =$



5)  $10 \times 19 =$



6)  $10 \times 15 =$



Answers

1. \_\_\_\_\_

2. \_\_\_\_\_

3. \_\_\_\_\_

4. \_\_\_\_\_

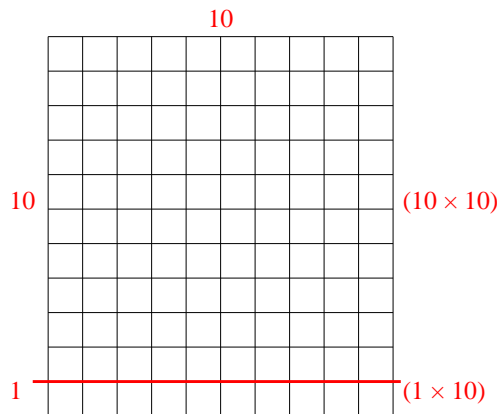
5. \_\_\_\_\_

6. \_\_\_\_\_

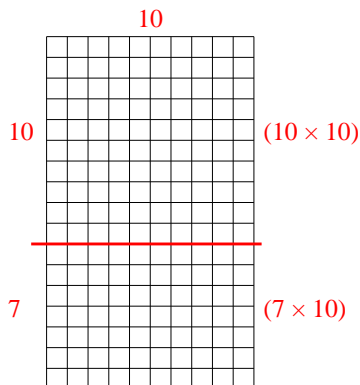


Use the array provided to solve each problem.

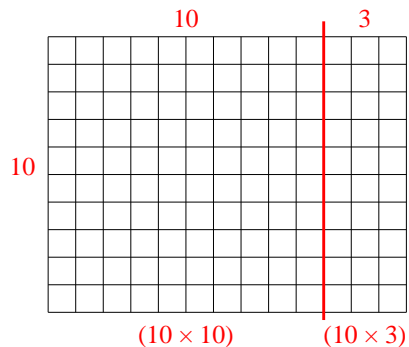
1)  $11 \times 10 =$



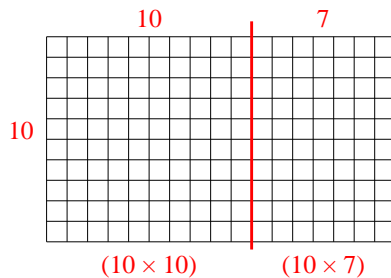
2)  $17 \times 10 =$



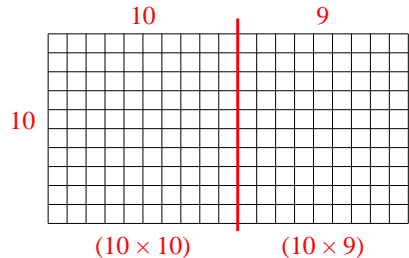
3)  $10 \times 13 =$



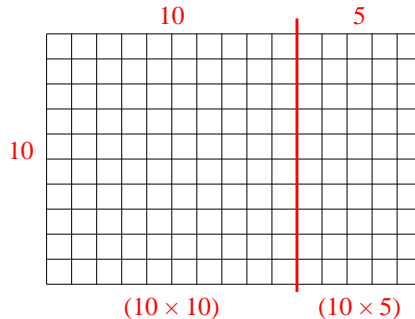
4)  $10 \times 17 =$



5)  $10 \times 19 =$



6)  $10 \times 15 =$



Answers

1. **110**

2. **170**

3. **130**

4. **170**


5. **190**

6. **150**




Use the array provided to solve each problem.


1)  $16 \times 10 =$




2)  $10 \times 12 =$




3)  $19 \times 10 =$




4)  $10 \times 19 =$



5)  $15 \times 10 =$



6)  $10 \times 18 =$



**Answers**

1. \_\_\_\_\_

2. \_\_\_\_\_

3. \_\_\_\_\_

4. \_\_\_\_\_

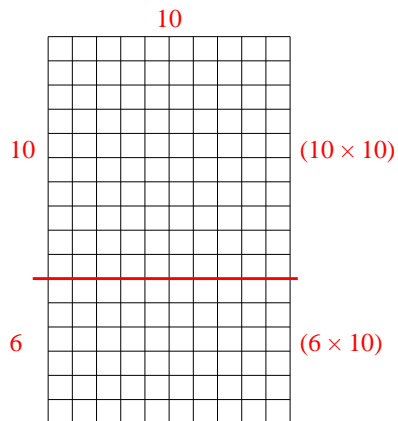
5. \_\_\_\_\_

6. \_\_\_\_\_

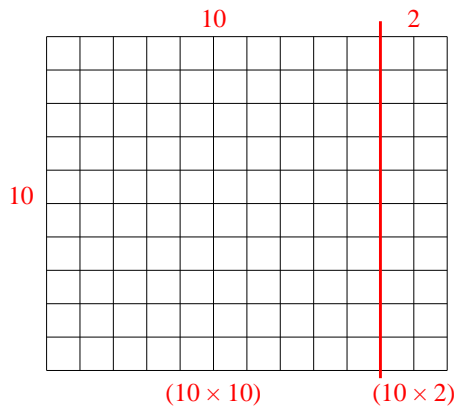


Use the array provided to solve each problem.

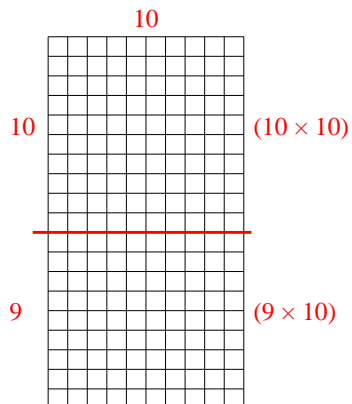
1)  $16 \times 10 =$



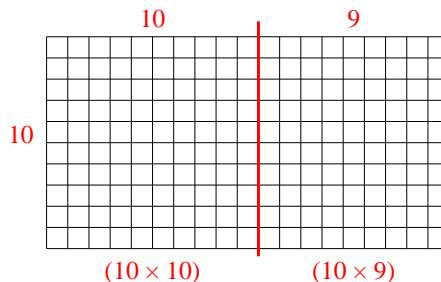
2)  $10 \times 12 =$



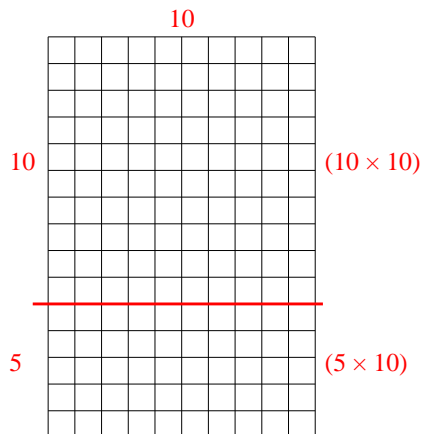
3)  $19 \times 10 =$



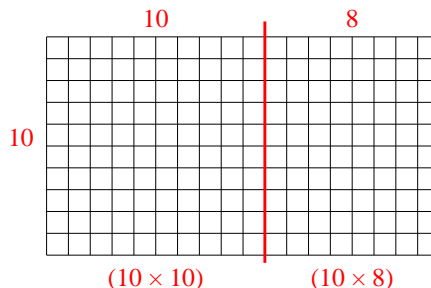
4)  $10 \times 19 =$



5)  $15 \times 10 =$



6)  $10 \times 18 =$



Answers

1. 160

2. 120

3. 190

4. 190


5. 150

6. 180




Use the array provided to solve each problem.


1)  $23 \times 20 =$




2)  $10 \times 13 =$




3)  $10 \times 11 =$




4)  $10 \times 17 =$



5)  $10 \times 16 =$



6)  $19 \times 10 =$



Answers

1. \_\_\_\_\_

2. \_\_\_\_\_

3. \_\_\_\_\_

4. \_\_\_\_\_

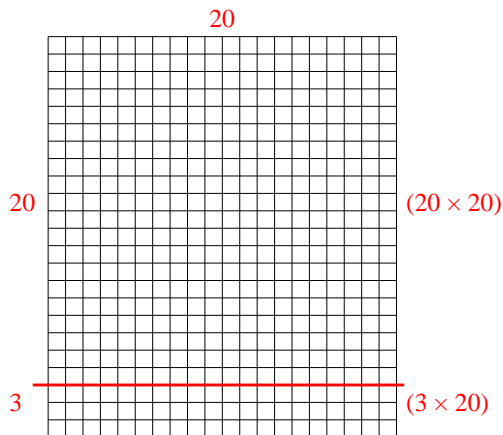
5. \_\_\_\_\_

6. \_\_\_\_\_

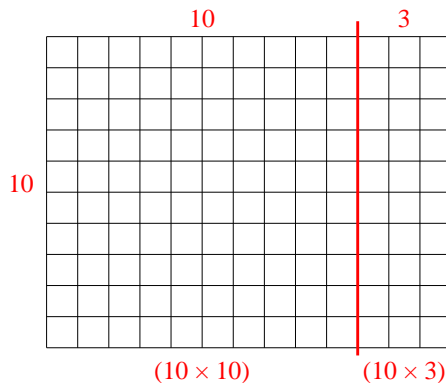


Use the array provided to solve each problem.

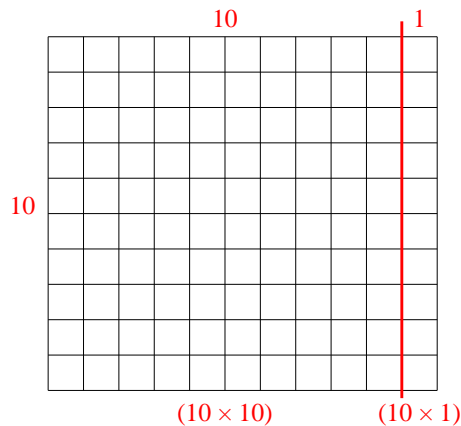
1)  $23 \times 20 =$



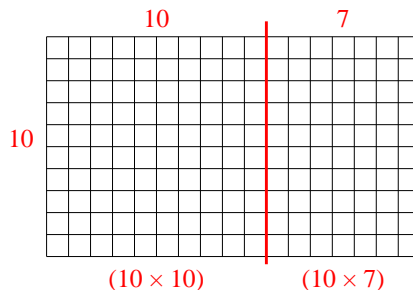
2)  $10 \times 13 =$



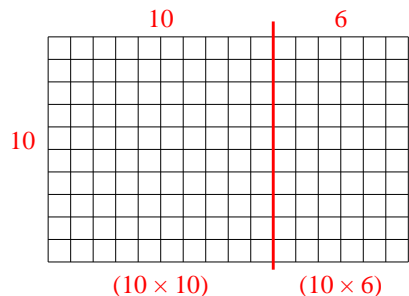
3)  $10 \times 11 =$



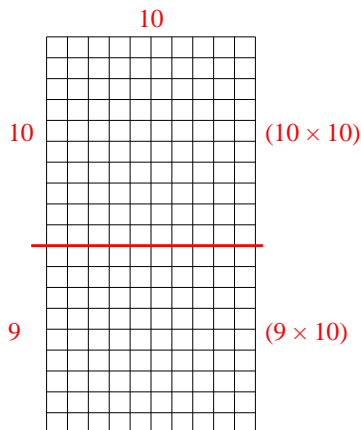
4)  $10 \times 17 =$



5)  $10 \times 16 =$



6)  $19 \times 10 =$



Answers

1. **460**

2. **130**

3. **110**

4. **170**

5. **160**


6. **190**






Use the array provided to solve each problem.


1)  $33 \times 20 =$




2)  $22 \times 20 =$




3)  $10 \times 13 =$




4)  $15 \times 10 =$



5)  $10 \times 14 =$



6)  $12 \times 10 =$



Answers

1. \_\_\_\_\_

2. \_\_\_\_\_

3. \_\_\_\_\_

4. \_\_\_\_\_

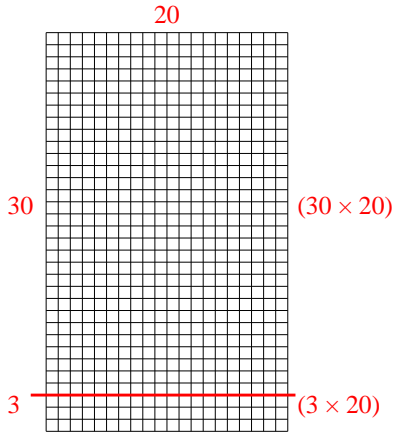
5. \_\_\_\_\_

6. \_\_\_\_\_

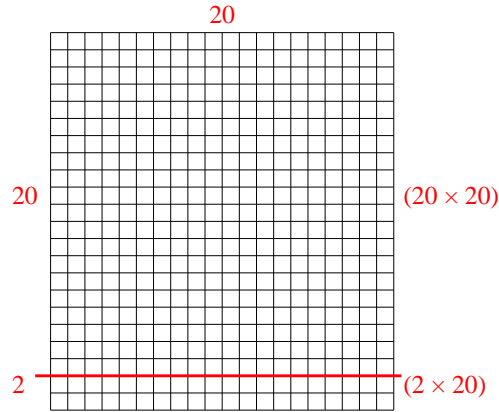


Use the array provided to solve each problem.

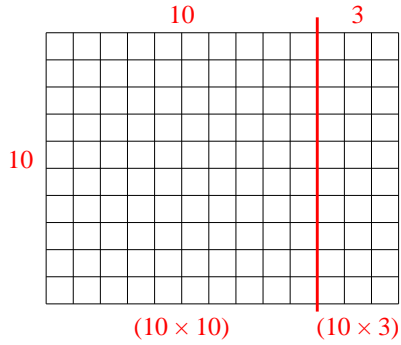
1)  $33 \times 20 =$



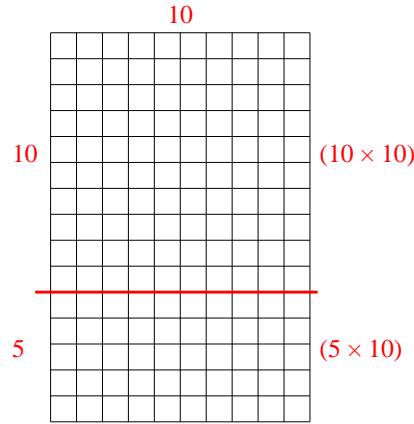
2)  $22 \times 20 =$



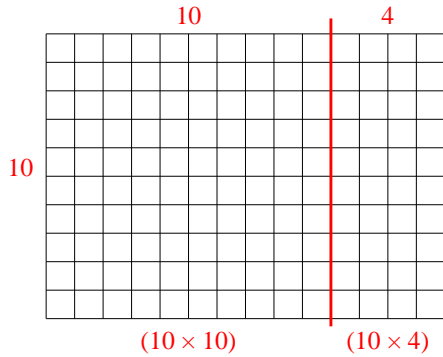
3)  $10 \times 13 =$



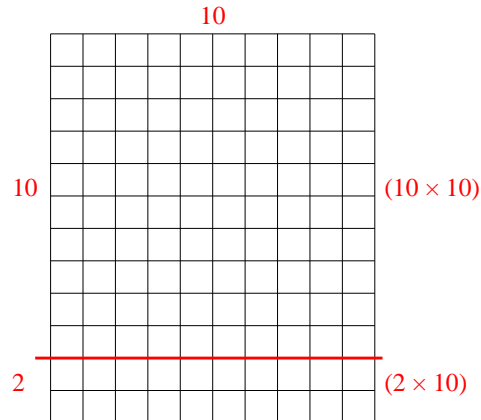
4)  $15 \times 10 =$



5)  $10 \times 14 =$



6)  $12 \times 10 =$



Answers

1. 660

2. 440

3. 130

4. 150


5. 140

6. 120




Use the array provided to solve each problem.


1)  $10 \times 13 =$




2)  $18 \times 10 =$




3)  $14 \times 10 =$




4)  $16 \times 10 =$



5)  $10 \times 15 =$



6)  $10 \times 14 =$



Answers

1. \_\_\_\_\_

2. \_\_\_\_\_

3. \_\_\_\_\_

4. \_\_\_\_\_

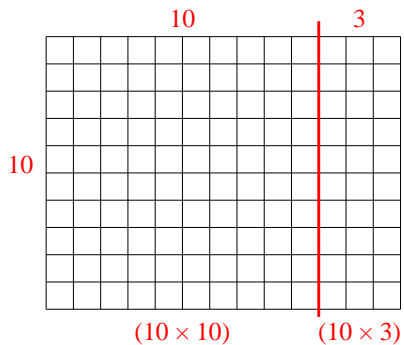
5. \_\_\_\_\_

6. \_\_\_\_\_

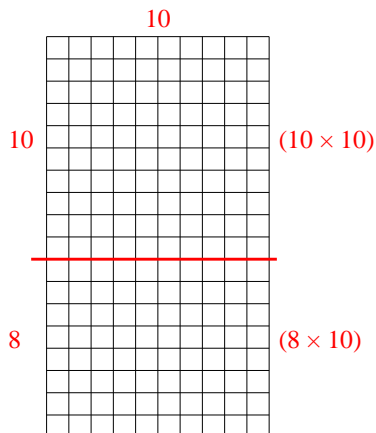


Use the array provided to solve each problem.

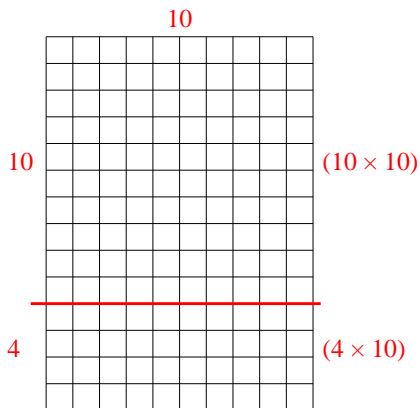
1)  $10 \times 13 =$



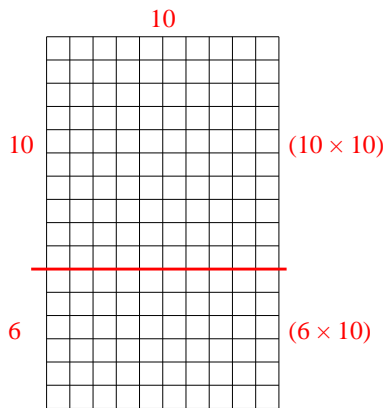
2)  $18 \times 10 =$



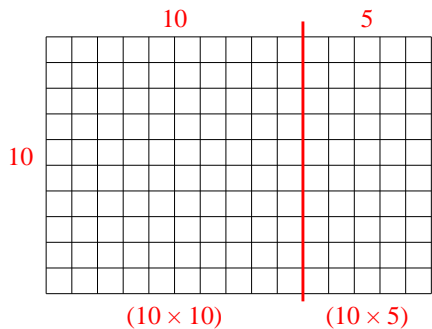
3)  $14 \times 10 =$



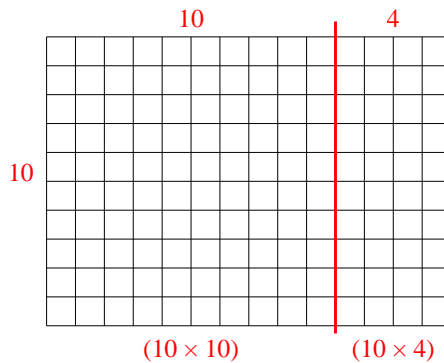
4)  $16 \times 10 =$



5)  $10 \times 15 =$



6)  $10 \times 14 =$



Answers

1. 130

2. 180

3. 140

4. 160


5. 150

6. 140




Use the array provided to solve each problem.


1)  $20 \times 22 =$




2)  $10 \times 13 =$




3)  $15 \times 10 =$




4)  $16 \times 10 =$



5)  $12 \times 10 =$



6)  $10 \times 11 =$



**Answers**

1. \_\_\_\_\_

2. \_\_\_\_\_

3. \_\_\_\_\_

4. \_\_\_\_\_

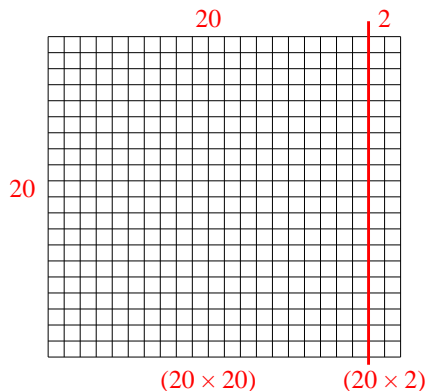
5. \_\_\_\_\_

6. \_\_\_\_\_

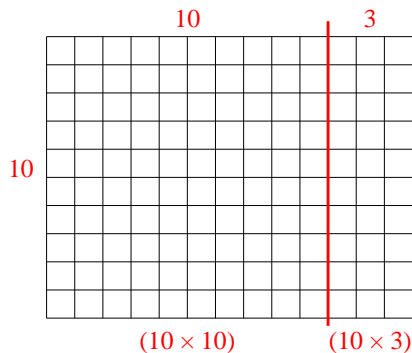


Use the array provided to solve each problem.

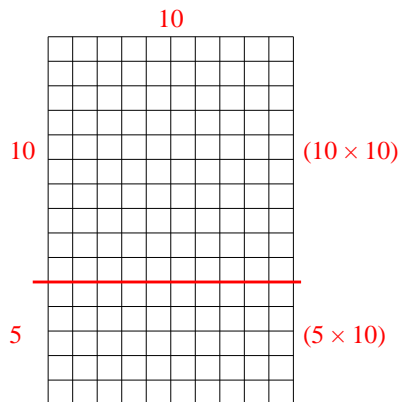
1)  $20 \times 22 =$



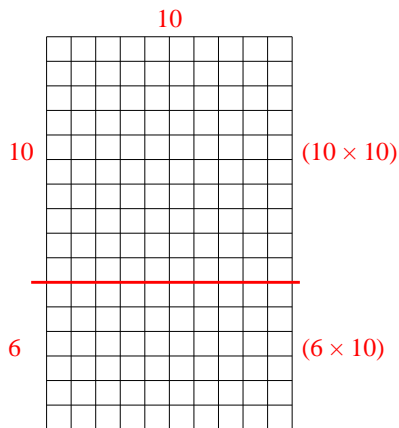
2)  $10 \times 13 =$



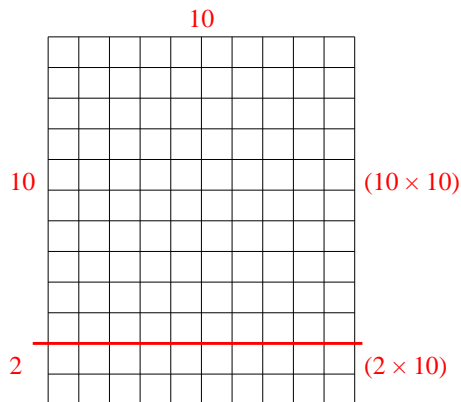
3)  $15 \times 10 =$



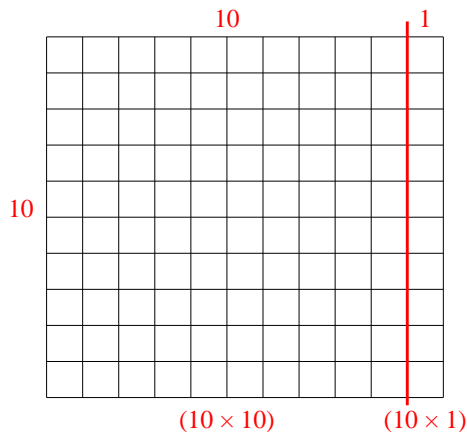
4)  $16 \times 10 =$



5)  $12 \times 10 =$



6)  $10 \times 11 =$



Answers

1. 440

2. 130

3. 150

4. 160


5. 120

6. 110




Use the array provided to solve each problem.


1)  $22 \times 10 =$




2)  $20 \times 27 =$




3)  $10 \times 12 =$




4)  $10 \times 19 =$



5)  $13 \times 10 =$



6)  $18 \times 10 =$



Answers

1. \_\_\_\_\_

2. \_\_\_\_\_

3. \_\_\_\_\_

4. \_\_\_\_\_

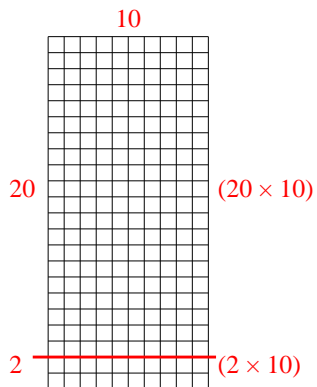
5. \_\_\_\_\_

6. \_\_\_\_\_

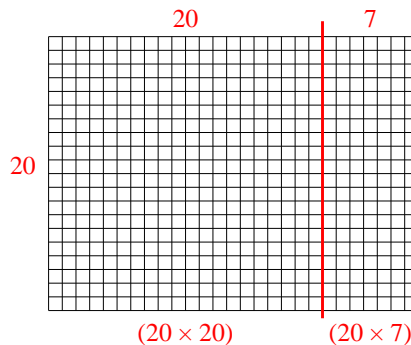


Use the array provided to solve each problem.

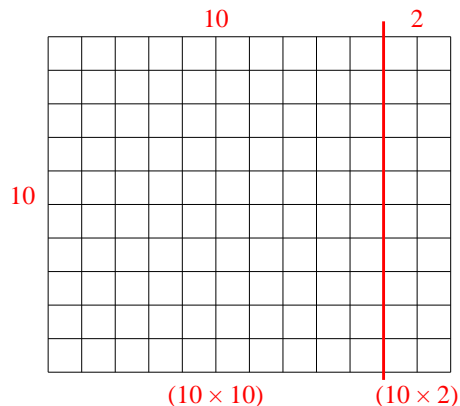
1)  $22 \times 10 =$



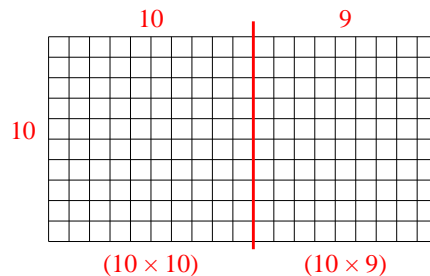
2)  $20 \times 27 =$



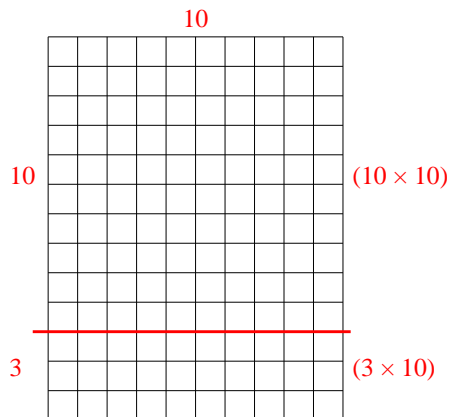
3)  $10 \times 12 =$



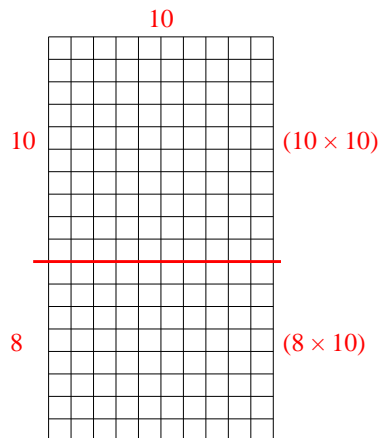
4)  $10 \times 19 =$



5)  $13 \times 10 =$



6)  $18 \times 10 =$



Answers

1. **220**

2. **540**

3. **120**

4. **190**

5. **130**


6. **180**






Use the array provided to solve each problem.


1)  $13 \times 10 =$




2)  $10 \times 18 =$




3)  $10 \times 11 =$




4)  $16 \times 10 =$



5)  $10 \times 12 =$



6)  $15 \times 10 =$



Answers

1. \_\_\_\_\_

2. \_\_\_\_\_

3. \_\_\_\_\_

4. \_\_\_\_\_

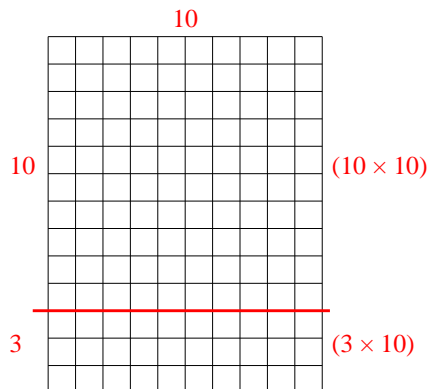
5. \_\_\_\_\_

6. \_\_\_\_\_

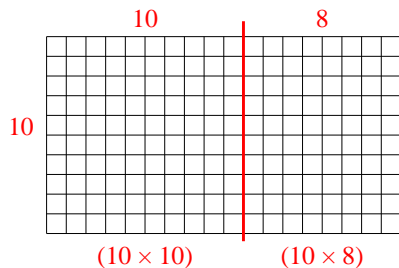


Use the array provided to solve each problem.

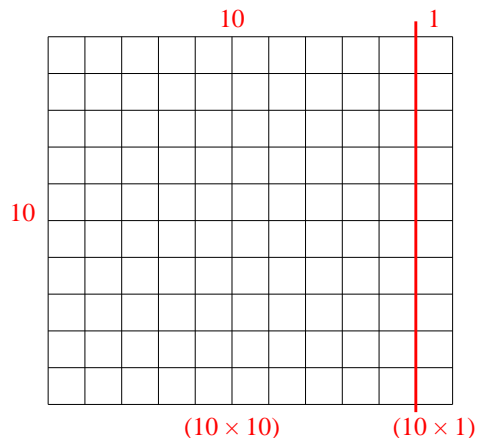
1)  $13 \times 10 =$



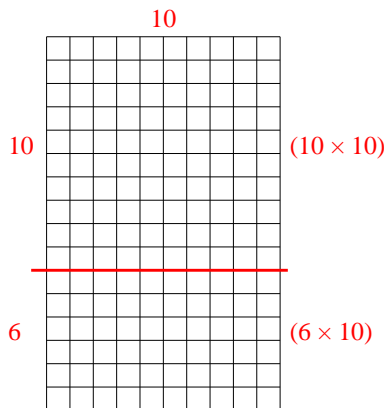
2)  $10 \times 18 =$



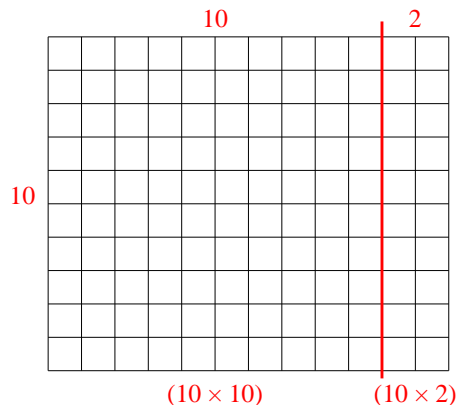
3)  $10 \times 11 =$



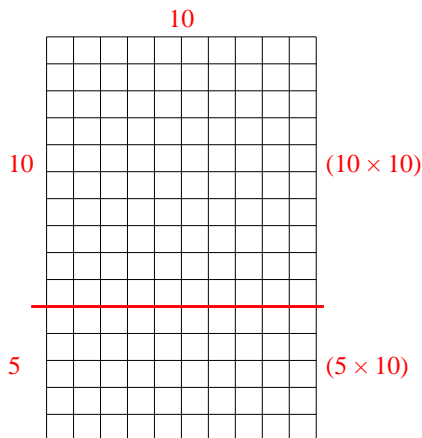
4)  $16 \times 10 =$



5)  $10 \times 12 =$



6)  $15 \times 10 =$



Answers

1. **130**

2. **180**

3. **110**

4. **160**


5. **120**

6. **150**




Use the array provided to solve each problem.


1)  $10 \times 16 =$




2)  $11 \times 10 =$




3)  $10 \times 12 =$




4)  $10 \times 18 =$



5)  $10 \times 19 =$



6)  $10 \times 13 =$



Answers

1. \_\_\_\_\_

2. \_\_\_\_\_

3. \_\_\_\_\_

4. \_\_\_\_\_

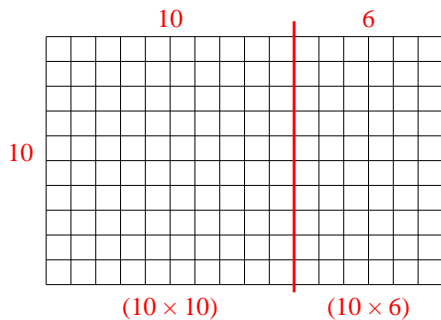
5. \_\_\_\_\_

6. \_\_\_\_\_

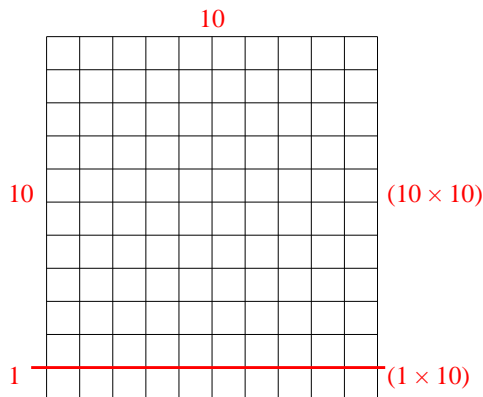


Use the array provided to solve each problem.

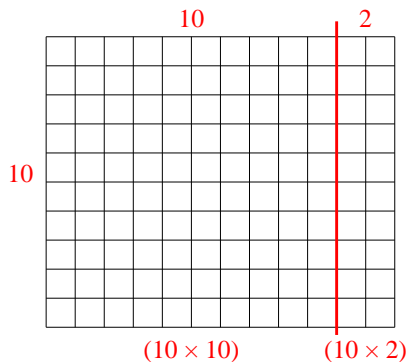
1)  $10 \times 16 =$



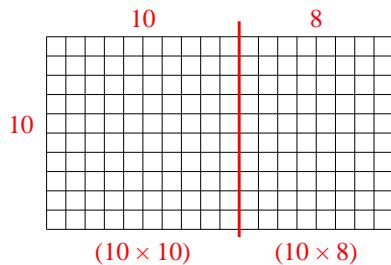
2)  $11 \times 10 =$



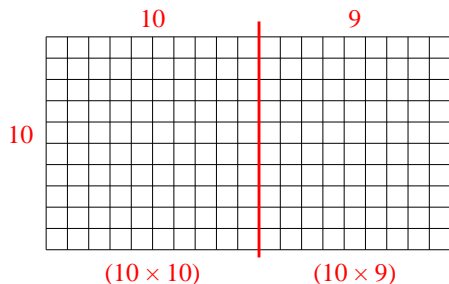
3)  $10 \times 12 =$



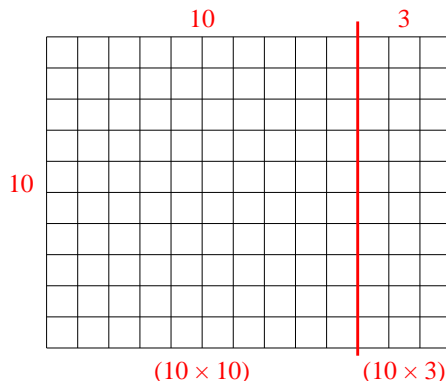
4)  $10 \times 18 =$



5)  $10 \times 19 =$



6)  $10 \times 13 =$



Answers

1. 160

2. 110

3. 120

4. 180

5. 190

6. 130