





Write an equation to express the array and then find the number of shapes.

Answers

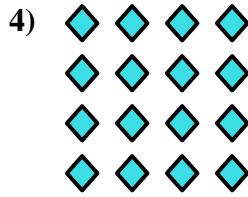



Ex.  $5 \times 3 = 15$

1. \_\_\_\_\_

2. \_\_\_\_\_

3. \_\_\_\_\_

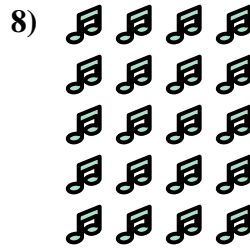


4. \_\_\_\_\_

5. \_\_\_\_\_

6. \_\_\_\_\_


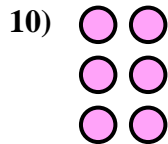

7. \_\_\_\_\_



8. \_\_\_\_\_

9. \_\_\_\_\_

10. \_\_\_\_\_

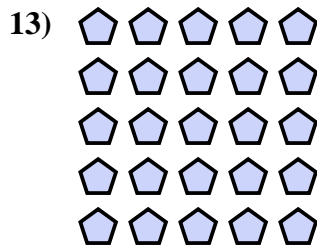



11. \_\_\_\_\_

12. \_\_\_\_\_

13. \_\_\_\_\_

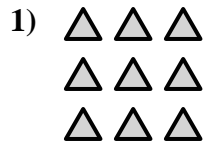

14. \_\_\_\_\_



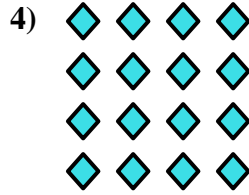



Write an equation to express the array and then find the number of shapes.

Answers



Ex.  $5 \times 3 = 15$



1.  $3 \times 3 = 9$

2.  $2 \times 3 = 6$


3.  $4 \times 2 = 8$

4.  $4 \times 4 = 16$

5.  $2 \times 5 = 10$

6.  $2 \times 4 = 8$

7.  $4 \times 3 = 12$


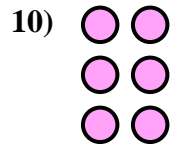



8.  $5 \times 4 = 20$

9.  $3 \times 4 = 12$

10.  $3 \times 2 = 6$

11.  $3 \times 5 = 15$



12.  $4 \times 5 = 20$

13.  $5 \times 5 = 25$

14.  $2 \times 2 = 4$

