





Write an equation to express the array and then find the number of shapes.



Answers

Ex. $2 \times 3 = 6$

1. _____

2. _____

3. _____

4. _____

5. _____

6. _____

7. _____

8. _____

9. _____

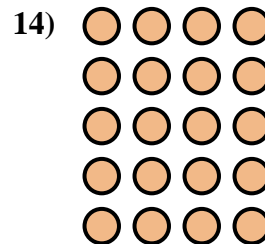



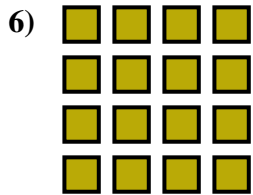
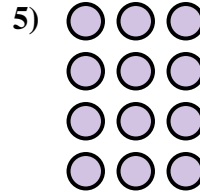

10. _____

11. _____

12. _____



13. _____

14. _____





Write an equation to express the array and then find the number of shapes.



Answers

Ex. $2 \times 3 = 6$

1. $3 \times 5 = 15$

2. $3 \times 3 = 9$

3. $2 \times 5 = 10$

4. $3 \times 2 = 6$

5. $4 \times 3 = 12$

6. $4 \times 4 = 16$

7. $4 \times 2 = 8$

8. $3 \times 4 = 12$

9. $5 \times 5 = 25$

10. $4 \times 5 = 20$

11. $5 \times 2 = 10$

12. $2 \times 4 = 8$

13. $2 \times 2 = 4$

14. $5 \times 4 = 20$

