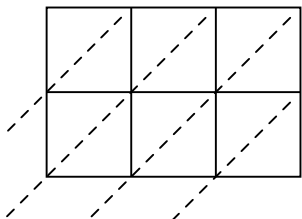




Use lattice multiplication to solve each problem.

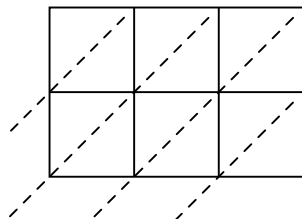
1) $718 \times 14 =$



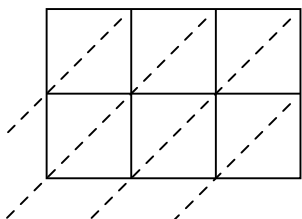
2) $428 \times 34 =$



3) $823 \times 37 =$



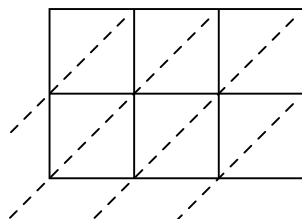
4) $171 \times 34 =$



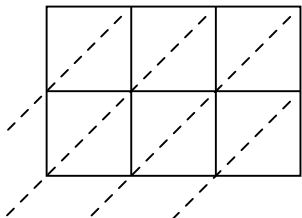
5) $745 \times 82 =$



6) $314 \times 99 =$



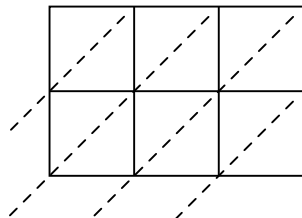
7) $920 \times 70 =$



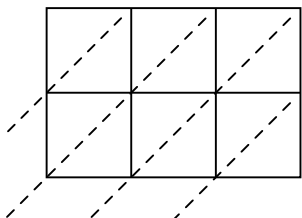
8) $664 \times 98 =$



9) $281 \times 53 =$



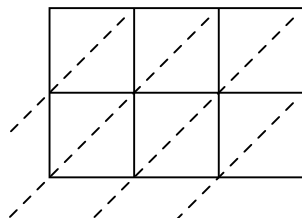
10) $530 \times 53 =$



11) $104 \times 75 =$



12) $375 \times 51 =$



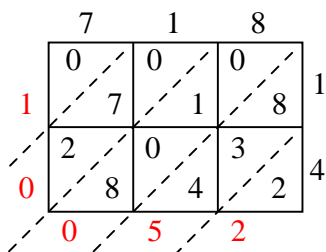
Answers

1. _____
2. _____
3. _____
4. _____
5. _____
6. _____
7. _____
8. _____
9. _____
10. _____
11. _____
12. _____

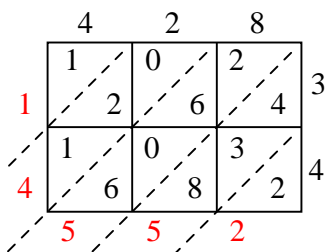


Use lattice multiplication to solve each problem.

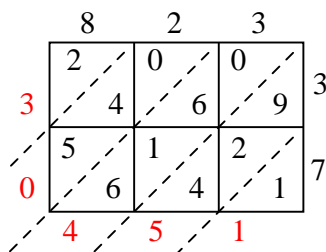
1) $718 \times 14 =$



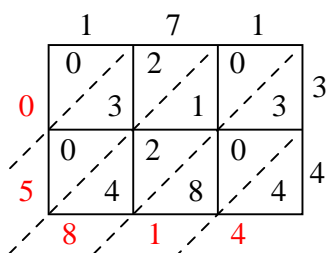
2) $428 \times 34 =$



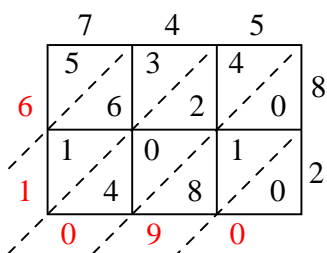
3) $823 \times 37 =$



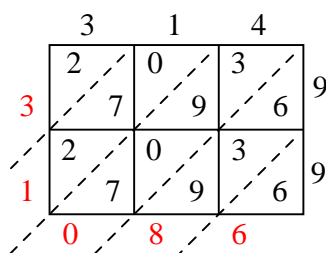
4) $171 \times 34 =$



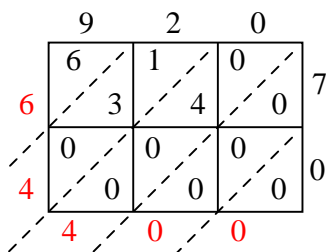
5) $745 \times 82 =$



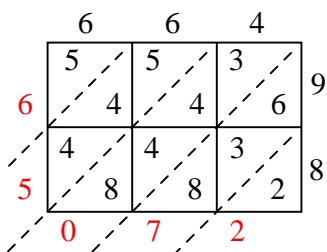
6) $314 \times 99 =$



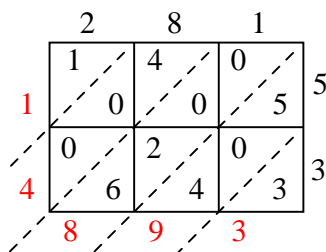
7) $920 \times 70 =$



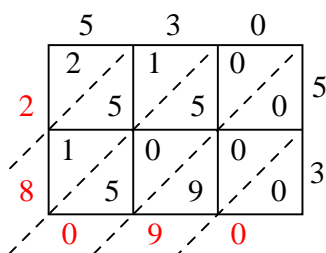
8) $664 \times 98 =$



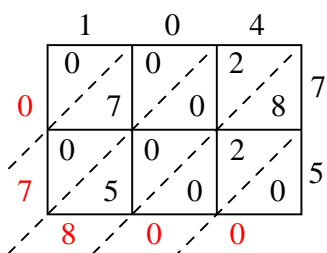
9) $281 \times 53 =$



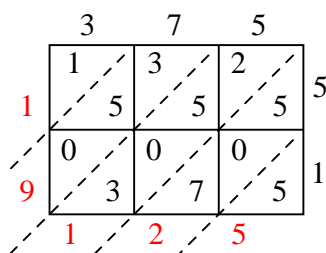
10) $530 \times 53 =$



11) $104 \times 75 =$



12) $375 \times 51 =$



Answers

1. 10,052
2. 14,552
3. 30,451
4. 5,814
5. 61,090
6. 31,086
7. 64,400
8. 65,072
9. 14,893
10. 28,090
11. 7,800
12. 19,125