



Use lattice multiplication to solve each problem.

1)  $485 \times 11 =$



2)  $401 \times 55 =$



3)  $665 \times 39 =$



4)  $257 \times 58 =$



5)  $242 \times 51 =$



6)  $338 \times 18 =$



7)  $690 \times 32 =$



8)  $309 \times 90 =$



9)  $211 \times 95 =$



10)  $226 \times 83 =$



11)  $329 \times 59 =$



12)  $306 \times 62 =$



**Answers**

1. \_\_\_\_\_

2. \_\_\_\_\_

3. \_\_\_\_\_

4. \_\_\_\_\_

5. \_\_\_\_\_

6. \_\_\_\_\_

7. \_\_\_\_\_

8. \_\_\_\_\_

9. \_\_\_\_\_

10. \_\_\_\_\_

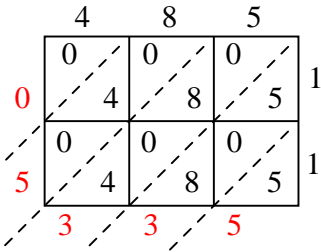
11. \_\_\_\_\_

12. \_\_\_\_\_

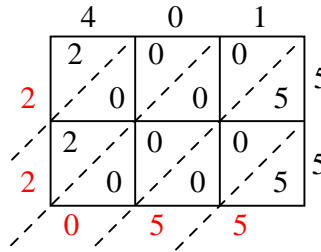


Use lattice multiplication to solve each problem.

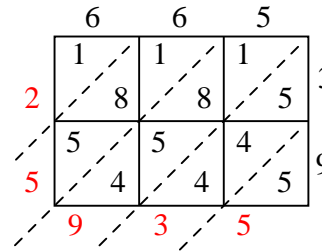
1)  $485 \times 11 =$



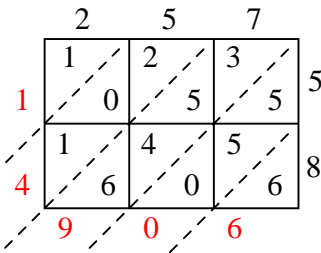
2)  $401 \times 55 =$



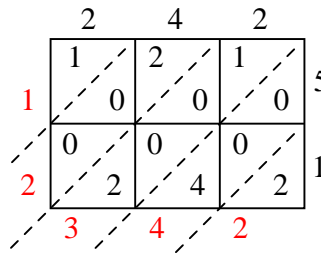
3)  $665 \times 39 =$



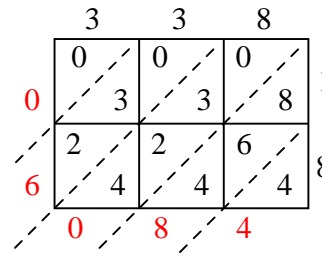
4)  $257 \times 58 =$



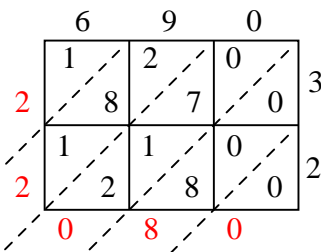
5)  $242 \times 51 =$



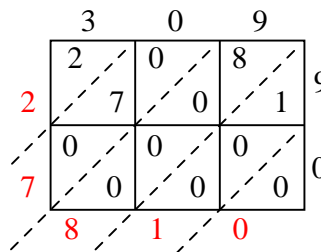
6)  $338 \times 18 =$



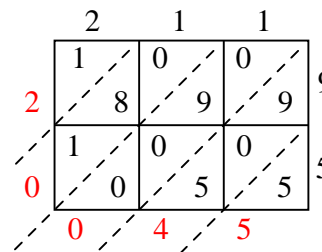
7)  $690 \times 32 =$



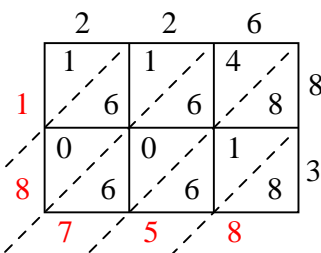
8)  $309 \times 90 =$



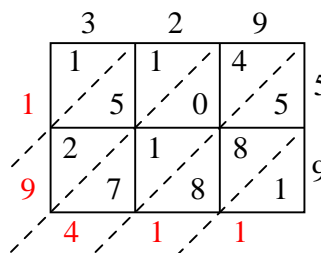
9)  $211 \times 95 =$



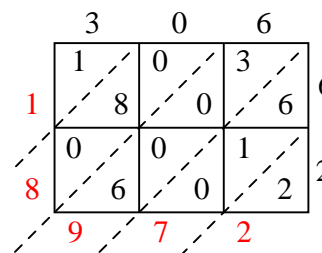
10)  $226 \times 83 =$



11)  $329 \times 59 =$



12)  $306 \times 62 =$



Answers

1. **5,335**

2. **22,055**

3. **25,935**

4. **14,906**

5. **12,342**

6. **6,084**

7. **22,080**

8. **27,810**

9. **20,045**

10. **18,758**

11. **19,411**

12. **18,972**