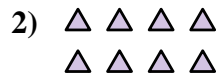




Write each array as an addition problem and solve.

Answers


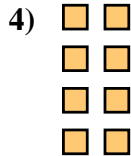



Ex. 5+5+5+5+5=25

1. _____

2. _____

3. _____


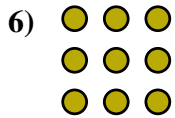


4. _____

5. _____

6. _____

7. _____

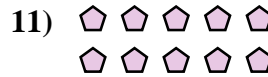
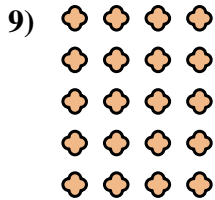


8. _____

9. _____

10. _____

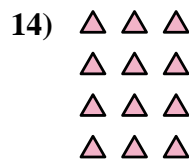
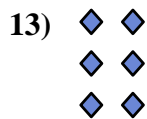
11. _____



12. _____

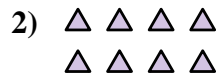
13. _____

14. _____





Write each array as an addition problem and solve.



Answers

Ex. 5+5+5+5+5=25

1. 5+5+5=15

2. 4+4=8

3. 2+2+2+2+2=10

4. 2+2+2+2=8

5. 5+5+5+5=20

6. 3+3+3=9

7. 4+4+4+4=16

8. 2+2=4

9. 4+4+4+4+4=20

10. 3+3=6

11. 5+5=10

12. 4+4+4=12

13. 2+2+2=6

14. 3+3+3+3=12

